

Name _____

2012

Mathematics.

1. Draw the following fractions.

a) $\frac{1}{2}$


c) $\frac{1}{3}$

e) $\frac{6}{10}$

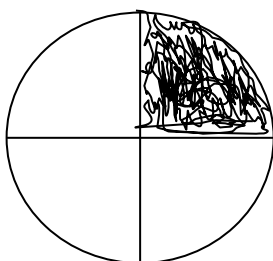
b) $\frac{2}{10}$

d) $\frac{4}{8}$

2. Name the fractions below.



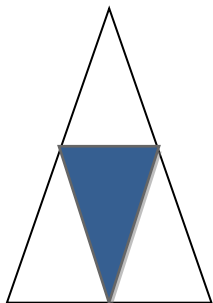
One half / a half = $\frac{1}{2}$




_____ = _____



_____ = $\frac{1}{10}$



One quarter = _____



_____ = _____

3. Write their number names.

i) 110 = _____

ii) 507 = _____

iii) 699 = _____

iv) 999 = _____

v) 260 = _____

4. Form words using the sounds below.

bl _____, _____



br _____, _____

//oo// _____, _____

//ee// _____, _____

//ea// _____, _____
//sh// _____, _____

//ng// _____, _____

//cr// _____, _____

//ch// _____, _____