

Name _____

Literacy 1

THEME: Our transport:



1. _____ is the movement of people and their goods from one place to another.
2. Draw these means of transport

bus

bicycle

earoplane

donkey



3. Write four types of transport.

4. Write the quickest mean of transport.

5. Match types of transport with their means.

water transport

bus

railway transport

aeroplane


road transport

boat

air transport

train

6. Draw a lorry carrying things.



A person who flies an aeroplane is a _____

A _____ moves a ship.

A person who moves a bicycle is called _____

A _____ is a person who moves cars.

(cyclist, pilot, driver, captain)

Things we make:

(1) _____ are things we make using local materials.

(2) Draw these things we make:

basket

pot

mat

ropes

(3) Mention 3 things we make from wood.

_____, _____, _____

(4) Match the materials their sources.

material

sources

Palm leaves

garden

clay

forest

banana fibre

swamp

(5) Name four things we make from banana fibres.

_____ . _____ . _____ , _____

(6) Give the importance of making craft.

We make craft for _____

We make crafts for _____

Theme: Environment.


(1) What is environment?

(2) Draw these things found in the environment.


plants




stones



lakes

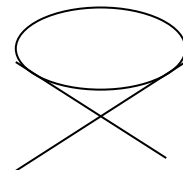
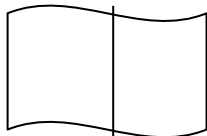


hill



(3) What are non-living things?

(4) Name these non-living things.



(5) Name two examples of living things.

(6) Write the things living things do.

e.g Living things breathe.

(7) Draw these animals in the environment.

cat



cow



snake



rat



(8) What is a flowering plant ?

(9) Name the parts of a flowering plant below.

(10) Match parts of a plant and their uses to people.

stem

for decoration

root

for medicine

leaf

for food

flower

for firewood

(11) Name parts of a plant we eat on each of these plants.

sugar cane

greens

cassava

mango

(12) Draw these places where we get water.


tap



tank



borehole



(13) Write three uses of water.

(14) Draw these activities we can do to spoil the environment.




cutting down trees.

hunting animals

Theme: Peace and Security.

- (1) _____ means living in harmony without fighting and quarrelling with one another.
- (2) Security means living with protection and _____
- (3) Tick the factors that promote peace and security at home.
obedience, fighting, respect, helping, abusing
- (4) Underline causes of insecurity at home.
stealing, love, poverty, isolation, caring, violence.

- (5) Draw these who promote peace and security at school.
teachers nurse guard



Revision

- (1) Name three things found at school.

_____ , _____ , _____

(2) Name four people found at school.

_____ , _____

(3) Draw these parts of the body.

fingers



mouth



feet



head



(4) Match people to their places of work.

carpenter

barber

Imam

butcher

mosque

butchers

carpentry

saloon.

(5) Draw these types of houses.

Tent

hut

flat

bungalow

(6) Name these things found in the first aid kit/box.

(7) Underline the types of weather.


Sunshine ,




windy ,




cloudy




stars,



rainy,



sunny



Mathematics

1. Write the missing letter in the days of the week

M__nday T__esday , We__nesday

2. How many days are in the week?

3. Write months of the year starting with letter M.


4. Divide the following numbers.

$$8 \div 4 =$$

$$9 \div 3 =$$

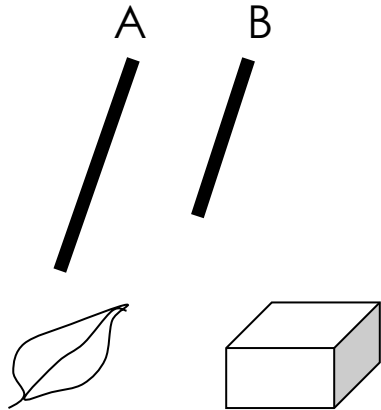
5. Share twelve mangoes to 3 children. How much will each child get?

6. What is heavier?



A _____ is heavier.

7. Match the number names to symbols.



stick _____ is longer

A _____ is lighter

8. How much is it?

8 0 0 sh

+ 2 0 0 sh

3 0 0 sh

+ 2 0 0 sh

3 0 0

+ 1 0 0

9 0 0 sh

- 4 0 0 sh

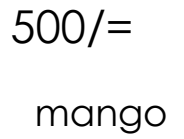

4 5 0

- 2 0 0

4 0 0

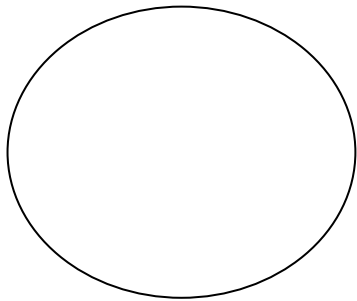
+ 3 0 0

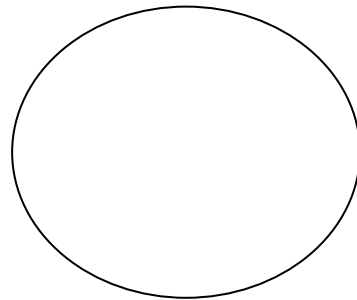
9. Shopping



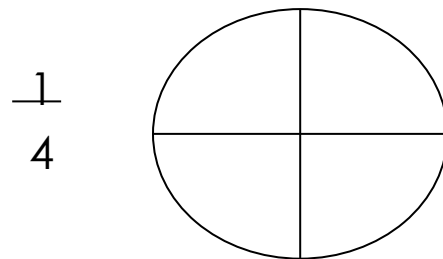

- How much money will you pay for a mango?
- Which item cost 300 shillings?
- How much money will you pay for an egg and an orange?

10. What is the time?





11. Shade the given parts.




12. Add using a number line.

$$2 + 1 = \underline{\quad}$$

0 1 2 3 4 5 6

$$4 + 2 = \underline{\hspace{2cm}}$$



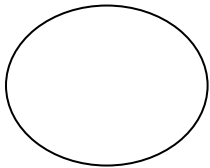
0 1 2 3 4 5 6 7 8

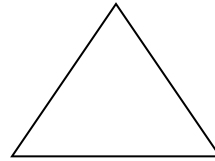
$$8 - 4 = \underline{\hspace{2cm}}$$




0 1 2 3 4 5 6 7 8

13. Name the shapes below.









14. Add these.

$$3 + 5 =$$

$$5 + 4 =$$

T O

$$\begin{array}{r} 6 \\ + 6 \\ \hline \end{array}$$

$$\begin{array}{r} 3 \quad 6 \\ + 5 \quad 2 \\ \hline \end{array}$$

15. Subtract

$$12 - 6 =$$

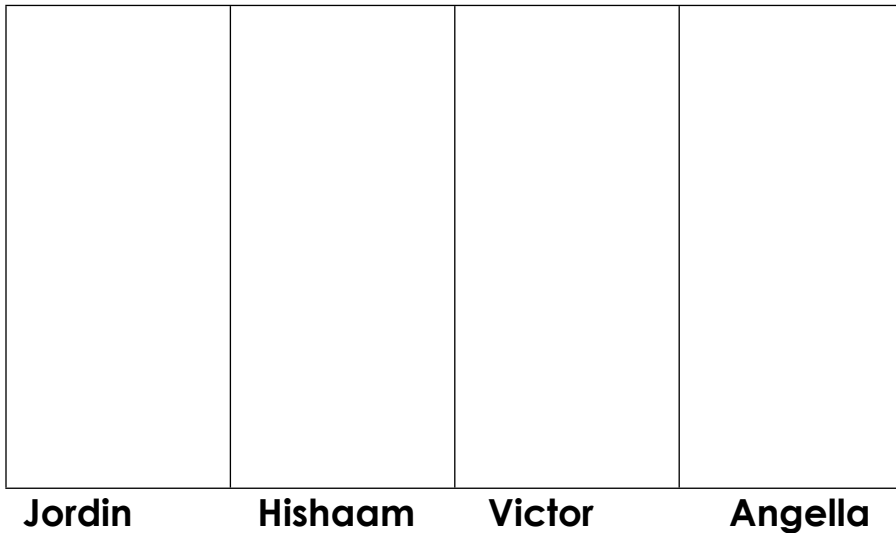
$$3 - 3 =$$

$$\begin{array}{r} 7 \\ - 2 \\ \hline \end{array}$$

$$\begin{array}{r} 5 \quad 2 \\ - 3 \quad 1 \\ \hline \end{array}$$

Pandya had 8 tomatoes. 3 of them got rotten. How many tomatoes did she remain with?

16. Study the graph below and answer the questions.



1. _____ has 2 apples.
2. _____ has 4 apples
3. Jordin has _____ apples.
4. Angella has _____ apples.
5. How many apples do they have altogether.

