



KINGS WAY PRIMARY SCHOOL

P. 1 RECESS REVISION 2020-(SET SIX)


ENGLISH

DURATION : 2 HOURS & 15 MINUTES

Name _____ Stream _____

SECTION A (30 MARKS)

1. Name these pictures.




2. Write these words in small letters.

GUAVA **guava**
GREEN _____
MAT _____
KNIFE _____


3. Fill in the missing letters.

f__ve gi__l s__hool
d__sk h__use p__n

4. Complete the sentences correctly.

a)  It is an _____.

b)  These are _____.

c)  My mother is cooking _____.

d)



The boy is _____ with a ball.

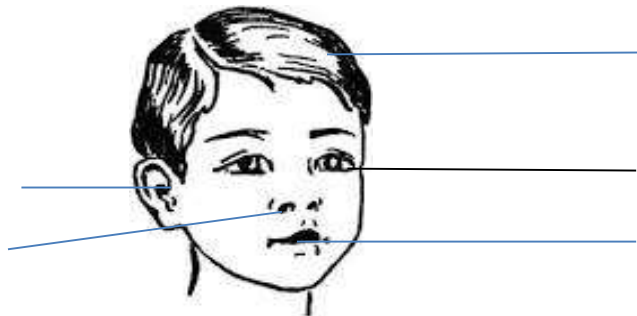
5. **Fill in the "a" or "an".**

- (a) That is _____ envelope.
- (b) _____ ostrich is a wild bird.
- (c) Ben has _____ long stick.
- (d) Here is _____ story book.

6. **Read and draw.**

dress	boys	car

7. **Name these body parts.**



8. **Re-write the words correctly.**

eax _____

sunre _____


Section B

9. **Read and draw good sentences.**

- (a) These are two rulers.



(b) The boy is dancing.



(c) This is a leaf.



(d) The dog is eating a bone.



10. **Circle the correct word for the pictures.**



orange

mango


apple



chair

stool

pen



door

window

wall



sun

star

moon

11. Choose the correct word to fill in the sentences.

- (a) The cat has a long _____. (tree, tail)
- (b) I am writing in my _____. (water, book)
- (c) A cow is eating _____. (grass, glass)

12. How many are there?


- (a)  There are _____ hats.

- (b)  There are _____ bottles.

- (c)  There are _____ dogs.


- (d)  There are _____ balls.

13. Match correctly.




- spoon
- stone
- rabbit
- flower
- bird


14. Use the correct word to complete the sentences.



The bird is flying _____ the house.



The dog is _____ on table.



The man is _____ .



Jane is _____ the baby.

15. Study the pictures and answer the questions.



Cissy



Juma



Cathy

a) Who is fetching water _____.

b) _____ is sweeping.

c) What is Cissy doing _____

16. Give their plurals.

One

many


box

ruler

child

puppy

17. Study the pictures and answer the questions in full sentences.



Questions

1. What is John doing?

2. How many girls can you see in the picture?

3. Who is walking towards the car?

4. _____ is washing dishes.

END



KINGS WAY PRIMARY SCHOOL




P. 1 RECESS REVISION 2020-(SET SIX)

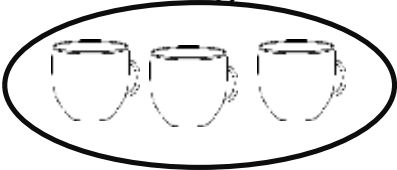




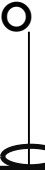
MATHEMATICS

DURATION : 2 HOURS & 30 MINUTES

Name _____ stream _____





SECTION A (40 marks)

1.	Write the number words. 2 = _____ 8 = _____
2.	Add these correctly. 3 + 2 = _____ 6 + 4 = _____
3.	Count and write the number symbols. ///// = _____ OOOOOOOO = _____ XXXXXX XX = _____
4.	Name the given shapes correctly.  = _____  = _____  = _____ (kite, circle, cone)

5	Fill in the missing numbers. 0, 1, 2, _____, 4, 5 15, 16, _____, 18,
6.	Name the given sets.  A set of _____  A set of _____
7	Write the number between. 7, _____, 9 20, _____, 22, _____
8	Write the second day of the week. _____
9	Arrange these number beginning with the smallest. 7, 4, 12 = _____
10	Take away $\begin{array}{r} 7 \\ - 4 \\ \hline \end{array}$ <div style="border: 1px solid black; width: 60px; height: 20px; display: inline-block; margin-left: 10px;"></div> $5 - 3 = \underline{\hspace{2cm}}$
Section B	
11.	Count the beads and complete the abacus. <div style="display: flex; justify-content: space-around; align-items: flex-start; margin-top: 10px;"> <div style="text-align: center;"> <p>T</p>  <p>O</p>  <div style="border: 1px solid black; width: 100px; height: 20px; margin-top: 5px; display: flex; justify-content: space-between; padding: 0 5px;"> _____ _____ </div> </div> <div style="text-align: center;"> <p>T</p>  <p>O</p>  <div style="border: 1px solid black; width: 100px; height: 20px; margin-top: 5px; display: flex; justify-content: space-between; padding: 0 5px;"> _____ _____ </div> </div> </div>


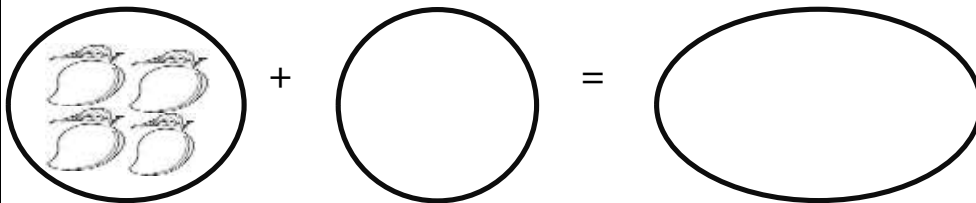
12 **Read and write the figures.**
 nine = _____
 twelve = _____
 five = _____

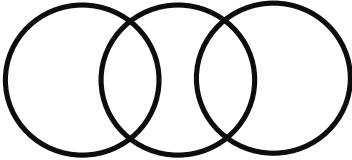





13 **Study the pictures and answer the given questions.**

Name	Number of oranges
Ali	
Jane	
Musa	
Auma	

- a) Who has many oranges? _____
- b) How many orange doe Jane and Musa have? _____
- c) Who have the same number of oranges? _____
- d) Name the person with three oranges. _____

14 Join these sets.



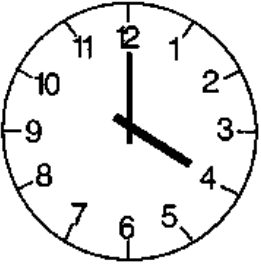
15	<p>Arrange these number starting with the biggest. 0, 2, 1, 5, 4, = _____</p> <p>15, 20, 18, 17, 19 = _____</p>
16	<p>Write the number before.</p> <p>_____ 6 _____ 15 _____ 35</p>
17	<p>How many circles can you see?</p>  <p>= _____</p>
18	 <p>Three girls. How many legs do they have altother?</p> <p>_____</p>
19	<p>Circle the smaller number.</p> <p>9 and 6 0 and 3 21 and 12</p>
20	<p>Which container is bigger.</p>  <p>Pot</p>  <p>cup</p> <p>_____</p>
21	<p>Draw these sets.</p> <p>A set of 3 balls. </p> <p>A set of 6 stciks. </p>

22 **Workout:**
Four dogs plus one dog gives _____

6 plus 3 equals _____

I have 4 bananas. If I eat 3 bananas, how many bananas will I remain with?

23 Tell the time.



It is _____

24 **Workout**
How many days make a week? _____

Count the letters and write the number symbol.

Elephant = _____

END



KINGS WAY PRIMARY SCHOOL

P. 1 RECESS REVISION 2020-(SET SIX)

RELIGIOUS EDUCATION

DURATION : 2 HOURS

Name _____ stream _____

SECTION A (30 MARKS)

1. _____ is the study of man and his belief.
(Social studies, Religious Education)

2. Name any two things that God created on the fourth day.

i) _____

ii) _____

3. What do we call the total submission to the will of Allah?

4. Give any two reasons why God created man.

i) _____

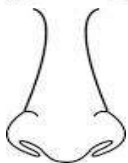
ii) _____

5. Write Religious Education in short.

6. Complete the following correctly.



_____ for seeing



_____ for smelling



Ears for _____

7. Name the Heavenly father of Jesus?

8. Name any two apostles of Jesus?

i) _____

ii) _____

9. Who was the mother of Jesus?

10. Mention any one leader found in church.

11. Name the Holy book for moslems.

12. How many apostles did Jesus have?

13. Which apostle denied Jesus three times?

14. Who leads prayers in the mosque?

15. On which day do Muslims go for prayers?

SECTION B 60 MARKS

16. A _____ is a family of God's believers.

b) Name three places of worship.

i) _____

ii) _____

iii) _____

17. **Match list A to list B correctly.**

i) Simon Peter

Betrayed Jesus.

ii) Judas Iscariot

Doubled Jesus resurrection

iii) Thomas

Most loved disciple.

iv) John

Denied Jesus three times.

18. Mention any three reasons why we pray to God/Allah.

i) _____

ii) _____

iii) _____

19. **Tick the prayers said by mosques.**

Allah, Aswir, church, Isha, Imam, Subuhi, Musa, Magharib

b). How many times do moslems pray in a day?

20. Name the first two people God created.

i) _____

ii) _____

b) Who were the three sons of Adam and Eve?

i) _____

ii) _____

iii) _____

21. God took _____ days to create the world.

b) Name four things God created.

i) _____

ii) _____

iii) _____

iv) _____

22. Mention any three ways we talk to God.

i) _____

ii) _____

iii) _____

END



KINGS WAY PRIMARY SCHOOL

P. 1 RECESS REVISION 2020-(SET SIX)

LITERACY IA

DURATION : 2 HOURS

Name _____ stream _____

SECTION A (30 MARKS)

1. Give one way of keeping the body clean.

2. Name one animal that gives us milk.

3. How is a nurse important at school?

4. Name one type of weather.

5. How is this item useful in our classroom?



6. Name the main natural source of water?

7. Write the sense organ used for feeling.

8. Write one danger of having a dirty body.

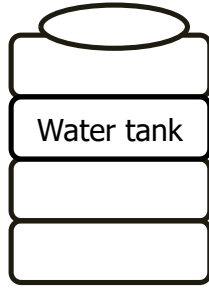
9. Mention one body exercise.

10. How do you care for hair?

11. Why do we boil drinking water?

12. Give any one bird kept at home.

13. How is this item important at school?



14. What do you use for hearing?

15. Name any one thing we eat from animals.

16. Underline the disease spread by mosquitoes.

mumps, malaria, cancer

17. Complete correctly.

I use my legs for _____

18. What do we call animals that live in the bush?

19. How is the sun useful to people?

20. Which disease is the boy suffering from?



21. Circle the correct body part.

Pama Pam Palm Paml

22. Name the part you use to hold the pencil.

23. Why do we wash our hands?

24. Name one part of a plant.

25. Write one use of water at home.

26. Mention one item we use when brushing our teeth.

27. Give any one common disease at school.

28. Name one place where we go treatment.

29. Fill in correctly.

w ___nd

clo___ds

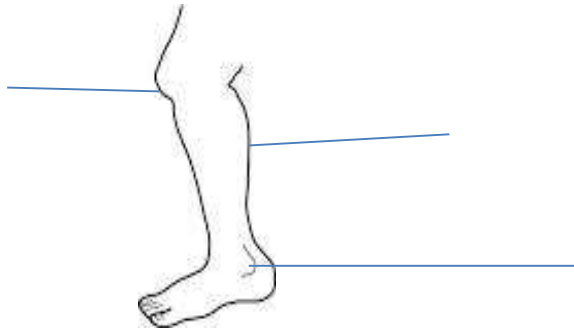
SECTION B

30. Give the use of the body parts below.

mouth _____


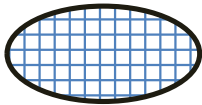
nose _____

b. Name the parts of the body below.



31. a) What is personal hygiene?

b. Name these things used to keep the body clean.

32. Identify and circle from the list childhood immunisable diseases.

malaria

posho

cholera

measles

tetanus

mumps diphtheria

33. a) Give two things we use to collect water at home.

i) _____

ii) _____

b. How is water useful at home?

i) _____

ii) _____

34. **Draw these things we use in class.**

pencil	chair

35. a) Give any one way of caring for the teeth.

b. Match body part to their uses.

tongue

feeling

skin

seeking

teeth

tasting

eyes

chewing

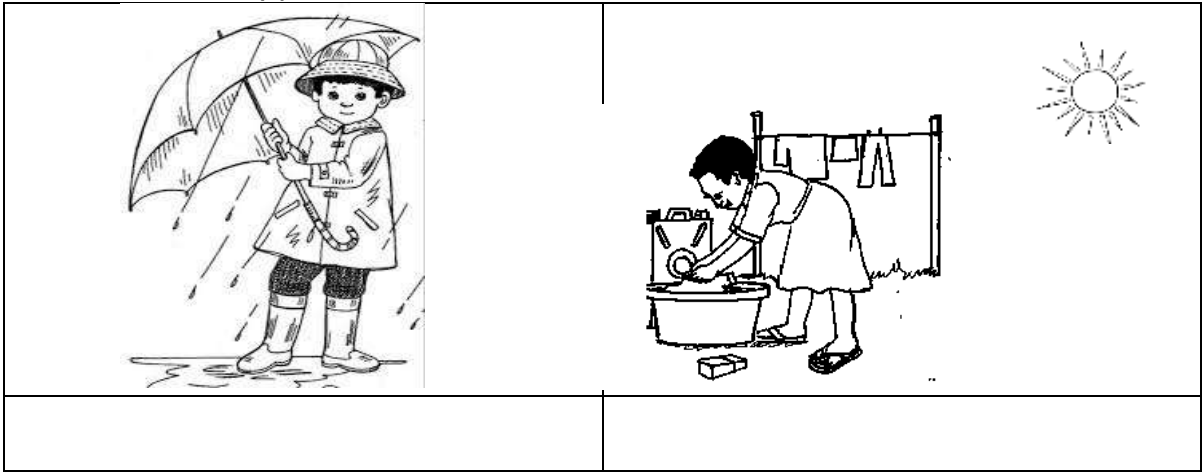
36. a) Name any one place where germs can be found.

b. Circle the things that spread diseases.

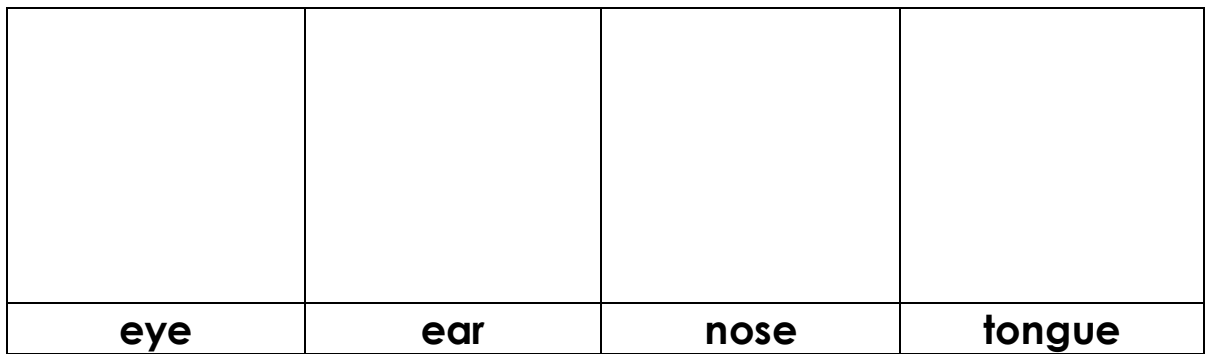
housefly, grasshopper, cockroach, fish

37.a) Which type of clouds give us rainfall?

b. Name the types of weather below.



38a) Draw the following body parts.



END



KINGS WAY PRIMARY SCHOOL

P. 1 RECESS REVISION 2020-(SET SIX)

LITERACY I B

DURATION : 2 HOURS

Name _____ stream _____

SECTION A (30 MKS)

1. What is the name of your school?

2. Name any two important people found at school.
 - i) _____
 - ii) _____
3. Mention any one animal kept at home that provides cow dug.

4. Name any two play objects found in the classroom.
 - i) _____
 - ii) _____
5. Where do we find a matron in a child?

6. How is a sign post useful to a school?

7. How is a dog useful to people?

8. Give the roles of these people at home;
mother : _____
children: _____
9. **Match these people to their work.**

i) Bursar	types school work.
ii) Teacher	cleans the school
iii) Secretary	collects school money.
iv) Cleaner	teaches children.

 - i) bursar : _____
 - ii) teacher: _____
 - iii) secretary : _____
 - iv) cleaner : _____

10. Draw and name any two items used to clean our school.

11. Why do people keep goats at home?

i) _____

ii) _____

12. Name two important places in the community.

i) _____

ii) _____

13. How is a bathroom useful in a house?

14. Name two activities done at home.

i) _____

ii) _____

15. Give the use of these things found in the classroom.





16. Name any two birds we keep at home.

i) _____

ii) _____

17. Draw these activities done at school.

playing	sweeping

SECTION B

18. Name any two things found in a kitchen.

- i) _____
- ii) _____

19. Why do we come to school?

20. Name any three parts of alone.

- i) _____
- ii) _____
- iii) _____

21. Why do we need a nurse?

22. In which family do we find mother, father and their own children?

23. Name two animals kept at home for meat.

- i) _____
- ii) _____

24. **Match correctly.**

- | | |
|--------------|---------------------------|
| a) Carpenter | preaches the word of God. |
| b) Barber | makes furniture |
| c) Doctor | Trims people hair |
| d) Priest | treats sick people. |

- a. _____
- b. _____
- c. _____
- d. _____

25. Write two colours of our school uniform.

- i) _____
- ii) _____

26. Apart from a box and a pencil, name any other thing found in a class.

- i) _____
- ii) _____

27. How is a house useful to people?

28. Who heads a family?

29. Underline the important places in the community.

church, chair, hospital, pencil, school

30. How do we keep our classrooms clean?

i) _____

ii) _____

32. Give any two ways a gate is important at school.

i) _____

ii) _____

33. How do we keep the home clean?

i) _____

ii) _____

34. Why do we need a duster in a class?

35. Name this item found in our class that tells time.



36. Name any two things we get from a turkey.

i) _____

ii) _____

END