



KINGS WAY PRIMARY SCHOOL

P. 1 RECESS REVISION 2020-(SET FIVE)


ENGLISH

DURATION : 2 HOURS & 15 MINUTES

Name _____ Stream _____

SECTION A (30 MARKS)

1. Name these pictures.



2. Write small letters for these.

R _____

A _____

D _____

N _____

T _____

G _____

3. Fill in the missing letters.



r__ler



le__f



g__rl



h__t



b__g

4. Write these words correctly.

oobrm _____

cahir _____

opt _____

tca _____

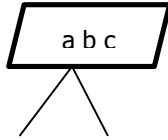
5. **Use the correct spelling.**



ketbas

basket

tekbas



blackboard

boardblack

bldoarbac



cilpen

pcilen

pencil



chair

cahir

hica



chuchr

curchh

church

6. **Match correctly.**

dog

baby

cow

puppy

man

kid

hen

calf

goat

chick

7. **Answer correctly.**

What is your name?

Section B

8. **Use "a", "an" to complete the gaps.**

a. This is _____ bag.

b. I can see _____ elephant.

c. It is _____ flower.

d. I am eating _____ egg.

9. Write these numbers in words.

0 _____ 9 _____


2 _____ 10 _____

5th _____

(fifth, zero, nine, ten, two)

10. Read and draw good pictures.

The snake is under the chair.




The water is in the cup.



This is a flower.



I can see two boys.



Daddy is driving a car.



11. **Use the words in capital letters.**

Lion

LION

matron

chart

stone

pen

12. **What is this. This is a** _____



This is a _____.



This is a _____.



This is a _____.



This is a _____.

13. **Give their plurals.**

One

many

book

books

basket

window

desk

brush

lorry

14. **Read the story and answer the questions in full sentences.**

Pam is a girl. She is six years old. She has a red bag. In her bag, there are books, pencils and rubbers.

Pam goes to Kito primary school. She is in primary one.

Questions

a) Who is the girl in the story?

b) How old is Pam?

c) Name two things in Pam's bag.


i) _____


ii) _____

d) Pam goes to _____ primary school.

e) In which class is Pam?

15. **Make good sentences.**





END



KINGS WAY PRIMARY SCHOOL

P. 1 RECESS REVISION 2020-(SET FIVE)

LITERACY IB

DURATION : 2 HOURS

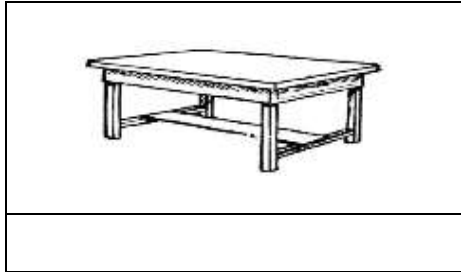
Name _____ stream _____

SECTION A (30 MKS)

1. Write social studies in short.

2. My school is _____

3. Name this item found in class.



4. Who teachers children at school?

5. Why do we go to school?

6. Mention two things we get from a goat.

i) _____

ii) _____

7. Write our school motto.

8. A place where children go to learn is a _____

9. Mr. Kimera Aggrey is our _____

10. Name one animal kept at home.

11. Who cooks food at home?

12. A _____ is a place where people live or stay.
(home, school)

13. Where do we get safe water at school?

14. In which district is our school found.

15. A _____ heads a family.

16. **Circle animals kept at home.**

cows, lion, sheep, elephant, goat

17. **Fill in the gaps with the correct words.**

a) A cow gives us _____ and _____

b) We get honey from _____

c) A hen gives us _____ and _____

d) A _____ guards our home.

18. **Fill in the missing letters.**

i) r____ce

iv) ch____rch

ii) sch____l

v) g____rden

iii) m____sque

Section B

19. Name any two colours of our school uniform.

i) _____

ii) _____

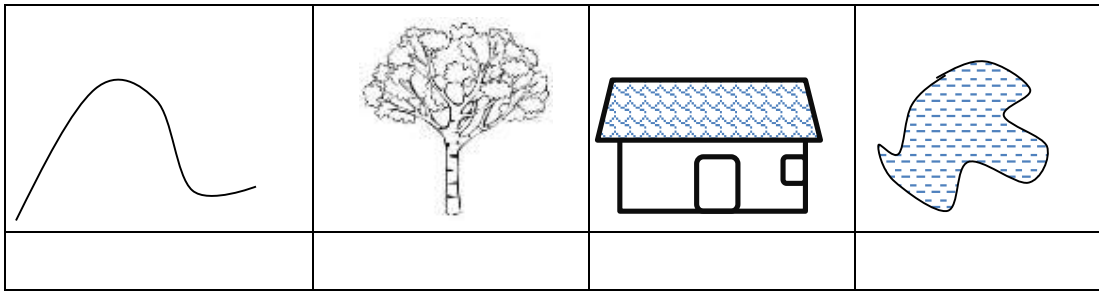
b. Mention any three people found in our school.

i) _____

ii) _____

iii) _____

20. Name these things around us.



21. Name any two people found at home.

i) _____

ii) _____

b) Mention two things found in the house.

i) _____

ii) _____

c) Who heads a family?


22. Name any three things found on our school badge.

i) _____

ii) _____

iii) _____

b) Name the school symbols below.



(school badge, school uniform)

23. Match people to their places of work.

police

church

teacher

mosque

doctor

garden

farmer

school

imam

hospital

pastors

police station

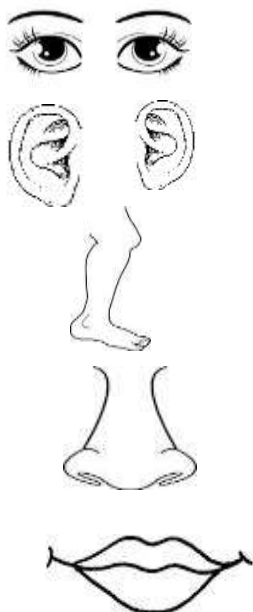
b) Who cooks food at school?

24. Draw these people found at home.

baby	father	mother	grandmother

25. Match the following body parts to their uses.

A



B

For eating

For walking

For smelling

For seeing

For hearing

END



KINGS WAY PRIMARY SCHOOL


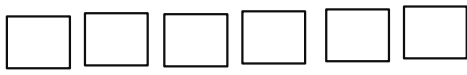


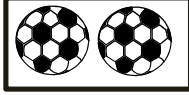


P. 1 RECESS REVISION 2020-(SET FIVE)

MATHEMATICS

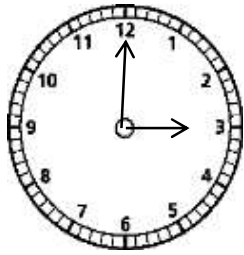
DURATION : 2 HOURS & 30 MINUTES

Name _____ stream _____

SECTION A (40 marks)

1.	<p>Count and write the number symbol.</p> <p> = _____</p> <p> = _____</p> <p> = _____</p>
2.	<p>Write the number after.</p> <p>5, _____</p> <p>0, _____</p> <p>9, _____</p>
3	<p>Write the number name for;</p> <p>10 _____</p> <p>7 _____</p> <p>5 _____</p>
4	<p>Add correctly.</p> <p> +  = </p> <p>8 + 2 =</p> <p style="margin-left: 150px;">6 + 3</p> <p style="margin-left: 150px;"></p>

5. **Tell in the time on the clock face below.**



It is _____ o'clock.

Write the last day of the week. _____

_____ days make a week.

6 **Fill in the missing numbers.**

1, 2, _____, 4, _____ 6

6, 7, 8, _____ 10, 11, _____, 13, 14

10, 9, _____, 7, 6, _____, 4, 3

Section B

7 **Count and circle the correct number.**



11, 12, 13

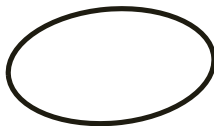


10, 9, 12



5, 7, 8

8 **Match the shapes to their names.**




rectangle



circle



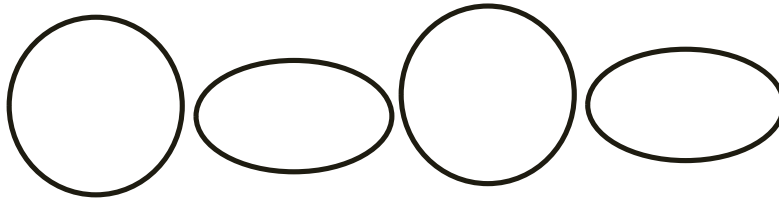
oval



triangle

b.

Shade the circles.



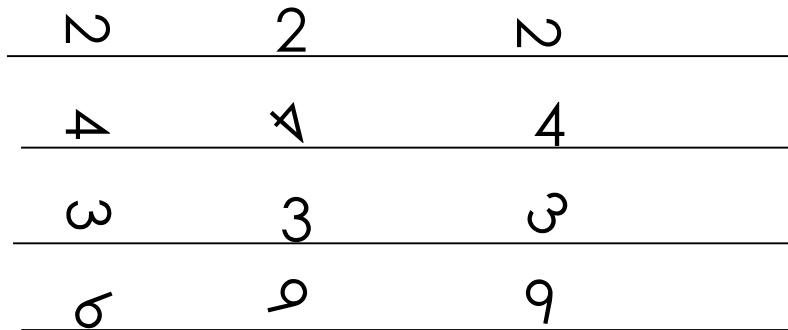
9.

Match number symbols to number names.

eight	11
eleven	3
three	13
thirteen	8

10

Circle the correct number.



11

Fill in correctly

One, _____, three, four, _____, six

Nine, _____, eleven, twelve

b.

12

Name these sets.



A set of _____



b. **Add these sets.**

$\triangle \text{ (1 vase)} + \triangle \text{ (2 vases)} = \triangle$
 $\square \text{ (3 mugs)} + \square = \square$

13 **Arrange these numbers starting with the smallest.**

10, 8, 12 _____

b. **Circle the bigger number.**

8 or 3

15 or 19

21 or 12

14 **Work out**

$$\begin{array}{r} 5 \\ +4 \\ \hline \end{array}$$

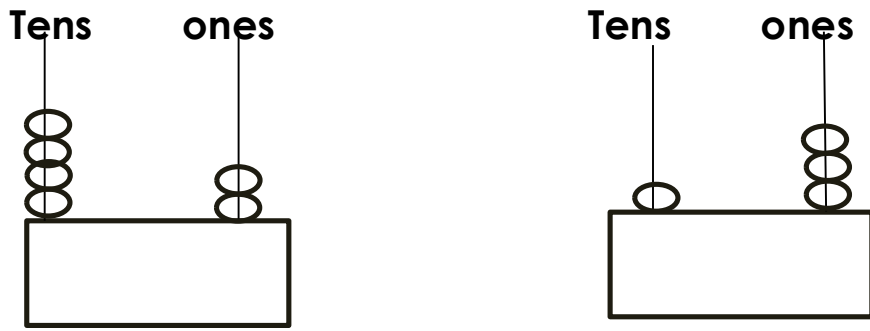
b) Seven plus two equals _____

c) **Takeaway:**

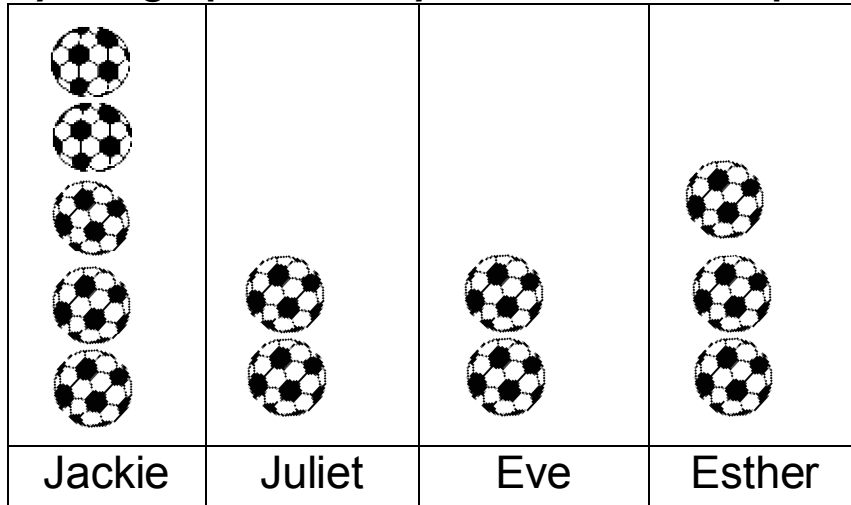
$$8 - 3 =$$

$$\begin{array}{r} 10 \\ - 7 \\ \hline \end{array}$$

15 Count the beads and write the numbers on abacus.



16 Study the graph carefully and answer the questions.



- a. How many balls did Esther made the? _____
- b. _____ and _____ make same number of balls
- c. Who made more balls? _____
- d. How many balls did all girls make altogether?

END



KINGS WAY PRIMARY SCHOOL

P. 1 RECESS REVISION 2020-(SET FIVE)

LITERACY IA

DURATION : 2 HOURS

Name _____ stream _____

SECTION A (30 MARKS)

1. Name one animal kept at home.

2. I use my _____ for walking.

3. Name the part of the body that help us to see.


4. Fill in the missing letters.

i) n____ck

ii) e____r

5. Name one body exercise.

6. How do people use the item shown below at home?



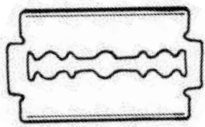


7. Draw the things named in the table.

book	ball

8. We use our hands for _____

9. Give one way of caring for our body.

10. Name these things.

11. Name one thing we get from cows.

12. Which body part helps us to smell?

13. Circle the correct word.

hari hair hiar

14. Name one thing used to clean the class.

15. **Name two things we use in class.**

16. Name the animal which eats rats at home.

17. Name one part found on the arm.

18. Name this body organ.



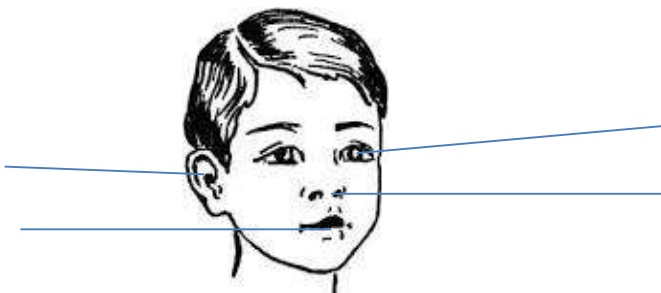
19. Give any two common food stuffs.

i) _____

ii) _____

Section B

20. **Name the part of the head.**



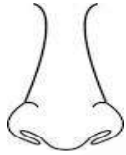
21. **Match organs to their uses.**



for walking



for smelling



for holding things



for hearing



22. **Circle the animals that live in the bush.**

snake, goat, zebra, lion, cat

23. **Draw these things used in a kitchen.**


cup	spoon	fork

24. **Write Yes or No.**

a) A baby has two heads _____

b) A cow eats grass _____

25. **Name these body exercises.**



(dancing, running, swimming)

26. **Circle parts of a leg.**

knee, neck, ankle, shin, belly

27. Name one thing used when washing clothes.

28. **Draw these things children use at school.**

pencil	bag	rubber

END



KINGS WAY PRIMARY SCHOOL

P. 1 RECESS REVISION 2020-(SET FIVE)

RELIGIOUS EDUCATION

DURATION : 2 HOURS

Name _____ stream _____

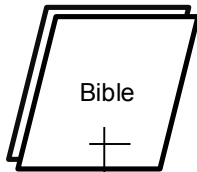
SECTION A (30 MARKS)

1. Write your religious name.

2. _____ is the study of man and his belief.

3. Who created you?

4. Name the Holy book for Christians.



5. Name one animal God created.

6. What do you use for seeing?

7. Write one Christian name for girls.

8. _____ is our brother in heaven.

9. On which day do moslems go for prayers?

10. Who was the mother of Jesus?

11. What do you use for seeing?

12. Where do Christians go for prayers?

13. Write one religious name for boys.

14. Draw the named part of the body God created for you.

Hand

15. I use my ears for _____ (seeing hearing)

16. Write R.E in full.

17. Name one moslem name for girls.

18. Draw the named picture God created.





river

19. When do Christians go to church?

20. Why do people pray to God?

SECTION B

21. Name these things God created.

22. Write two religious names for boys.

i) _____

ii) _____

23. Match the following names to their meanings.

A

Peter

Irene

Deborah

Emmanuel

Hilder

B

Battle

God is with us.

Rock

Bee

Peace

24. Draw these things God created.

hen	snake	baby	tree

25. Name two religious names for girls.

i) _____

ii) _____

26. Mention three things you do at school.

i) _____

ii) _____

iii) _____

27. Draw these body gifts God gave you.

eye,	nose	leg	ear	hand

28. Name these places of worship.

mosque	church

29. Write our father in heaven.

30. Draw these things God created to give.

sun	moon	stars

END