

RIMAGE CLASSIC SCHOOL

P.1 MATHEMATICS

Name:

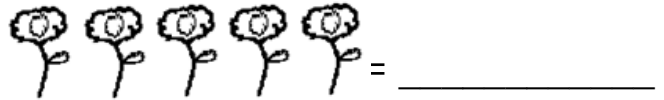
School:Stream:.....

SECTION A

1. Add:

$$3 + 2 = \underline{\hspace{2cm}}$$

2. Count and write.



3. Name the shape.



$\underline{\hspace{2cm}}$

(cone, triangle)

4. Write the number word.

$$7 = \underline{\hspace{2cm}}$$

5. Circle the smaller number.

18 and 12

6. Take away:

$$\begin{array}{r} 9 \\ - 3 \\ \hline \\ \hline \end{array}$$

7. $\underline{\hspace{2cm}}$

days make a week.

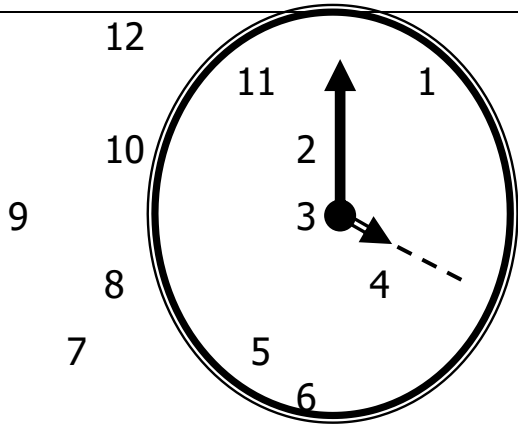
8. Write the number after.

26, $\underline{\hspace{2cm}}$

9. Tell the time.

10. Three plus five equals

$\underline{\hspace{2cm}}$



It is _____ o'clock.

11. Write correctly.
daySun _____

12. Fill in the missing number.
4, 5, _____, 7, _____, 9.

13. Write the number symbol.
sixteen = _____



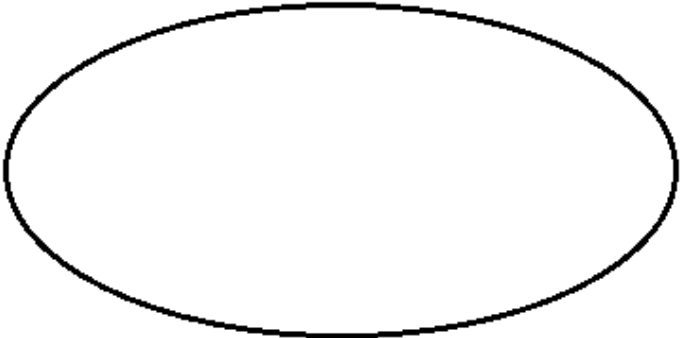
14. Draw a circle.

15. Write in words.
2nd = _____
(second, two)

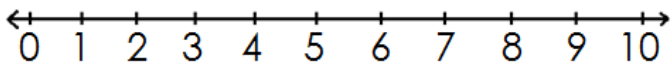
16. seven minus two equals

17. Draw a set of 3 girls.

18. Name the set.

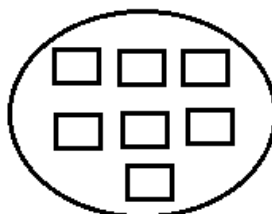
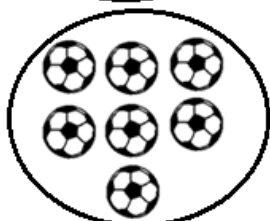


19. Join the sets.
 +  = 

20. Add on number line.
3 + 1 = _____



SECTION B

21. Match the same number.



22. Add:

$3 + 5 = \underline{\hspace{2cm}}$

$12 + 4 = \underline{\hspace{2cm}}$

$$\begin{array}{r} 7 \\ + 2 \\ \hline \end{array}$$

$$\begin{array}{r} 8 \\ + 5 \\ \hline \end{array}$$

23. Complete the missing days.

i) _____ ii) Monday

iii) _____ iv) Wednesday

v) Thursday vi) _____

vii) Saturday

24. Write the number word.

2 = _____

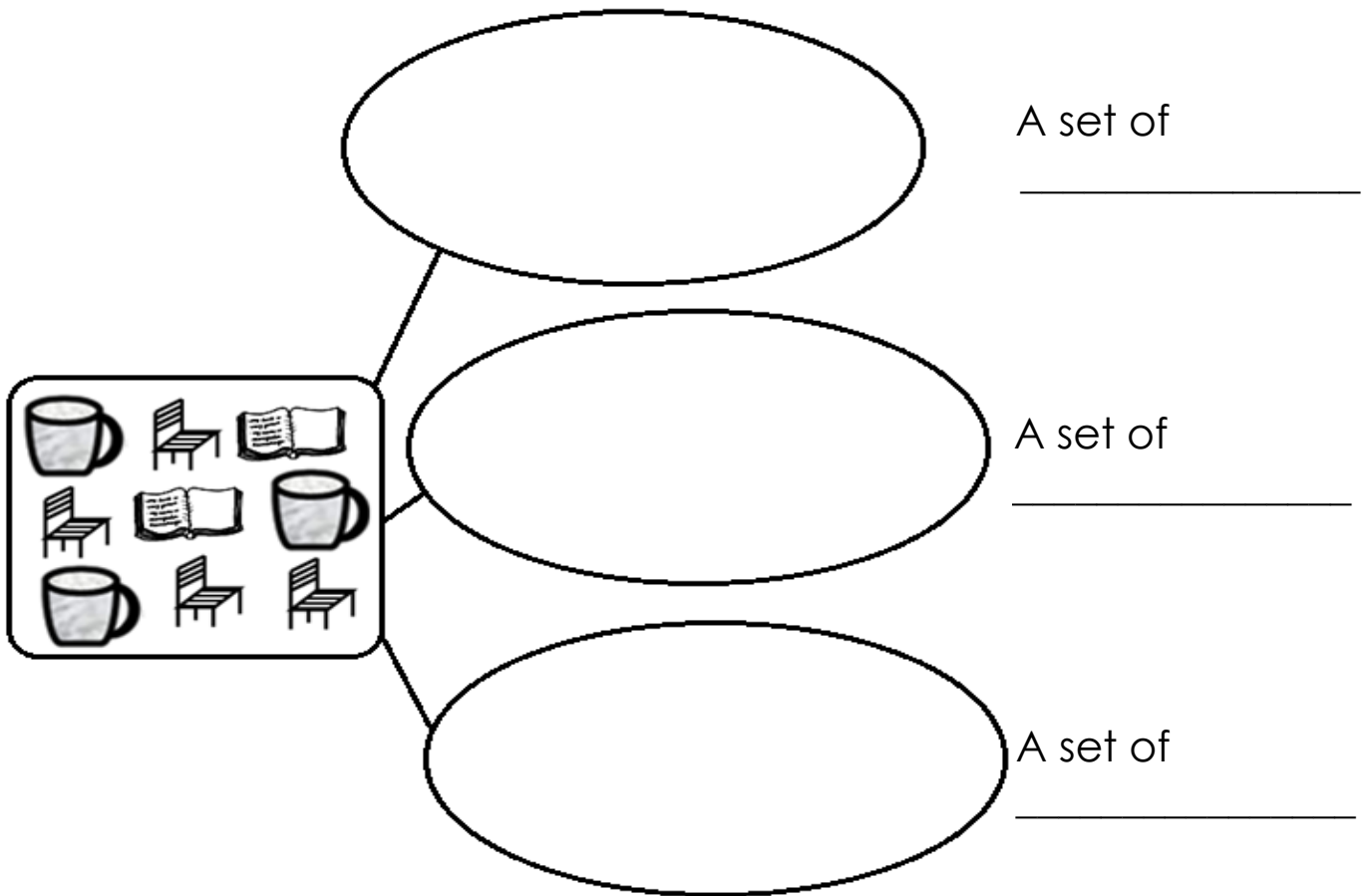
7 = _____

12 = _____

30 = _____

14 = _____

25. Make new sets.



A set of _____

A set of _____

A set of _____

(books, cups, chairs)

26. Take away.

$9 - 6 =$ _____

$14 - 5 =$ _____

$$\begin{array}{r} 8 \\ - 4 \\ \hline \\ \hline \end{array}$$

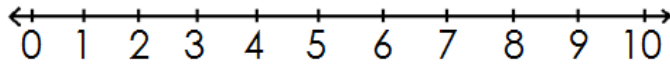
27. Fill in the missing number.

0, 1, 2, _____, _____, 5.

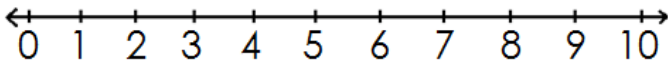
10, 11, 12, 13, _____, _____

28. Add on a number line.

$$4 + 2 = \underline{\hspace{2cm}}$$



$$5 + 0 = \underline{\hspace{2cm}}$$



29. Name the shapes.



(circle, oval, rectangle, star, zigzag)

30. Write the number symbol

five = _____

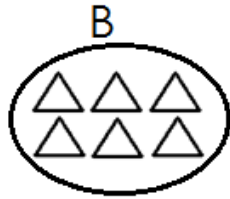
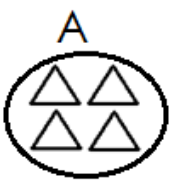
eight = _____

thirteen = _____

twenty = _____

31. Draw an empty set.

32. Use more or less to complete.



Set A has _____ triangles.

Set B has _____ triangles.

*******GOD BLESS*******