

TWINBROOK SCHOOLS
P. 1 HALF TERM ONE REVISION SET 5, 2020
Literacy A

Name: _____ Stream: _____

SECTION A (2 marks each)

1. Who cooks food at school?

2. Write down the name of our school.

3. Give one use of water in a school.

4. Write down one way children come to school.


5. Name the animal in the picture.



6. What do children use to write in their books?

7. Give one thing (activity) children do at school.

8. Draw a picture of tree in the space below.



9. Write one thing children use to play at school.

10. Who is the head of a school?

11. Write any one activity children do in class.

12. Name one thing found in the dining hall.

13. Mention the body part we use to walk.

14. Write one thing we use to keep the classroom clean.

15. Who treats sick children in a school?

16. Name the place where children go to learn.

17. Write the dangerous thing shown below.




18. Duster is to blackboard as rubber is to _____.

19. Give the use of money in a school.

20. What is the work of a teacher in a school?

SECTION B (2 marks each)

21. Name the things you see on your way to school.



22. Name three animals found in a home.

(a) _____ (b) _____

(c) _____

23. **Match correctly.**

Person

tool

(a) teacher

medicine

(b) nurse

broom

(c) cleaner

chalk

24. Draw these things we use at home.

chair	house	cups

25. Name three things found in a classroom.

(a) _____ (b) _____

(c) _____

26. Give the body part used to do the following:

(a) hearing music: _____

(b) writing in a book: _____

(c) chewing food: _____

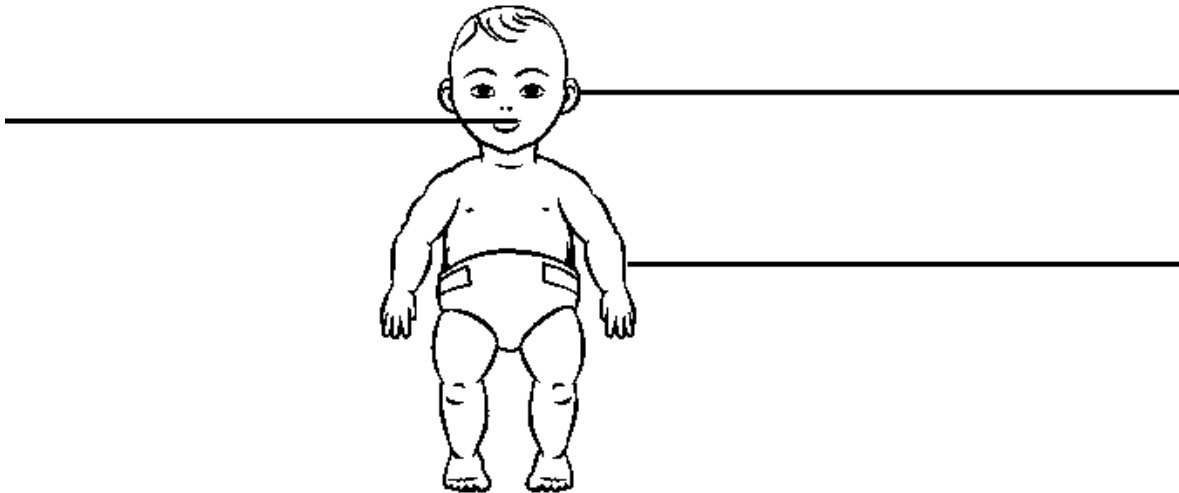
27. **Write 'Yes' or 'No' to fill the gaps.**

(a) We find cows in the classroom. _____

(b) A school nurse works in the sickbay. _____

(c) Children use stones to write in their books. _____

28. **Name the body parts.**



29. What things do we use for the following?

(a) Keeping water for drinking

(b) washing things

(c) living in

30. Give three things found in the school compound.

(a) _____ (b) _____

(C) _____

Mathematics

Name: _____ Stream: _____

SECTION A (1 mark each)

1. Count and write:



2. Write the missing numbers: 3, 4, _____, 6, 7, _____.

3. Name the shape shown below:



4. Add: $3 + 2 =$ _____

5. Write 11 in words. _____

6. What number comes before 9?

7. Arrange from smallest to the biggest:

9, 3, 6, 1: _____

8. Write 13 in words.

9. Take away: $6 - 6 =$ _____

10. Tell the time on the clock face.



It is _____ o'clock.

11. What number comes after 6?

12. How many groups of 2 can you count?




= _____

13. Draw a rectangle in the space below.

14. Cross out to make them 5.



15. Draw to make them 7.



16. Write the number between 7 and 9. _____

17. Circle the smaller number.

7 , 9

18. Multiply: $4 \times 2 =$ _____

19. Draw 7 cats.

20. What is 9 take away 2?

SECTION B

21. Match correctly:

(a) 5 eleven

(b) 15 three

(c) 3 five

(d) 11 fifteen

22. Take away (subtract):

(a) $7 - 7 =$ _____

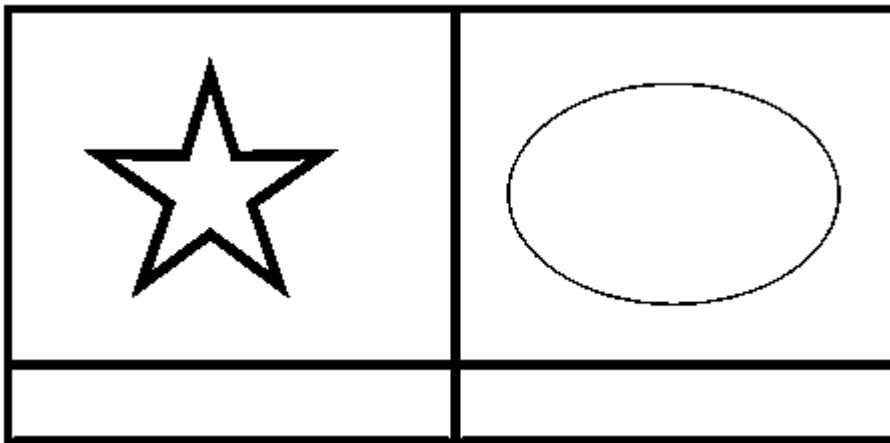
(b) $6 - 0 =$ _____

(c)

9
- 5

(d) Ann has 5 sweets. She gives 3 sweets to Mary. How many sweets does she remain with?

23(a) Name the shapes drawn below.



(b) Draw the shapes named below.

circle	zig-zag line


24. Add:

(a) $1 + 3 + 2 =$ _____ (b) $6 + 3 =$ _____

(c)
$$\begin{array}{r} 5 \\ + 0 \\ \hline \end{array}$$


(d) Musa has 4 apples. He gets 4 more apples. How many apples does he have altogether?

25. Write "Yes" or "No".


(a)  This is a circle. _____


(b) Two plus three equals five. _____

(c) Seven take away zero equals nine. _____


(d)  There are seven apples. _____

26. **How many can you count?**



(a) How many  can you count? _____

(b) How many  can you count? _____

(c) How many  can you count? _____

(d) How many  can you count? _____

27. Write the numbers in words.

(a) 9: _____ (b) 13: _____


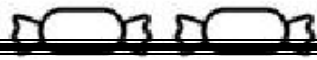

(c) 11: _____ (d) 7: _____

28. Fill in the missing numbers.

(a) _____ + _____ = 3 (b) _____ - _____ = 2

(c) _____ + 0 = 5 (d) _____ - 0 = 4

29. The graph shows the number of sweets each of the four children has.

Name	Number of sweets
Ali	
Juma	
	

(a) Who have the same number of sweets?

(b) How many sweets does Ali have?

(c) Who has one sweet?

(d) How many sweets do Jane and Ann have altogether?

30(a) Arrange from biggest to the smallest.

19, 11, 15, 17: _____

(b) Circle the smaller number.

8, 13

(c) Write the missing numbers:

18, 17, _____, 15, _____.

(d) What number comes before 20?

P.1 LITERACY 1B

SECTION A

1. I use my _____ to see.
2. How do we call things that have life?

3. Give one example of a non-living thing.

4. How many fingers do you have?

5. Name this part of the body.



6. We should _____ our hands after visiting a toilet.

7. Why is a goat called a living thing?


8. Which part of the body helps you to hear?

9. We use a broom for

10. I brush my _____ after eating food.

11. Write one way we keep our body clean.

12. Name these living things.



--	--	--

(pig, bird, fish, goat)

13. Animals kept at home are called _____ animals.

(wild, domestic)

14. Draw one non-living thing.



15. We use _____ for washing our hands.

16. Write one group of living things.

17. I stand with my

18. Write one danger of a dirty body.

19. **Underline the part of the leg.**

neck, knee, hair

20. **Fill in the missing letter in the words below.**

m__uth

wr__st

__air

tongu__

21. **Circle foods we eat.**

soil, cassava, dust, bananas

22. A person has _____ senses. (seven, five)

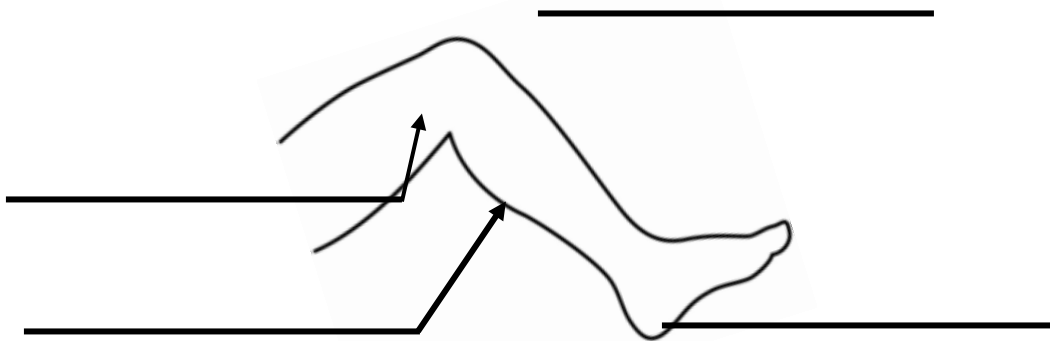
23. Name this fruit we eat.



24. A _____ treats our teeth. (nurse, dentist)

SECTION B

25. **Name the parts of the leg.**



(calf, knee, thigh,

foot)

26. Write any four examples of animals kept at home.

i) _____ ii) _____

iii) _____ iv) _____

27. **Use the words given to complete correctly.**

tasting nose ears feeling

I use my _____ for hearing. The _____

help me to smell. My skin is for _____ and my one

tongue is for _____

28. Name two body parts found on your truck.

i) _____ ii) _____

29. **Draw these things we use to keep our body clean.**


soap



water



sponge



30. **Match correctly.**

teeth

walking

hands

seeing

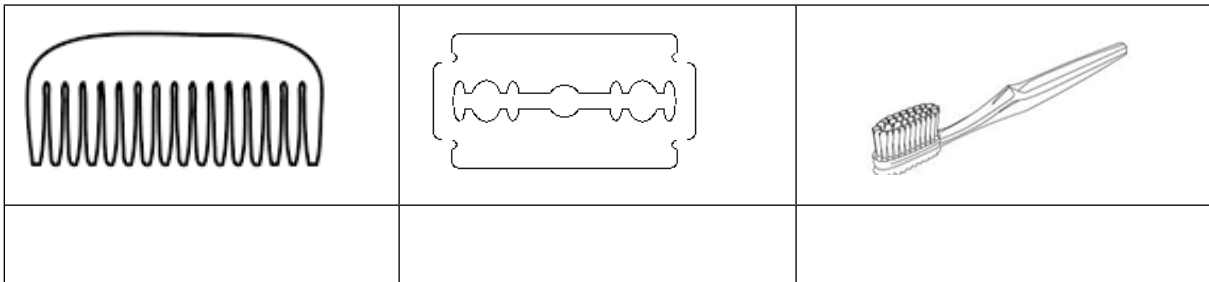
legs

biting

eyes

touching

31. **Name these things used to keep our body clean.**



(razorblade, comb, toothbrush)

32. **Tick (✓) only the ways of keeping the body clean.**

i) by washing hands

ii) by mopping the house

iii) by bathing daily




iv) by eating food

v) by brushing teeth

33. **Circle the groups of living things.**

plants, virus, animals, vectors
bird, fungi, insect

34. **Name these body exercises.**

35. Write two characteristics of living things.

i) _____ ii) _____

ENGLISH

1) Choose the correct word.

We hear with our _____. [eyes, nose, ears]

Cows eat _____. [glass, grass]

Babies drink _____. [susu, milk]

2)Count and write the number of letters.

mother = _____ letters

black board = _____ letters

underline = _____ letters

matchbox = _____ letters

3)Write the sentences correctly.

a) driving his car Father is.

b) a basket is carrying The girl.


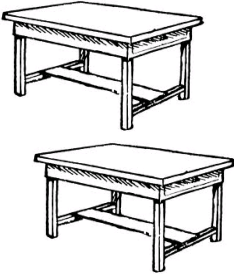



c) milk The baby is drinking.

d) flying over the tree The bird is.

4) Write animal homes.

- a) A bird lives in a _____.
- b) A crocodile lives in _____.
- c) A man lives in a _____.
- d) A cow lives in a _____.
- e) A pig lives in a _____.

5) Name these things found in class.

6) Write in plural.

One

Many

box

baby

door

sugar

bus

water

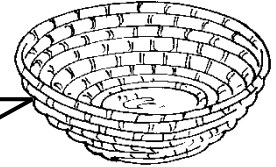
fire

puppy

sheep

7) Study the pictures and answer questions.


Ddungu



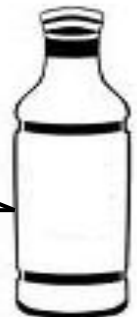
Kaweesa



Ketra



Serugo



Questions

a) Who has a basket and a pot?

b) What does Serugo have?

c) Who has a basket and an apple?

d) What does Ketra have?

8) Fill in the gaps with “is”, are or am.

a) The sheep _____ eating grass.

b) The mangoes _____ in the basket.

c) There _____ many pupils in our class.

d) I _____ a pilot.

e) It _____ an interesting story.

f) I _____ going out.

g) We _____ eating food.

h) A lion _____ a wild animal.

9) Write the words correctly.

k o b o _____ c e m a l _____

o a g t _____ s e h o u _____

a t c _____ c i l n p e _____

a i n m a l _____

b o a c k b o a r d _____

10) Form small words from big words.

blackboard _____

father _____

mango _____

monkey _____

carpenter _____

elephant _____

Monday _____

garden _____

11) Form correct sentences from the table.

	A	B	C
1.	A cow	flies an	a family.
2.	Father	pig	two eyes.
3.	I	lives	grass.
4.	A dog	eats	an aeroplane.
5.	A pilot	heads	a kennel.
6.	A young	have	piglet.

1. _____

2. _____

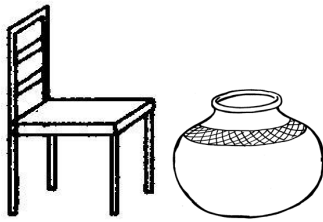
3. _____


4. _____


5. _____


6. _____

12) Where is the











END