



STANDARD JUNIOR SCHOOL – ZZANA
MID TERM ONE BREAK – HOME TESTS, 2020
P.1 MATHEMATICS SET III
TIME: 2 HOURS

SECTION A	
SECTION B	
TOTAL	

NAME: _____

SECTION A (40 marks)


1. Add: a) $7 + 3 =$

b) 9
 $+ 6$


c) T O
 5 4
 $+ 3$ 0

2. Draw the sets.

a) A set of 3 bags





b) A set of 6 pencils



3. Count and write.

a)  =

b)  =

c)  =

4. Complete the missing number.

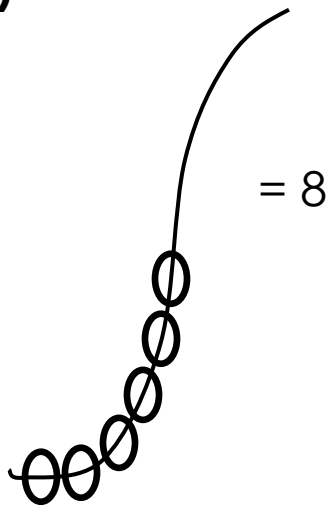
a) 34, 35, 36, 37, _____

b) 93, 94, 95, 96, _____


c) 12, 13, 14, 15, _____

5. Complete the abacus.

a)



b)



6. Match the number name.

a) 18

Sixty three

b) 7

Eleven

c) 40

Eighteen

d) 77

Seventy seven

e) 11

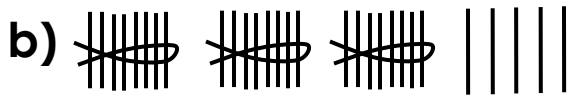
Forty

f) 63

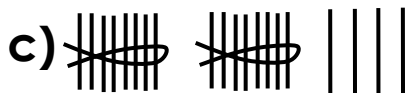
Seven

7. Fill in Tens and Ones.

a) 69 _____ tens _____ ones.



_____ tens _____ ones.



_____ tens _____ ones.

8. Subtract. (Take away)

a) $10 - 6 = \underline{\quad}$

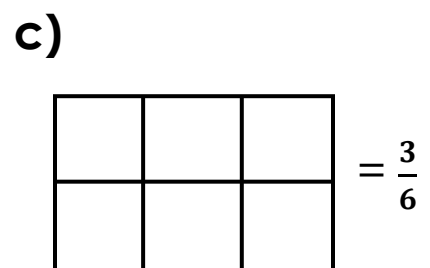
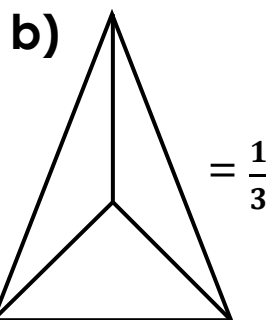
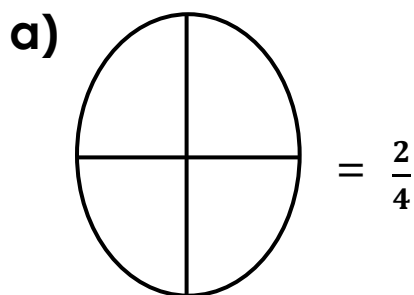
b)
$$\begin{array}{r} 12 \\ - 9 \\ \hline \end{array}$$

c)
$$\begin{array}{r} \text{T} \quad \text{O} \\ 7 \quad 8 \\ - 3 \quad 2 \\ \hline \end{array}$$

d) 8 minus 6 equals = _____

e) Ten minus four equals = _____

9. Shade the fractions.




10. Circle the bigger number.

a) 9, 16, 12




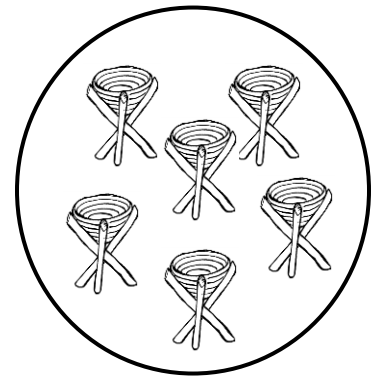
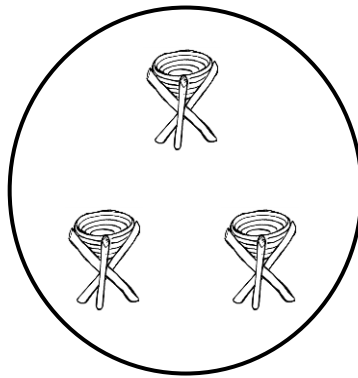
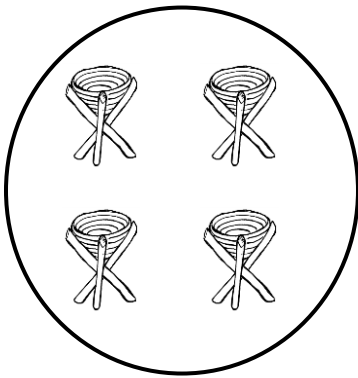
b) 40, 19, 23

11. Tell the time.



It is _____ O'clock.

12. Arrange objects starting with the smallest.



13. Write the number between.

a) 97 _____ 99

b) 34 _____ 3

14. Work out:


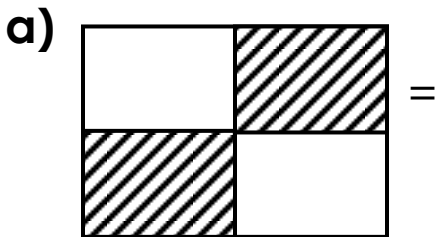
a) $\frac{2}{6} - \frac{3}{6} =$

b) $\frac{4}{10} - \frac{1}{10} =$

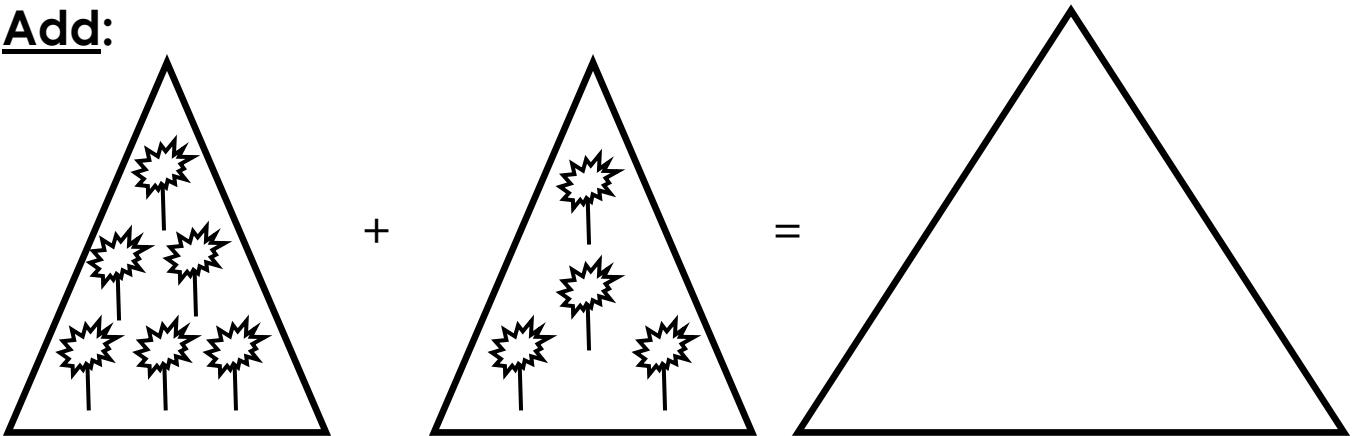
15. Multiply: a) $2 \times 6 =$ _____

b)
$$\begin{array}{r} 4 \\ \times 3 \\ \hline \\ \hline \end{array}$$

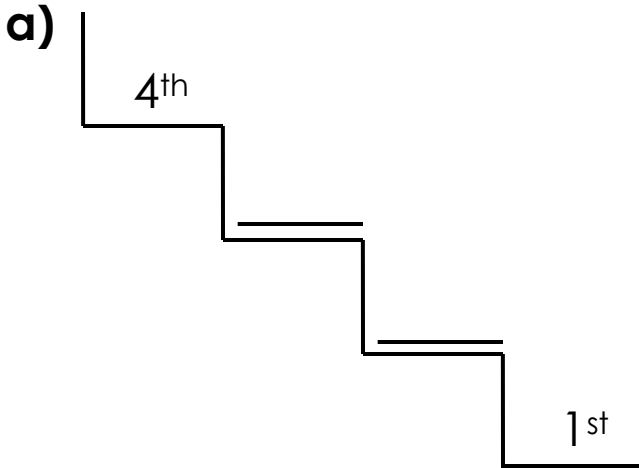
16. Name the shaded fraction.



17. Add:



18. Complete the steps.



19. Compare using “heavier than” or “lighter than”.

a)



A book is _____ a stone.

A stone is _____ a book.

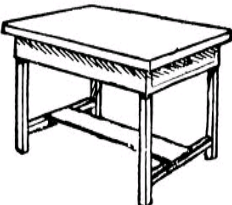
b)



A bottle is _____ a paper.

A paper is _____ a bottle.

c)



A table is _____ a broom.

A broom is _____ a table.

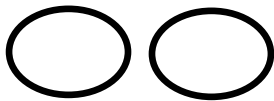
20. Count and write.




7



6




1




5



8



2



3

4

21. Write the number before.

a) _____ 76

c) _____ 51

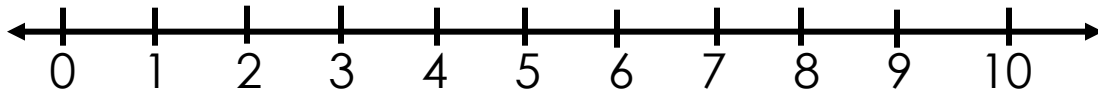
b) _____ 32

d) _____ 98

22. Add using a number line.

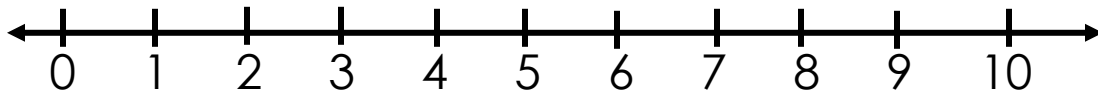
a)

$$5+4=9$$

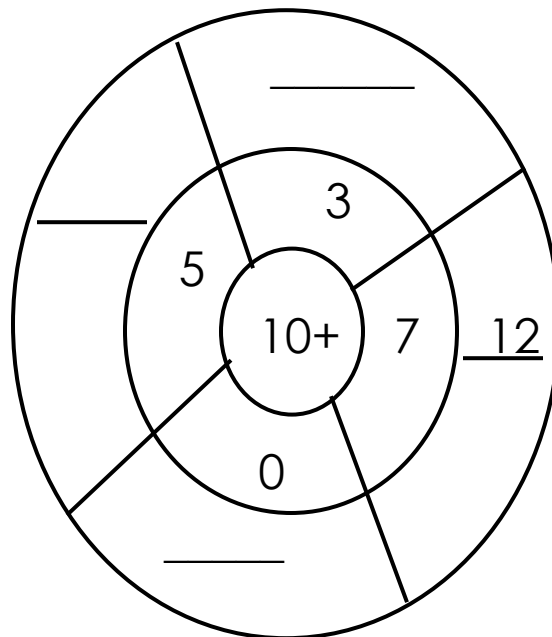


b)

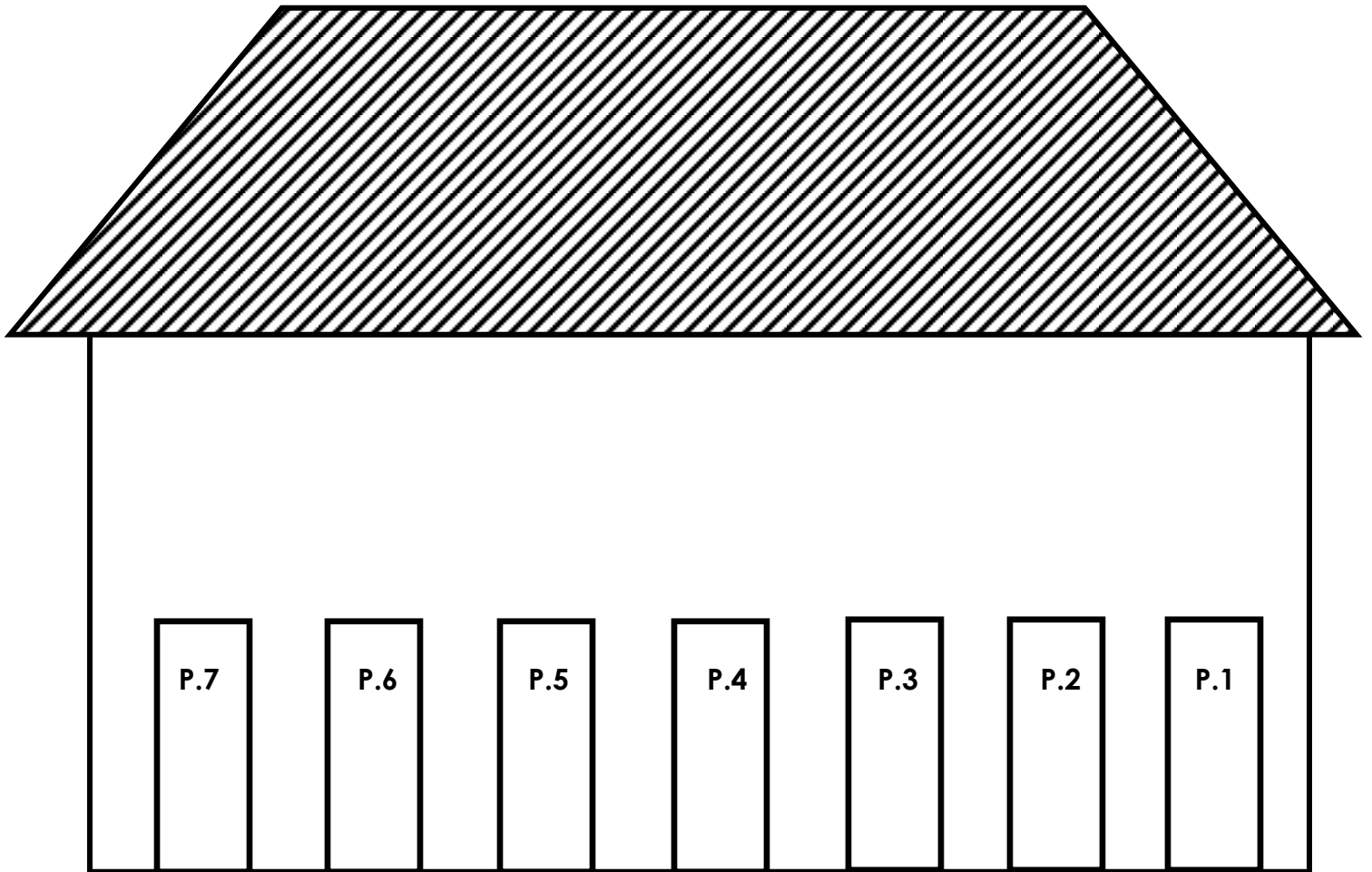
$$3+7=$$



23. Complete the additional wheel below correctly.



24. Study and order the classes.



Questions

- a) Primary one is our 1st class
- b) Primary two is our _____ class.
- c) Primary seven is our _____ class.
- d) Primary three is our _____ class.
- e) Primary five is our _____ class.

****END****