


MADINAH ISLAMIC JUNIOR SCH, NSANGI
RECESS WORK 2020
PRIMARY ONE MATHEMATICS

Name: _____


1. Name the sets.



A set of _____




A set of _____

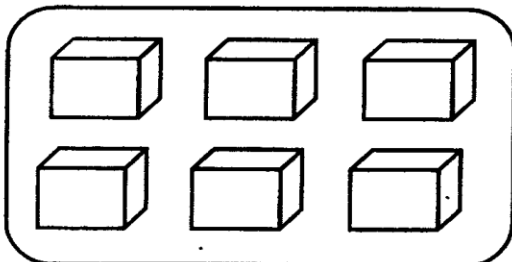


A set of _____

2. Count the members in the set.



A set of _____ flowers.



A set of _____ boxes.

3. Match correctly.



seven



three



two



five



one

4. Fill in the missing numbers.

0, 1, ____, 3, 4, ____, 6

4, ____, 6, 7, 8, ____, 10

7, ____, 9, 10, 11, 12, ____

5. Add:

$2 + 2 = \underline{\hspace{2cm}}$

$6 + 3 = \underline{\hspace{2cm}}$

$4 + 1 = \underline{\hspace{2cm}}$


$5 + 0 = \underline{\hspace{2cm}}$

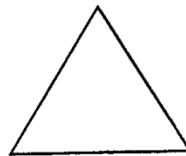
$$\begin{array}{r} 3 \\ + 2 \\ \hline \end{array}$$

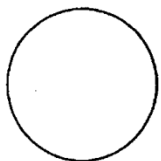
$$\begin{array}{r} 7 \\ + 3 \\ \hline \end{array}$$


$$\begin{array}{r} 2 \\ + 6 \\ \hline \end{array}$$

6. Name the shapes.









7. Write the number names.

4 four

2 _____

10 _____

6 _____

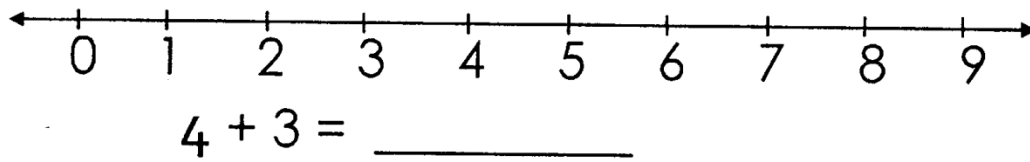
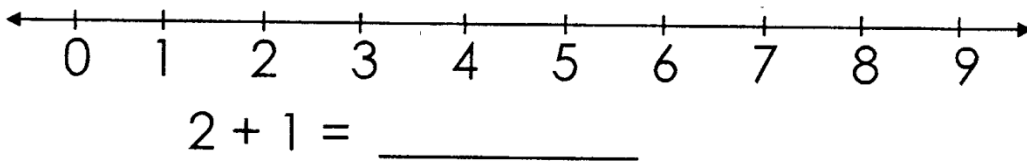
9 _____

8. Circle the smallest number.


a) 9, 2, 5, 7

b) 10, 6, 3, 9, 4

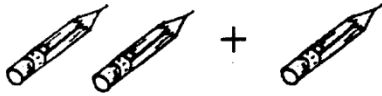
9. Add using a number line.

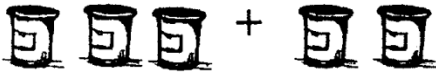



10. Form small sets from the big set.



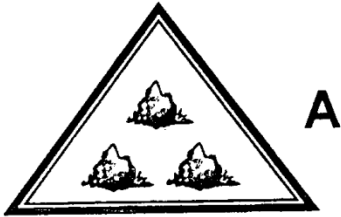
11. Add objects.

 = _____


 = _____

 = _____

12. Compare sets using "more than" "less than"



A




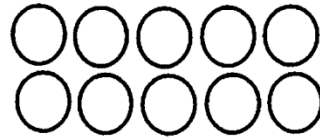
B


Set **A** has _____ members than set **B**.


Set **B** has _____ members than set **A**.

13. Count and write the number.

 = _____

 = _____

 = _____

 = _____

14. Write these numbers correctly.

0 = _____

4 = _____

9 = _____

3 = _____