

STANDARD JUNIOR SCHOOL – ZZANA

MID TERM ONE BREAK - HOME TESTS, 2020

P.1 MATHEMATICSN (SET 2)

TIME: 2 HOURS




| | |
|-----------|--|
| SECTION A | |
| SECTION B | |
| TOTAL | |

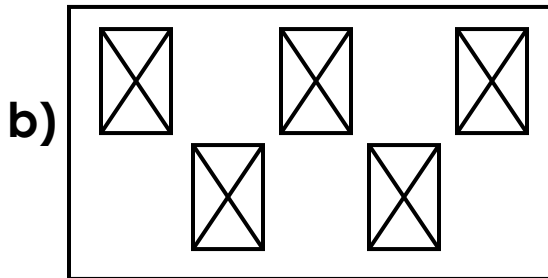
NAME: _____

SECTION A (40 marks)

1. Name the sets.



A set of _____ eggs.



A set of _____ boxes.

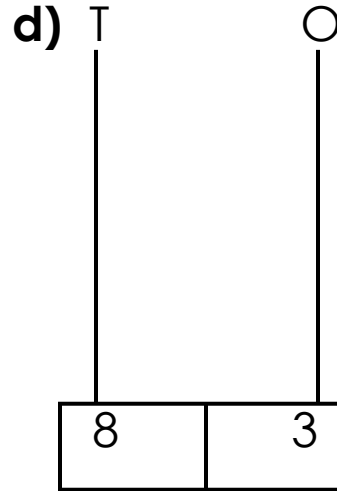
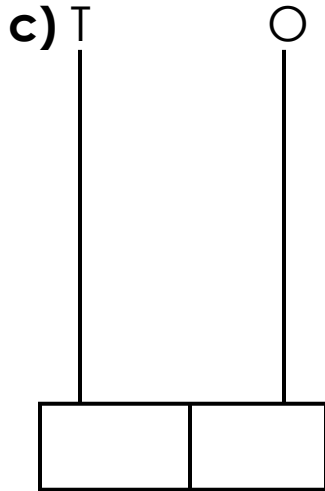
2. Counting in Tens and Ones.

a) _____ tens _____ ones.

b) _____ tens _____ ones.

3. Addition: a) $6 + 3 = \underline{\hspace{2cm}}$

b)
$$\begin{array}{r} 4 \quad 3 \\ + 2 \quad 6 \\ \hline \end{array}$$



4. Take away: a) $10 - 1 = \underline{\hspace{2cm}}$

b)
$$\begin{array}{r} 1 \quad 2 \\ - \quad 6 \\ \hline \\ \hline \end{array}$$

c)
$$\begin{array}{r} 9 \\ - 7 \\ \hline \\ \hline \end{array}$$

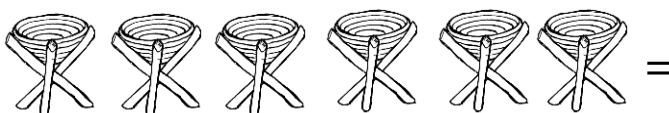
5. Fill in Hundreds Tens and Ones.

a) 647 _____ hundreds _____ tens _____ ones.

b) 905 _____ hundreds _____ tens _____ ones.

c) 383 _____ hundreds _____ tens _____ ones.

6. Count and write the number in words.



=



=



7. Fill in the missing number.

a) 106, 107, _____, 109, 110

b) 45, _____, 47, 48, 49

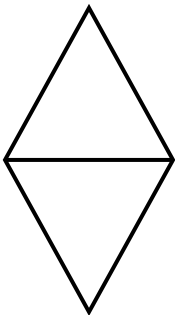
c) 14, 15, 16, 17, _____

8. Circle the big number.


a) 69, 87, 24

b) 136, 190, 199

9. Name the shapes.







[circle, rectangle, kite, triangle, star)

10. Match number symbol to number name.

124

seventy five

88

twelve

62

one hundred twenty four

12

eighty eight

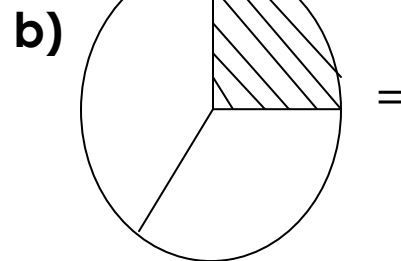

104

sixty two

75

one hundred four

11. Name the shaded fraction.



SECTION B

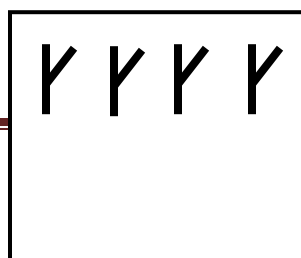
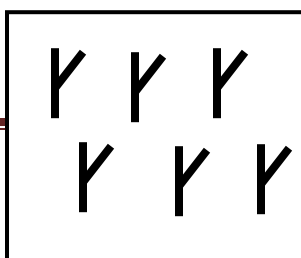
12. Complete the numbers.

a) 37, 38, 39, _____

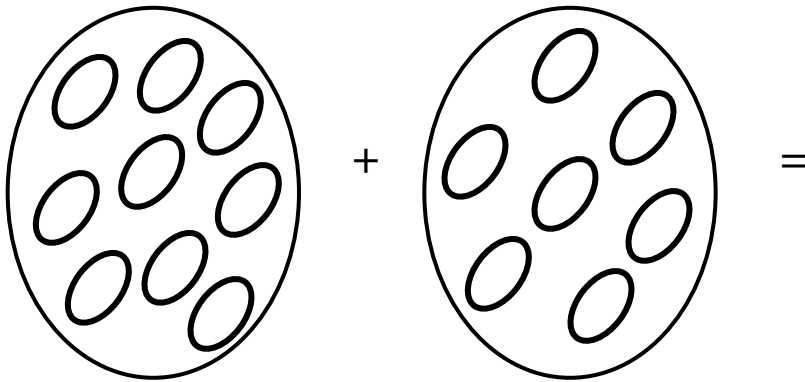
b) 15, 16, 17, _____

c) 168, 169, 170, _____

13. Count and add.



$$+ \quad \text{Y Y Y Y} \quad =$$



14. Arrange numbers starting with the smallest.

a) 5, 8, 3, 7, 9 = _____

b) 145, 126, 110, 172, 113 = _____

c) 12, 14, 13, 10, 17 = _____

15. Workout:


a) eight plus seven equals _____.

b) Ten plus nine equals _____.

c) Twelve plus three equals _____.


16. Multiply: a) $3 \times 4 =$ _____ b)
$$\begin{array}{r} 3 \quad 4 \\ \times \quad 2 \\ \hline \end{array}$$
 c)
$$\begin{array}{r} 6 \\ \times 4 \\ \hline \end{array}$$

17. Compare using bigger or smaller.



A tin is _____ than a book.


A book is _____ than a tin.




A cup is _____ than a table.

A table is _____ than a cup.


18. Form new sets from the big set.



19. Tell the time.



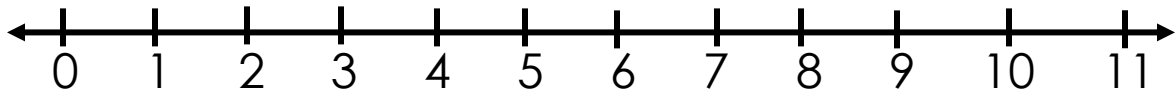
It is _____ O'clock.



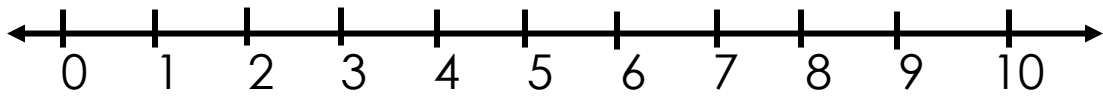
It is _____ O'clock.

20. Add Using a number line.

a) $6 + 3 =$



b) $5 + 2 =$



21. Workout: a) $\frac{5}{9} + \frac{3}{9} =$ _____

b) $\frac{10}{12} - \frac{7}{12} =$ _____

22. Take away.

| | | | |
|----|---|---|-------|
| 9 | | 4 | _____ |
| 12 | | 6 | _____ |
| 7 | - | 2 | _____ |
| 30 | | 0 | _____ |
| 4 | | 4 | _____ |

******END******