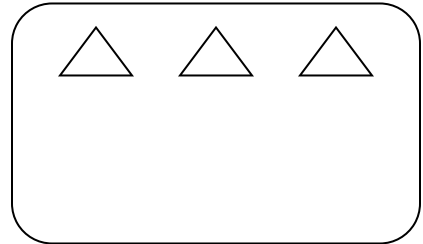
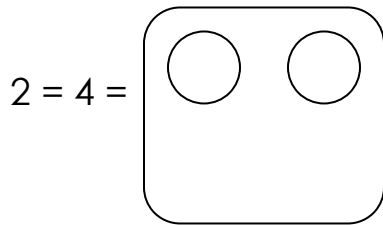


Mid – Term 2 (2012) Exams Maths for P.1

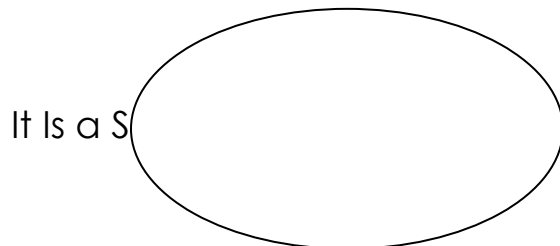
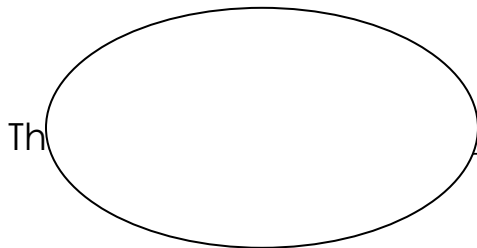
Name:

1. shade the Objects for the Number Given.



2. (A) A Is a Collection of Things.

(B) Name the Sets Given.



3. count the Letters and Write the Number.

in = Bean =

blackboard = Elephant =

4. add the Tens and Ones.

(A) 2 Tens and 4 Ones Make _____

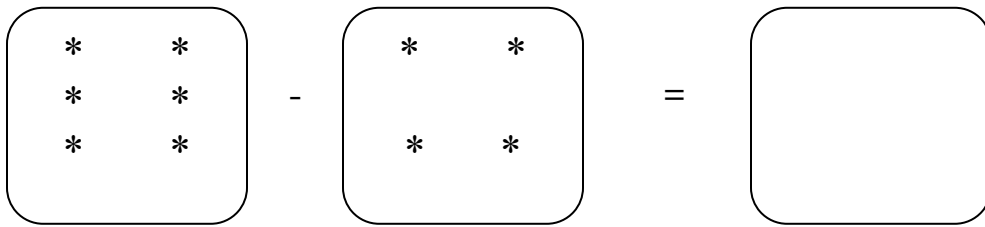
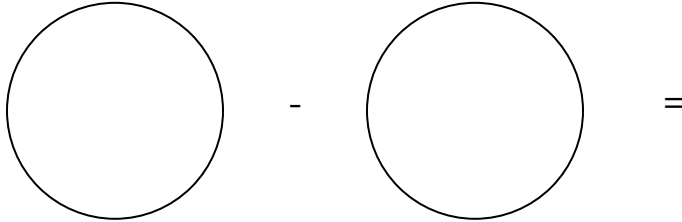
(B) 6 Tens and 0 Ones Make _____

† O T O

4 5 6 4

+ 2 3 + 2 0

5. subtract the Sets.



6. fill in the Missing Letters for a Correct Word.

s Nd Y Th Rsda

7. (A) Expand the Numbers.

E.G 23 = 20 + 3

(I) 14 = 35 =

(B) What Number has Been Expanded?

10 + 4 = 20 + 5 =

8. subtract the Tens and Ones.

T O T O

8 4 7 5

- 8 3 - 3 4

9. match the Words to Their Numbers.

Four 9

Twelve 17

Nine 4

Thirteen 12

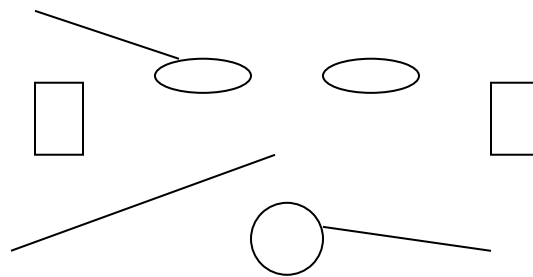
Seventeen 13

10. name the Shapes On the Face by Filling in Letters.

Ov L

Squ R

Tri Ngl C Rcle



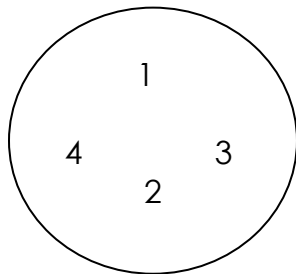
11. (A) Order the Sets Starting From the Smallest Set Given.

A B C

=

(B) Write the Numbers Starting From the Smallest Number.

=



12. work Out and Fill in the Addition Table Correctly.

2nd Number

+ 2 4 A - _____

1 B -

1st Number

3 C -

D -

13. (A) Add On the Number.

(I) $2 + 3 =$

0 1 2 3 4 5 6 7 8 9 10

(II) $4 + 4 =$

0 1 2 3 4 5 6 7 8 9 10

(B) Find and Fill in the Missing Numbers.

0 1 2 3 4 5 6 7 8 9 10

$+ = 9.$

14. read, Work and Fill in the Correct Answer.

(A) Two Plus Three Equals _____

(B) Six Balls Add Four Balls Equals Balls.

(C) A Snake has Legs.

(D) Two Cats Have Ears Altogether.

(E) Two Cows Have Legs Altogether.

(F) Victor has Got Eyes.

15. study the Pictures and Answer the Questions Correctly.

Doreen	Jolly
--------	-------

(A) how Many Pots has Doreen?

(B) Who has the Less Number of Pots?

Has the Less Number of Pots.

(C) how Many Pots Do They Have Altogether?

they Have Pots Altogether.

**** The End. ****