

NAME: \_\_\_\_\_

1. Add these:

$2 + 9 =$

$0 + 8 =$

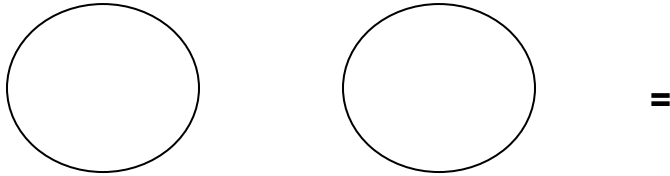

$5 + 3 + 6 =$

$4 + 4 + 4 =$

$$\begin{array}{r} \text{T} \quad \text{O} \\ 3 \quad 4 \\ + 2 \quad 1 \\ \hline \end{array}$$

$$\begin{array}{r} \text{T} \quad \text{O} \\ 6 \quad 5 \\ + 7 \quad 0 \\ \hline \end{array}$$

2. Find the Union set.



3. Write the number word.

$9 = \underline{\hspace{2cm}}$

$64 = \underline{\hspace{2cm}}$

$14 = \underline{\hspace{2cm}}$

$0 = \underline{\hspace{2cm}}$

4. Fill in the missing letters.

M\_\_\_\_nday

Fr\_\_\_\_d\_\_\_\_y

**5. Fill in the missing months of the year.**

January, February, \_\_\_\_\_

April, \_\_\_\_\_, June

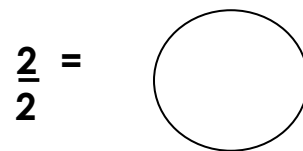
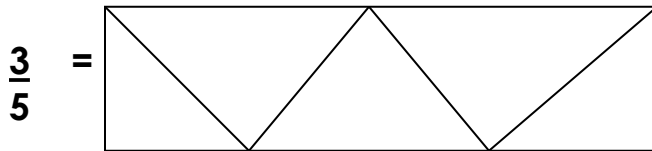
**6. Use bundles and sticks to show Tens and Ones.**

14 =

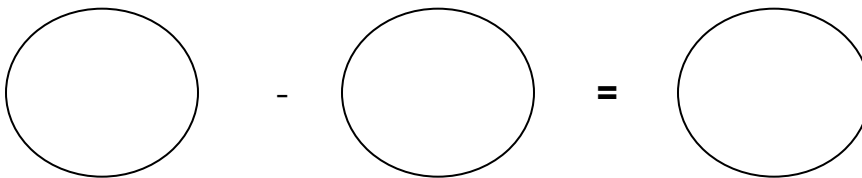

06 =

23 =

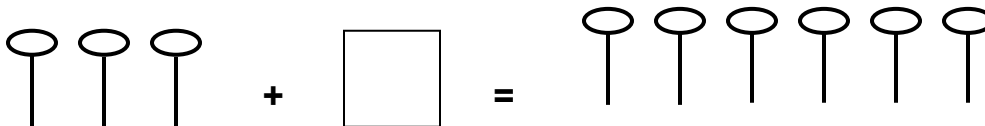
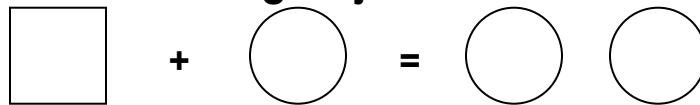
**7. Shade the given fraction.**



**8. Subtract objects.**



**9. Draw the missing objects.**



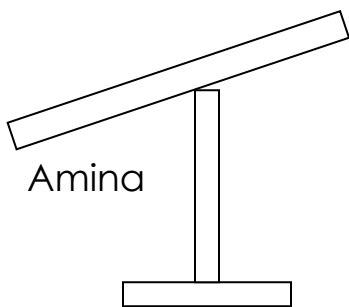
**(b) Fill in the missing addends.**

2 +  = 4

$$\square + 5 = 9$$

$$\begin{array}{r} 3 \\ \square \\ \hline \end{array} \qquad \begin{array}{r} \square \\ + 7 \\ \hline \end{array}$$

**10. Fill in correctly.**



Halima \_\_\_\_\_ is heavier than \_\_\_\_\_

\_\_\_\_\_ is lighter than \_\_\_\_\_

**11. Give two non standard units of measuring.**

(a) \_\_\_\_\_ span

(b) \_\_\_\_\_ span

**12.** (a) A \_\_\_\_\_ is a collection of things.

(b) Things found in a set are called \_\_\_\_\_

**13. Divide: (share)**

$$9 \quad 3 =$$

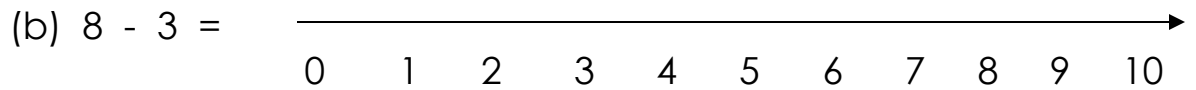
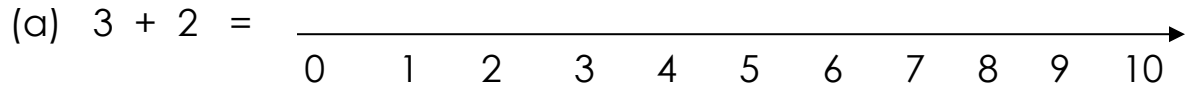
$$14 \quad 7 =$$

**14. Fill in more or less.**

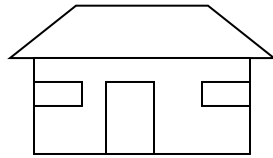
The cup has \_\_\_\_\_water than the pot.

The pot has \_\_\_\_\_water than the cup.

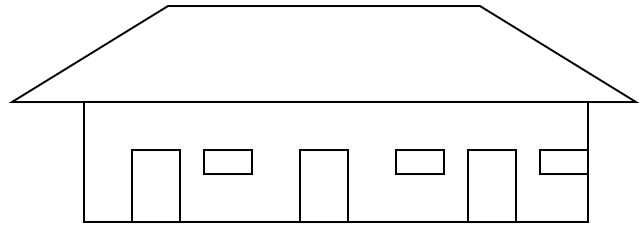
**15. Work out using the given number lines.**



**16. These are two houses.**



Allan's house



John's house.

(a) How many ventilators has Allan's house?

\_\_\_\_\_

(b) How many doors has John's house?

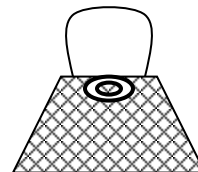
\_\_\_\_\_

(c) There are \_\_\_\_\_windows altogether.


**17. Our shop.**

Shs. 500

Shs. 200



Sh. 1000





(a) How much will I pay for a sweet?

\_\_\_\_\_

(b) What is the cost of a bag?

Shs. \_\_\_\_\_

(c) \_\_\_\_\_ + \_\_\_\_\_ = Shs. \_\_\_\_\_

(d)  +  = Shs. \_\_\_\_\_

**18. Write two uses of money.**

(a) \_\_\_\_\_

(b) \_\_\_\_\_

**\*\* The End. \*\***