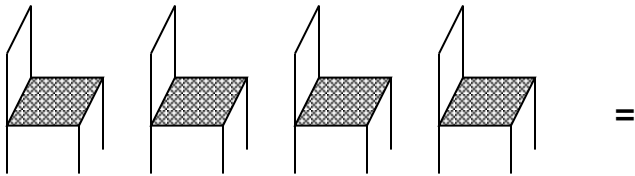



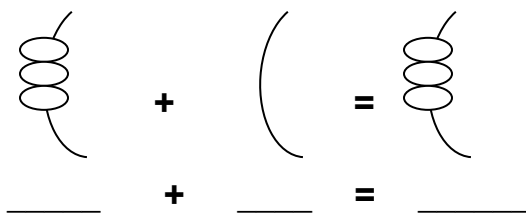
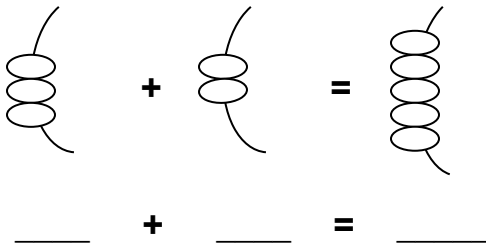
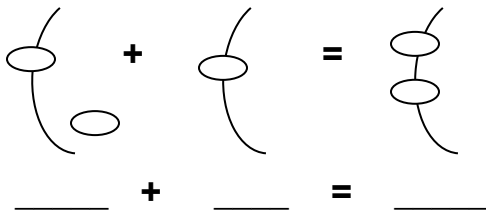
END OF 1ST TERM EXAMS
MATHS FOR P.1

NAME: _____ **STREAM:** _____

A. Count and write the number.



B. Count and fill in the number.



C. Use: < = > correctly

9 _____ 4

3 _____ 5

8 _____ 8

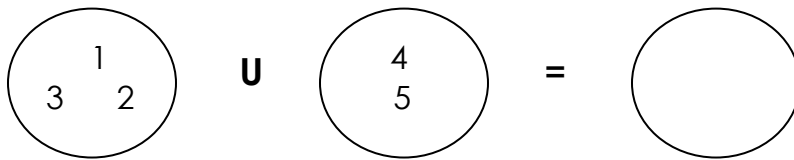
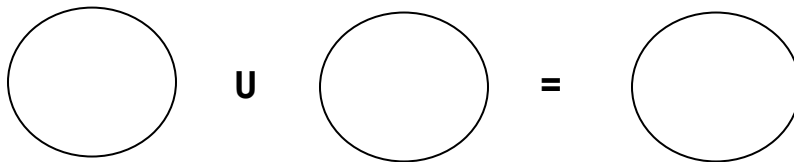
D. Circle the greater number.

4 7

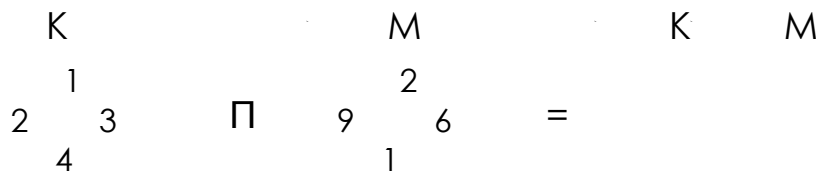
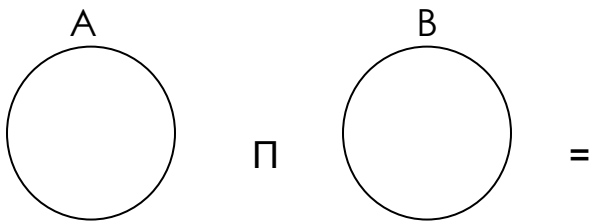
10 6

0 9

E. (a) Find the Union Set.



(b) Find the intersection.



F. Read and draw the sets.

A set of three tins.

A set of cows in the class.

A set of seven flowers.

A set of lions in the toilet.

G. Add these:

$2 + 4 =$

$6 + 5 =$

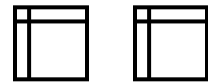

$1 + 2 + 4 =$

$0 + 5 + 7 =$

$$\begin{array}{r} 2 \\ + 5 \\ \hline \end{array}$$

$$\begin{array}{r} 0 \\ + 9 \\ \hline \end{array}$$

H. Fill in more or less.



The books are _____ than the girls.

The girls are _____ than the books.

I. (a) Tens and Ones.

Match

50

2

10

4

(b) **Fill in Tens and ones.**

$$// =$$

$$/// =$$

$$//// =$$

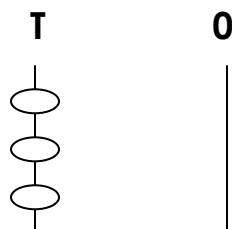
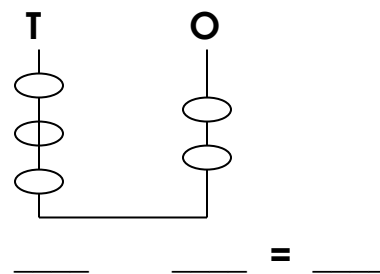
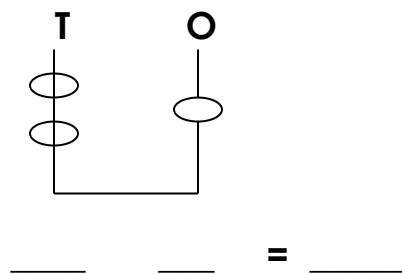
(c) **Fill in Tens and Ones.**

$$25 = \underline{\quad} \text{Tens and } \underline{\quad} \text{Ones.}$$

$$96 = \underline{\quad} \text{Tens and } \underline{\quad} \text{Ones.}$$

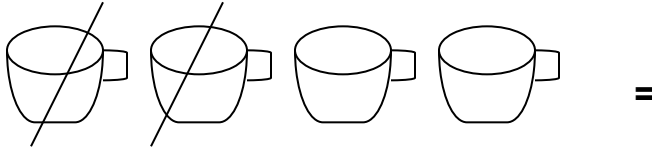
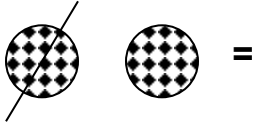
$$3 \text{ Tens and } 0 \text{ Ones make } \underline{\quad}$$

(d) **Find the numbers on the abacus.**



_____ = _____

J. Take away.



$$4 - 2 =$$

$$6 - 3 =$$

$$8 - 5 =$$

K. Read and add.

One plus **three** equals _____

One plus **one** equals _____

Four cups add **three** cups equals _____ cups.

**** The End. ****