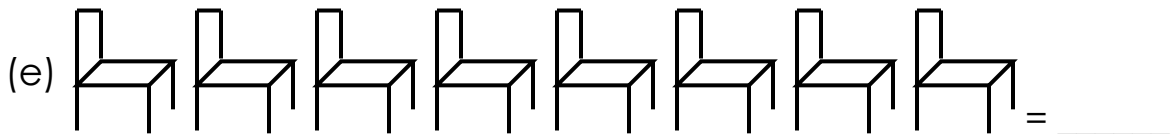
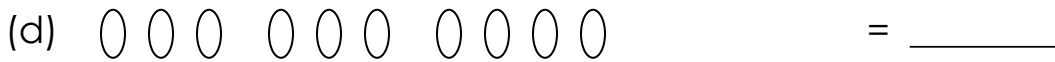
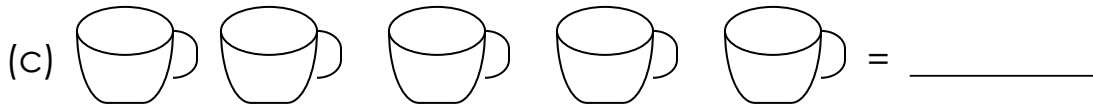



END OF 1ST TERM EXAMS

MATHS FOR P.1

NAME: _____

1. **Count and write the number.**



2. **Write the missing number.**

(a) 0, 1, _____, 3, _____, 5.

(b) 4, _____, 6, _____, 8, 9.

(c) 7, _____, _____, 10.

(set, map)

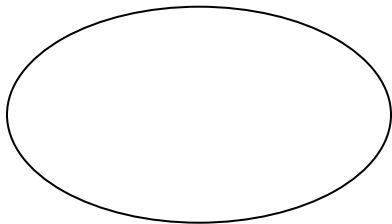
8. Things in a set are called _____
(cups, balls, members)

9. Draw an empty set.

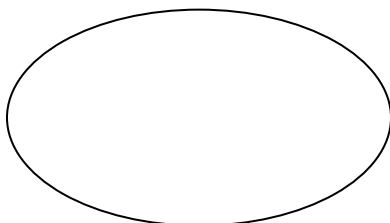
10. Draw a set of five tins. 11. Draw a set of eight balls.

12. Draw a set of four books.

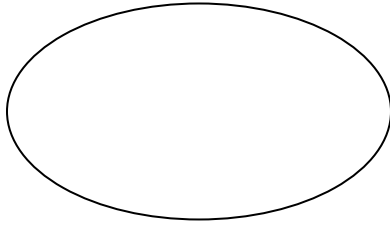
13. **Count the members.**



A set of _____ trees.



A set of _____ cups.



A set of _____ birds.

14. **Add:**

(a) $2 + 3 =$ _____

(b) $3 + 7 =$ _____

(c) $3 + 1 + 2 =$ _____

(d) $4 + 2 + 2 =$ _____

15. **Take away.**

$5 - 2 = \underline{3}$

(a) $7 - 3 =$ _____

(b) $6 - 2 =$ _____

(c) $8 - 0 =$ _____

16. How many legs has a bird?

17. A cow has _____ legs.

18. Seven plus two equals _____

19. Five balls take away three balls gives _____

20. Here are four girls. How many legs do they have?

= _____ legs.

**** The End. ****
****Success Success.****