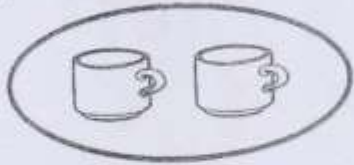


MOTHERCARE PREPARATORY SCHOOLS


PRIMARY ONE MATHEMATICS

Name: _____ Stream: _____

1. Name the sets.



A set of 2 _____.



A set of 4 _____.

(pencil, books, cups)

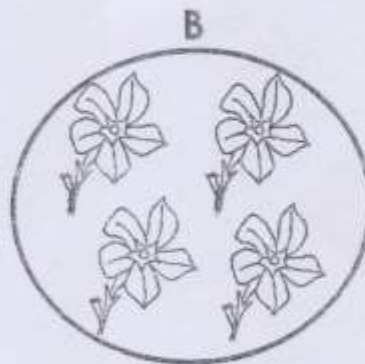
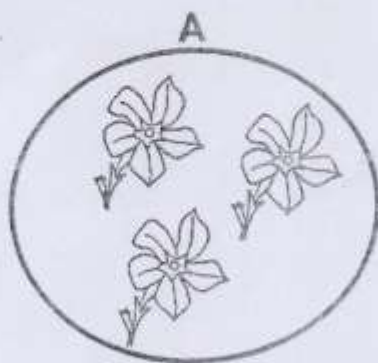
2. Add:

$$4 + 2 + 1 = \underline{\hspace{2cm}}$$

$$5 + 1 = \underline{\hspace{2cm}}$$

T	O
4	3
+1	2
<hr/>	

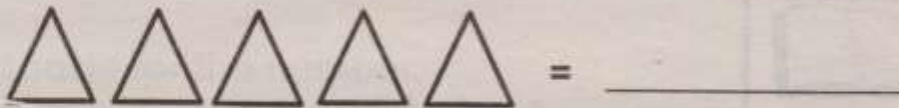

3. Use "more" or "less".



Set A has _____ flowers.

Set B has _____ flowers.

4. Count and write.



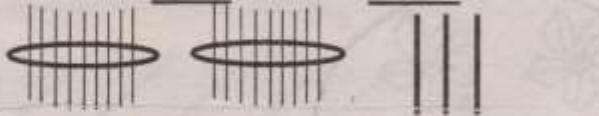
5. Draw these shapes.

triangle

oval

square

6. Fill in "tens" and "ones".



_____ tens _____ ones.

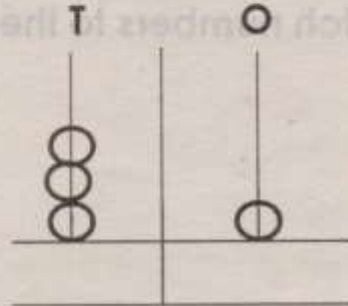
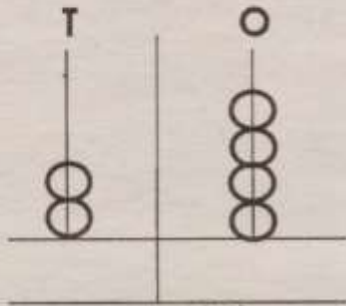
12 = _____ tens _____ ones.

7. Circle the smaller number.

5, 10

6, 3

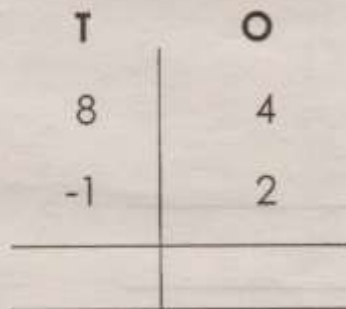
8. Write the number on the abacus.



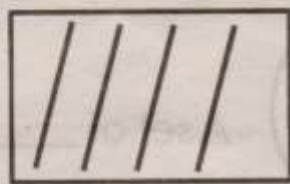
9. Subtract:

$7 - 5 = \underline{\hspace{2cm}}$

$9 - 3 = \underline{\hspace{2cm}}$




10. Join the sets.




+



=



+



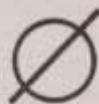
=



+

=

11. Which symbol is this?



A symbol of _____ set.

(orange, empty)

12. Match numbers to their names.

10

fifteen

15

twenty

20

ten

13. Write in words.

10 = _____

4 = _____

14. Word problems.

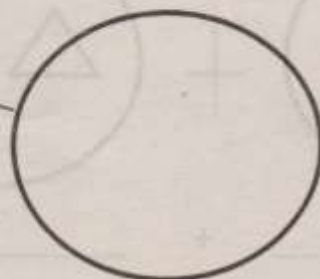
6 plus 2 equals _____

3 take away 1 equals _____

15. Form new sets.



A set of _____.



A set of _____.

16. Write the number before.

0, 1

 , 3

 , 5

17. How many can you see?



= nose.







= ears.

18. Write these numbers correctly.

3 =

6 =

19. Study the graph and answer correctly.

Bob	
Betty	
Bena	
Ben	


a. Who has more oranges?


b. _____ and _____ have same number of oranges.


c. How many oranges are they altogether?

_____ Oranges.

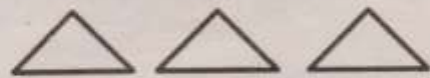
20. **Shade for the number.**

4 = 


1 = 

2 = 


21. **Count and match.**



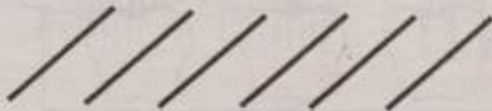
2



3



6



5

The end