


NAMAGUNGA PRIMARY BOARDING SCHOOL
TERM I HOLIDAY WORK - 2020
PRIMARY ONE – MATHEMATICS

Name:Stream:

SECTION: A

1. **Name the group.**



A group of _____.

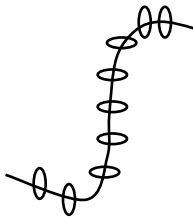
2. **Add:**

$$3 + 1 = \underline{\quad}$$

3. **Circle the correct number.**

2

4. **Count and write the number.**



5. **Fill in the missing numbers.**

1 , 2 , 3 , 4 , _____ , 6 , 7 , 8


6. Take away.

$$\begin{array}{r} 7 \\ - 4 \\ \hline \\ \hline \end{array}$$

7. Write the word.

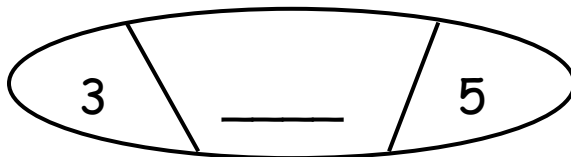
1 - _____

8. Name the set.



A set of _____.

9. Write the middle number.




10. Underline the correct spelling.

tow

two

owt

11. Name the shape.



12. Add:

$$\begin{array}{r} 3 \\ + 2 \\ \hline \end{array}$$

13. Circle the smaller number.

7 or 4

14. Fill in the missing letter.

Mond__y

15. Subtract

$$5 - 2 = \underline{\quad}$$

16. Read and shade.

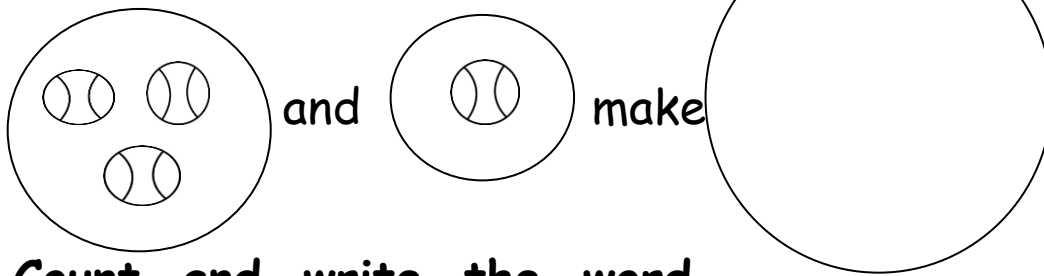
3 = 

17. Read and draw.

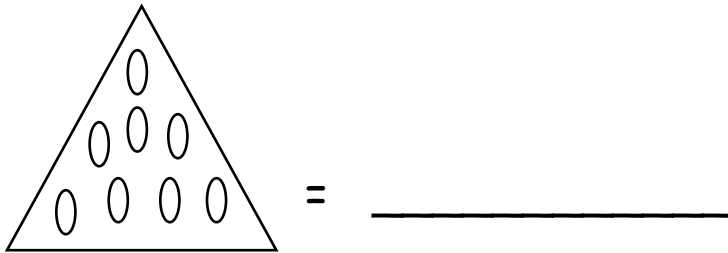
rectangle

18. two and two make _____.

19. Join the sets.

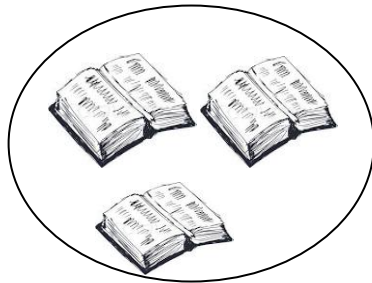


20. Count and write the word.

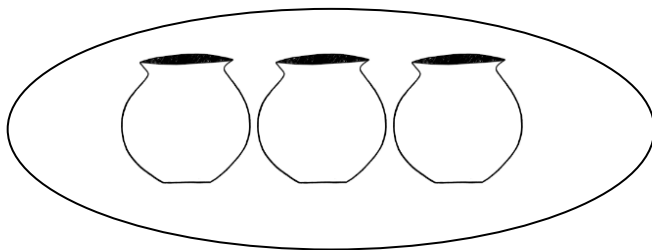


SECTION: B

21. Name the sets.



A set of _____.



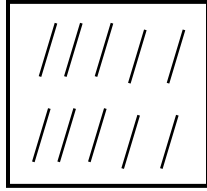
22. Write the number name.

3 - _____

6 - _____

5 - _____

23. Count and write the number.



= _____



= _____

24. Add:

$1 + 1 = \underline{\quad}$

$7 + 1 = \underline{\quad}$

$$\begin{array}{r} 7 \\ + 3 \\ \hline \\ \hline \end{array}$$

$$\begin{array}{r} 2 \\ + 4 \\ \hline \\ \hline \end{array}$$


25. Write the figure.

nine - _____

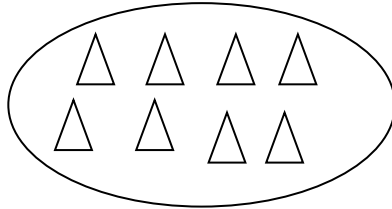
zero - _____

three - _____


26. Count and match to the number.



4



3



8

27. Name any two days of the week.


28. Take away / subtract.

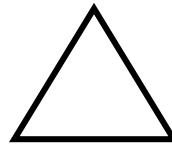
$4 - 3 = \underline{\quad}$

$$\begin{array}{r} 10 \\ - 4 \\ \hline \end{array}$$

$6 - 1 = \underline{\quad}$

29. Name the shapes.

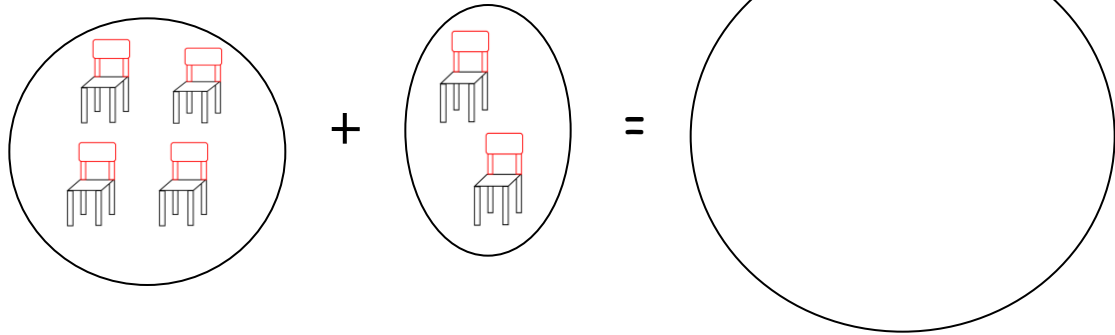








30. Join these sets.



31. Match

$$3 + 5 = 4$$

$$6 - 2 = 2$$

$$2 + 1 = 8$$

$$7 - 5 = 3$$

32. Work out.

(a) five plus one equals _____

(b) two plus four equals _____

(c) six take away five equals _____

(d) nine take away three equals _____