



KINGS WAY PRIMARY SCHOOL

P. 3 RECESS REVISION 2020 - (SET FOUR)

MATHEMATICS

Time allowed: 2 hours and 30 minutes

Name: _____ Stream: _____

SECTION A: (40 marks)

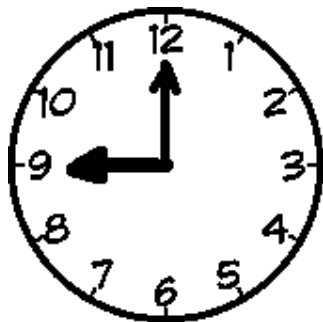
1. Complete correctly: $6 \times 4 = 4 \times \underline{\quad}$

2. Add:

$$\begin{array}{r} 24 \\ + 33 \\ \hline \\ \hline \end{array}$$

3. Write $\frac{1}{2}$ in words.

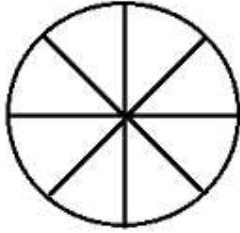
4. What is the time on the clock face below?



5. Express XXIV in Hindu Arabic numerals.

6. Complete the sequence: 11, 9, 7, 5, _____.

7. Shade $\frac{5}{8}$ of the figure below.




8. Work out: + 4 = 9

9. A sweet costs sh. 250. How much money do 4 sweets cost?

10. Which month comes before July?

11. Given that set $A = \{\text{Days of the week between Sunday and Saturday}\}$. Find $n(A)$.

12. Name the solid figure whose net is given below.



13. Work out:

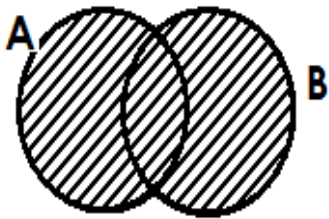
l	cl
8	520
- 3	220


14. Which number has been expanded to give: $3000 + 700 + 40 + 5$?

15. Musa has 3 – two hundred shilling coins. How much money does he have?

16. List down the factors of 16.

17. What does the shaded region represent in the Venn diagram below?



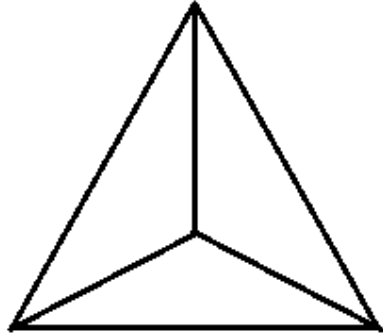
17. If  represents 10 cars, how many cars are represented by:



18. Write 5,078 in words.

19. A father gave 3 cakes to each of his seven children. How many cakes did he give out?

20. How many triangles are in the figure below?



Section B

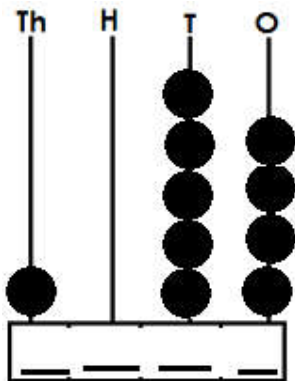
21(a) Work out the following:

9 thousands + 6 hundreds + 7 ones.

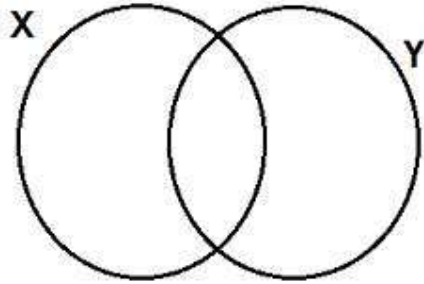
(3 marks)

(b) What number is shown on the abacus below?

(2 marks)



22. Given that set $X = \{b,e,a,n,s\}$ and set $Y = \{p,e,a,k\}$.
(a) Use the information above to complete the Venn diagram below. **(3 marks)**



- (b) List down all the members of $(X \cup Y)$. **(1 mark)**
- (c) How many members are in $(X \cap Y)$? **(1 mark)**

23(i) **Fill the boxes with the missing numbers.** **(2 marks each)**

(a) $12 \div \square = 2$ (b) $\square \times 3 = 18$

(ii) What number is subtracted from 7 to get 4? **(2 marks)**

24(a) How many days are in 5 weeks? **(2 marks)**

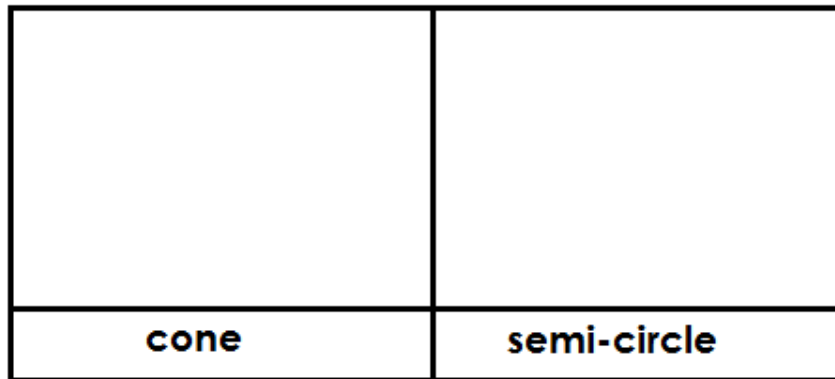
(b) If today is Saturday, what day of the week was it 4 days ago? **(2 marks)**

(c) How many months are in 2 years?

(2 marks)

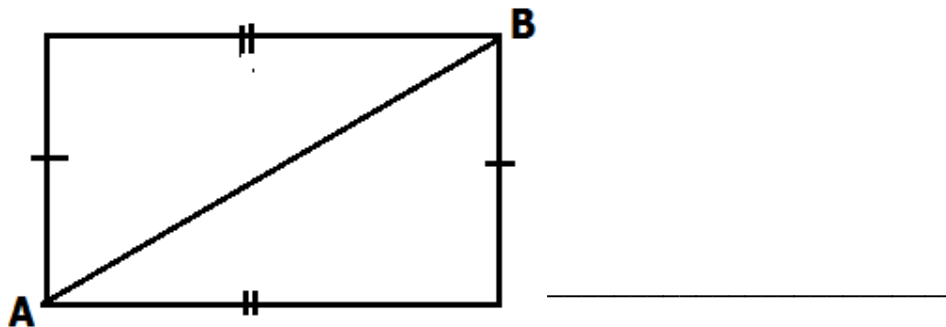
25(a) Draw the following shapes.

(2 marks each)



(b) What name is given to line AB in the figure below?

(1 mark)



26(a) List down the multiples of 3 less than 15.

(2 marks)

(b) Find the sum of the second and fifth even numbers.

(3 marks)

27(a) Subtract: $\frac{6}{9} - \frac{4}{9}$ **(2 marks)**

(b) Write one fraction equivalent to $\frac{1}{4}$ **(1 mark)**

(d) Arrange the fractions in order starting with the biggest fraction. **(2 marks)**

$$\frac{4}{11}, \frac{7}{11}, \frac{8}{11}, \frac{6}{11}$$

28. **The table below shows goats farmers own on their farms. Use it to answer the questions that follow.**

Name of the farmer	Balu	Juma	Kato	Dudu
Number of goats	12	8	15	12

(a) How many farmers are recorded in the table? **(1 mark)**

(b) Which farmer has the highest number of goats? **(1 mark)**

(c) Find the difference between the number of goats found on Juma and Kato's farms. **(2 marks)**

(d) Find the total number of the goats all the farmers have on the farms. **(2 marks)**

29. Use $>$, $<$ or $=$ to complete the statements below correctly. (1 mark each)

(a) 3×2 _____ $2 + 3$

(b) 19 _____ XIX

(c) 100cm _____ 2 metres

(d) $6 + 0$ _____ 6×0

30. Below is Kampi's budget for a trip. Use it to answer the questions that follow.

A packet of sweets sh. 2300

A packet of biscuits sh.1500

A bottle of soda sh. 1000

A cake sh. 2000

(a) What was the most expensive item in Kampi's budget? **(1 mark)**

(b) How much did he pay for a packet of biscuits and a bottle of soda? **(2 marks)**

(c) How much more money does Kampi pay for a packet of biscuits than a cake?
(2 marks)

31(a) Add: $12\text{m} + 13\text{m} =$ _____ **(2 marks)**

(b) Kg g

	2	700
+	4	150
<hr/>		
<hr/>		

(2 marks)

32(a) A class has 4 columns. If each column has 23 pupils, find the number of pupils in the class. **(2 marks)**

(b) A father divided 55 books equally among his 5 children. How many books did each get? **(2 marks)**



KINGS WAY PRIMARY SCHOOL

P. 3 RECESS REVISION 2020 - (SET FOUR)

LITERACY IA

DURATION: 2 HOURS 15 MIN

Name _____ Stream _____

Instructions

1. Answer all questions.
2. Read the questions carefully before you answer.
3. Write your answers well.

SECTION A (30 MARKS)

1. Name any one domestic animal which gives milk.

2. Give any one way of cleaning our toilets.

3. Draw one item made from clay.



4. Write one way of caring for plants.

5. Name any one thing we get from bees.

6. Why do we boil water for drinking?

7. Name the tool people use for peeling.

8. Name this item made from animals hides.



9. Write one common disease at home.

10. Which part of the body is used for smelling?

11. Name the tool used to collect rubbish in our school compound.

12. Why do animals move from one place to another?

13. Give one activity farmers do in the garden.

14. Give the use of this item to people.



15. How many legs has an insect.

16. Give one way of caring for our hair.

17. Name one thing we use to keep our body clean.

18. Why is it dangerous to play with fire?

20. Why do people keep cats at home?

21. What is the use of the body part below?



22. How are grasshoppers useful to people?

23. Name one common food eaten at home.

24. Give one way of managing sunny weather.

25. Write one way of preserving fish.

26. Name one immunisable disease.

27. Name one item you can use to carry water.

28. What food value do we get from mangoes?

29. What should we always do before eating food?

30. Name one weak member in the family.

SECTION B (70 MARKS)

31 a) Complete the table correctly.

Animal

habitat

kennel

fish

pig

byre



32a) Write down two common accidents at home.

i) _____

ii) _____

b. Give one cause of accidents at home.

c. State one effect of accident.

34. Give two classes of food.

i) _____


ii) _____

b. Why do people eat food?

i) _____

ii) _____

35a) Name the parts of the bird.



a. _____

b. _____

c. _____

d. _____

36 a. List down two childhood killer diseases.

i) _____

ii) _____

b) Name one vaccine given to babies.

c) State one reason why we immunize children.

37. a) Give two ways we can keep our environment clean.

i) _____

ii) _____

b. Name any two things used to clean the environment.

i) _____

ii) _____

38. Write down three types of soil.

i) _____

ii) _____

iii) _____


b) Give one animal that lives in the soil.

39. a) What is the main natural source of water?

b) Give two uses of water to man.

i) _____

ii) _____





KINGS WAY PRIMARY SCHOOL

P. 3 RECESS REVISION 2020 - (SET FOUR)

LITERACY IB

DURATION : 2 HOURS 15 MIN

Name _____ stream _____

SECTION A (40 MARKS)

1. Name one domestic bird.

2. Write down any one use of banana fibre to school children.

3. What local material is used for making pots?

4. Why is a head teacher important in a school?


5. Which type of transport brings children to our school?

6. Give any one thing made from sisal.

7. Why is air transport used by few people?

8. Mention one tool used for keeping peace and security.

9. Name this road sign.



10. Name the tree where bark cloth is got from.

11. What are bricks and blocks used for?

12. Name one product got from a sheep.

13. Why should a home have a fence?

14. Why is a mother important at home?

15. What is the use of a bell at school?


16. Who makes an aeroplane to fly?



17. What object do we use for sweeping our class?

18. Name the community where people get education from?

19. Draw any one object made from papyrus.



20. Which part of a house protects us from bad weather?

SECTION B(60 MARKS)

21. What do we call things made out of local materials using hands?

b. Draw and name any two play materials made from local materials.

c. Mention any one importance of crafts to people.

22.a) What is transport?



b. Why is road transport used by many people?

c. Name two means of air transport.

i) _____

ii) _____

23. a) Why is the police important in the community?

b. Mention any two important places in the community?

i) _____

ii) _____

c. Write down one group people who treat and care for the sick.

24. Which animal lives in a hutch?

b. Why do people keep turkeys at home?

c. Name any two domestic animals kept for milk.

i) _____

ii) _____

25. What is weather?

b. Name any two weather makers you know.

i) _____

ii) _____

c. In which season do farmers harvest their crops?

26. _____ is living in harmony with others.

b. Give two people who provide peace and security in the community

i) _____

ii) _____

c. Write L.C in full.

27. a) Name this item found at home.



b. Write down two uses of the above item.

i) _____

ii) _____

c. Which material is used to make the above item?

28. a) Why does a school collect school fees.

b. Name any three needs of a school.

i) _____ ii) _____

iii) _____

29. Why do we need drivers at school?

b. Name any two places where people get transport service.

i) _____ ii) _____

c. Mention one person found in the hospital.

30. Write down any two school rules.

i) _____

ii) _____

b. Name any two things found on the school badge.

i) _____

ii) _____

31. Mention any two places where people go for recreation.

i) _____ ii) _____

b. Give two reasons why we need recreation.

i) _____

ii) _____

32. What is child abuse? _____

b. Mention any two roles of children at home.

i) _____

ii) _____

c. Give any one cause of child abuse.

33. What are domestic animals?

b. Mention two reasons why animals move one place to another.

i) _____

ii) _____

c. How are bees useful to people?

34. **Match the materials to their sources.**

banana fibre

forest

clay

sisal plant

sisal

swamp

wood


banana plant

a. banana fibre _____

b. clay _____

c. sisal _____

d. wood _____



35. Name any two schools that neighbour our school.

i) _____

ii) _____

b. Mention any two structures found at school.

i) _____

ii) _____

END



KINGS WAY PRIMARY SCHOOL

P. 3 RECESS REVISION 2020 - (SET FOUR)

ENGLISH

DURATION : 2 HOURS: 15 MINUTES

Name _____ Stream _____

SECTION A (50 MARKS)

1. Draw good pictures.

books	girl	house	sun

2. Arrange in alphabetical order.

a. clouds, apple, dog, fork

b. book, coffee, orange, guava

c. Gulu, Jinja, Lira, Mbarara.

3. Complete the similes.

a. as fat as a _____

b. as sweet as _____

c. as blind as a _____

4. Write the following in singular.

oxen _____

foxes _____

wives _____

5. Write the numbers in figures.

a. thirteen _____

b. sixth _____

6. **Choose the correct word from the brackets to complete the sentences.**
- I can _____ six teachers. (sea. see)
 - Run, the _____ is eating you crops. (got, goat)
 - Sarah will _____ the book (buy, by, bye)
 - She is ten _____ old. (ears, years)
7. **Write the abbreviations in full.**
- hasn't _____ Tr. _____
Sch. _____
8. **Use many some, any, much, who to fill the gaps.**
- Mukasa is the boy _____ lost his bag yesterday.
 - Is there _____ water in that cup?
 - How _____ sugar is in the bowl?
 - I have _____ money in the bank.
 - How _____ chairs are in the mainhall.
9. **Fill in the spaces with the correct form of the word given in the brackets,**
- My sister _____ her teeth every morning. (brush)
 - Sarah is _____ than Tom. (short)
 - Emmanuel _____ to church every Sunday. (go)
 - We shall _____ our exams in the morning. (do)
 - I use a pen for _____ (write)
10. **Write down the sounds made by these animals.**
- A dog _____
 - A lion _____
 - A pig _____
11. **Punctuate the sentences correctly.**
- her name is annet.

 - i live at mukono.

 - Tom goes to church on Sunday.

12. **Arrange these words to form a good sentences.**

a. have Elephants short tails.

b. animal A is wild hyena a

c. going where is he?

13. **Re-arrange as instructed in the brackets.**

a. I am going to the market now. (Re-write and end---everyday.)

b. Musa is tall. Sarah is very tall. (Join using -----than-----)

c. Tom is a teacher. Annet is a teacher. (Begin: Both-----)

d. Samuel didn't come to school. He was sick.

(Join using----because-----)

e. My father is poor. He paid my school fees in time.

(Join using-----but-----)

14. **Use a correct word to fill the gap.**

a. Musa has put _____ spoonful of sugar in the cup of tea.

b. _____ much money is needed at the clinic?

c. Aguti is suffering _____ malaria.

d. My _____ of English teaches us very well.

e. Bambala is shorter _____ viola.

Section B

15. **Fill in the words given below correctly to complete the story.**

(hospital, playing, home, use, accident)

One day, Musa was going back_____. He did not _____ the road safety rules. He moved along the road while _____, He got an _____ and he was quickly taken to Mulago_____.

16. **Study the table and answer the questions in full sentences.**

Name	Age
Mary	eight years
Paul	eleven years
Suzan	seven years
Dan	nine years
Tom	twelve years

a. How old is Paul?

b. Who is the oldest child?

c. How old is the youngest child?

d. How many children are shown on the table?

e. Who is nine year old?

17. **Match people with their work and write below.**

A doctor sells meat
A teacher grow crops and keeps animals
A tailor treats patients.
A butcher helps pupils to learn

A doctor _____
A teacher _____
A tailor _____
A butcher _____

18. **Make a five sentences from the table below.**

Farmers	grow	in the bush.
Wild animals	has	your Maths teacher?
I	am	a blue bag.
She	is	swimming in the lake.
Who	live	crops in the garden.

- a) _____
- b) _____
- c) _____
- d) _____
- e) _____

19. **Arrange the sentences and form the correct sentences.**

- a. He told him to go home and clean his ears.
- b. The doctor looked at his ears.
- c. Yesterday Dan's ears were hurting.
- d. His ears were dirty.
- e. He went to the hospital to see the doctor.

Correct order

- a. _____
- b. _____
- c. _____
- d. _____
- e. _____

20. **Write the plural forms of the following words.**

- a. puppy _____
- b. girl _____
- c. wife _____
- d. basket _____
- e. bench _____

21. **Make small the words from the big word.**

- a. word _____
- b. beating _____
- c. plate _____
- d. cupboard _____
- e. early _____

22. **Fill in the blank spaces with a suitable word.**

- a. A place where people go to learn is a _____
- b. A dog lives in a kennel but a pig lives in a _____
- c. Bird is to fly as fish is to _____.
- d. Cat is to kitten as man is to _____
- e. Sheep bleats as baby _____

23. **Fill in the correct preposition to complete the sentences.**

a.



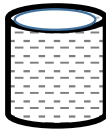
The ball is _____ the table.

b.



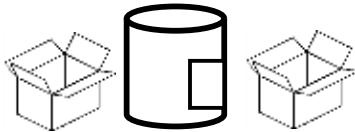
The bird is flying _____ the tree.

c.



The water is _____ the glass.

d.



The tin is _____ two boxes.

e.



The cup is _____ the chair.

24. **Read and draw good pictures.**

The girls are playing.	My mother is cooking food.
The man is driving a car.	There are six balls.
He is reading a story book.	

25. **Construct good sentences.**

a. cut : _____

b. cat: _____

c.  _____

END

d.  _____

e. playing : _____