



KINGS WAY PRIMARY SCHOOL

P. 3 RECESS REVISION 2020-(SET SIX)

LITERACY 1 A

TIME ALLOWED : 2 HOURS 30 MINUTES

Name: _____ Stream: _____

SECTION A

1. Name one component of air.

2. Give one use of mushrooms to people.

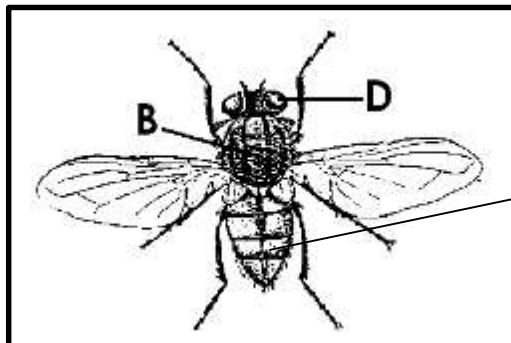
3. Name one item used for maintaining personal hygiene.

4. Name one domestic animal.

5. Why is loam soil good for crop growing?

6. Why does your mother boil water for drinking?

7. Name the part of an insect marked P.



8. Give one use of carbondioxide.

9. Mention any one item bees get from flowers.

10. Give one use of food in the body.

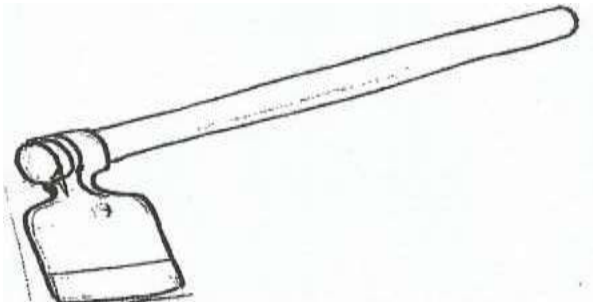
11. A calf is to cow as _____ is to a sheep.

12. Which part of a plant makes food?

13. Give one way of caring for our body.

14. From which direction does the sun rise?

15. How useful is the garden tool below to a farmer?



16. What is a habitat?

17. Identify any one characteristic of living things.

18. Name organism found in soil.

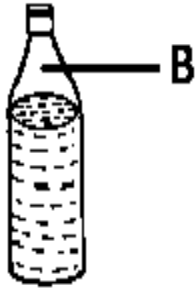
19. Give one use of a plants to man.

20. Give any one effect of floods to people.

21. How does a snake protect itself?

22. Name the vector that spreads trachoma.

23. Name the gas found in space marked K in the bottle.



B: _____

24. Why do animals move from one place to another?

25. Name any one member of a nuclear family.

26. Give any one use of water at school.

27. Why is breast milk the best food for babies?

28. How are shadows important to people?

29. Name the animal which lives in a burrow.

30. Mention any one common accident at school.

31. What is environment?

32. Write any one example of vegetable crop.

33. State any one way insects are useful to man.

34. Name any one man-made change in the environment.

35. Give the main natural source of water.

36. Name one insect that destroys our crops.

37. Name one item we get from swamps.

38. Name any one element of weather.

39. Which part of a plant holds it firmly into the soil?

40. How is wind useful to farmers?

SECTION B (60 Marks)

41. a) How do birds move?

b) Give any two examples of wild birds.

i) _____

ii) _____

c) Write one product got from wild birds.

42. a) What is first aid?

b) Name any one item found in a first aid box.

c) State two reasons for giving first aid.

i) _____

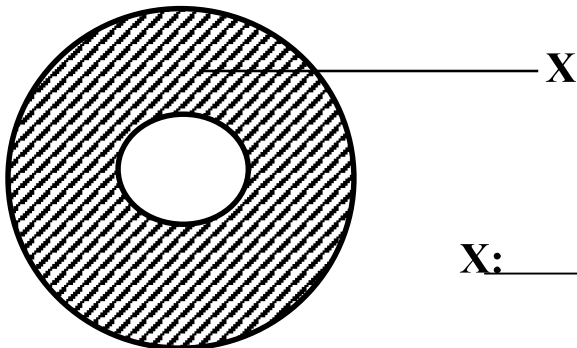
ii) _____

43. a) At what time of the day do shadows appear:

i) shortest? _____

ii) longest: _____

b) Name the part of the shadow shown below.



X: _____

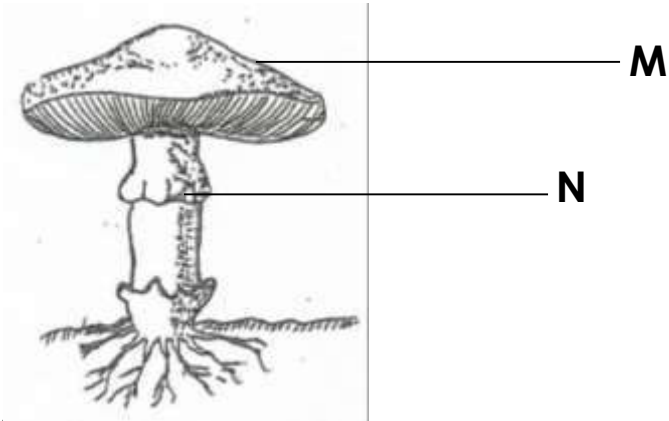
c) Give one use of shadows.

44. a) Name any two examples of fungi.

i) _____

ii) _____

b) **Name the parts of a mushroom shown below.**



i) M: _____

ii) N: _____

45. a) Identify any two childhood immunisable diseases.

i) _____

ii) _____

b) Give any one example of a vaccine.

c) Why are babies immunized?

46. a) How are germs harmful to our health?


b) Name any two types of germs.

i) _____

ii) _____

c) Give one way of avoiding germs.

47. **The diagram below shows layers of soil. Use it to answer the questions.**



a) What do we call the above arrangement of soil layers?

b) Name the layers marked:

i) B: _____

ii) C: _____

c) Which layer on the diagram supports crop growing?

48. a) Name the body part that enables us to hear when the headmaster talks.

b) Give any one way of keeping the body clean.

c) State any two items we use to clean the body.

i) _____

ii) _____

49. a) Why is a pen a non-living thing?

- b) Name any two groups of living things.
- i) _____
- ii) _____
- c) Give one characteristic of living things?

50. a) What do we call the removal of top soil from one place to another.

- b) Mention any two agents of soil erosion.
- i) _____
- ii) _____
- c) Give one way of controlling soil erosion.

51. **Match the list A to list B.**

A

- Bed bug
- Chameleon
- Caterpillar
- Millipede

B

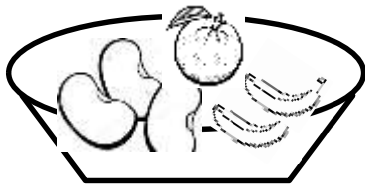
- curling
- uses prickly hair
- camouflaging
- produces bad smell

- i) Bed bug _____
- ii) Chameleon _____
- iii) Caterpillar _____
- iv) Millipede _____

52. a) Write down any one animal used for;
- i) transport. _____
 - ii) Protection: _____
- b) Name any two products got from a cow.
- i) _____
 - ii) _____

53. a) What are natural changes?
- _____
- b) Give any two examples of natural changes.
- i) _____
 - ii) _____
- c) Give one effect of natural change.
- _____

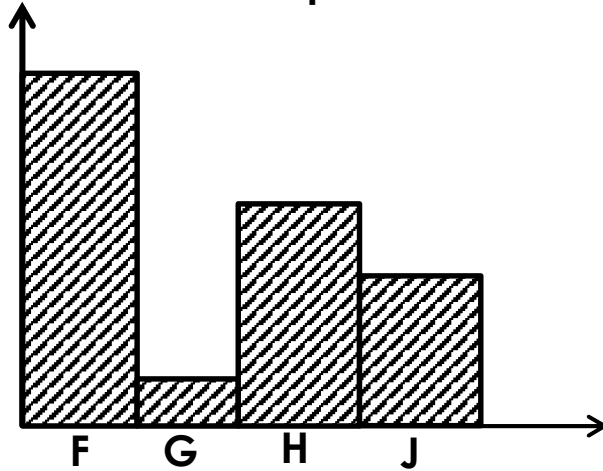
54. a) Give one reason why we eat food.
- _____
- b) **The diagram below is of a plate of food. Use it to answer questions that follow.**



- b) Name any one food stuff from this meal.
- _____
- c) Identify any two classes of food one would get from this meal

- i) _____
ii) _____

55. The graph below shows the different gases in the atmosphere. Use it to answer the questions.



a) Name the gases marked:

- i) G _____
ii) J _____

b) Which gas reduces during burning?

c) Give the percentage of the gas marked H.

WISH YOU SUCCESS

End



KINGS WAY PRIMARY SCHOOL

P. 3 RECESS REVISION 2020-(SET SIX)

LITERACY 1 B

DURATION : 2 HOURS 15 MINUTES

Name **Stream.....**

Read the following instructions carefully

This paper has two sections: **A** and **B**.

1. Answer **all** questions. **All** answers to both sections **A** and **B** must be written in the spaces provided.
2. **All** answers must be written using a Pencil
3. Unnecessary changes of work may lead to loss of marks.

SECTION A

1. State the directions of sun set?

2. Why do we need teachers in our community?

3. Name any one basic need of man

4. Name the physical feature that lies between two hills or mountains.

5. Mention any one important group of people in our community.

6. Mention any one group of people who need a compass to do their work.

7. Name the element of a map shown below.



8. Name any one important place in your division.

9. Write L.C in full.

10. How is a dog useful at home?

11. What are legends?

12. Write down any one cause of road accidents you know.

13. What do farmers do during rainy seasons?

14. On which hill in Kampala do we find the biggest hospital?

15. What is meant by the term vegetation?

16. Draw a map symbol of a plateau in the space provided below



17. Give any one reason why people go for recreation.

18. What is a homestead?

19. Name any one division in Kampala district.

20. State any one symbol of a school you know.

21. Give any one economic importance of forests to people.

22. Name one building material that can be got from hills.


23. State any one item people buy from markets.

24. Mention anyone tribe that belongs to the Nilo-Hamites in Uganda.

25. Which lake is a source of salt in Uganda?

26. What is a picture?

27. How is the item drawn below useful at home?



28. Which section in the police helps us to use roads safely?

29. Why is it difficult to read a map without a title?

30. How are maps important to tourists?

31. Which bird is found in the middle of the Uganda flag?

32. Name the road sign drawn below.



33. Name anyone good thing your school can get from the neighbour hood.

34. Which basic need is provided by a teacher in the community?

35. Name the major feature found on Kasubi hill.

For questions 36-40 answer Either for Christianity, OR for Islamic but not both questions in the same number.

36. Eitther: State the role of a priest in the church.

Or: State the role of a muazzin in the mosque.

37. Either: What should a good Christian do after sinning?

Or: What should a good Muslim do after sinning?

38. Either: Name any one commandment God gave Moses.

Or: Name any one pillar of Islam.

39. Either: Why did Jesus Christ die on the cross?

Or: Why was prophet Muhammad hated in Mecca?

40. Either: Why do Christians read the Bible?

Or: Why do Muslims read the Qu'ran?

Section B (60 Marks)

41. a) What are cash crops?

b) Name the products we get from the following crops.

i) sugarcane _____

ii) cotton _____

c) Why do farmers grow cash crops?

42. a) Which type of transport do children use when going to school?

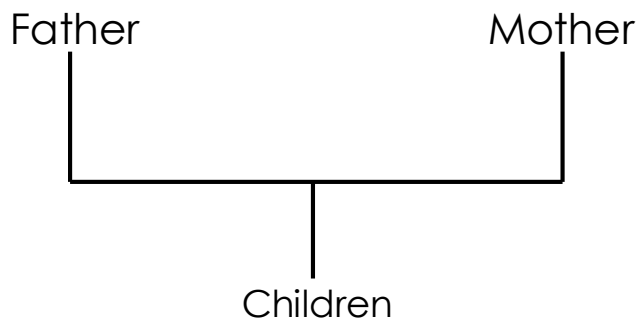
b) Under which type of transport are aeroplane used?

c) Write down any **two** means of water transport.

i) _____

ii) _____

43. Use the diagram drawn below to answer the questions.



a) Name the type of family shown in the diagram above.

b) Give any two roles of a father in the family.

i) _____

ii) _____

c) Mention any one importance of having such a family.

44. How are the following people important in our community?

a) police officers _____

b) prison officers _____


c) mid wives _____

d) teachers _____

45. a) What are map symbols?

b) What do the following symbols represent on a map?

i)  _____

ii)  _____

46. a) What is a market?

b) Mention any two things people buy from markets.

i) _____

ii) _____

c) Give any one reason why people go to markets.

47. a) What are crafts?

b) **Draw these crafts people make in our community.**

baskets	hats

c) State any one reason as to why people make crafts.

48. **Match these correctly.**

Key is used to measure distance between places on a map.

Title used to find direction of places on a map.

Compass direction interprets symbols used on a map.

Scale tells what the map is all about.

a. Key _____

b. Title _____

c. Compass direction _____

d. Scale _____

49. a) What is communication?

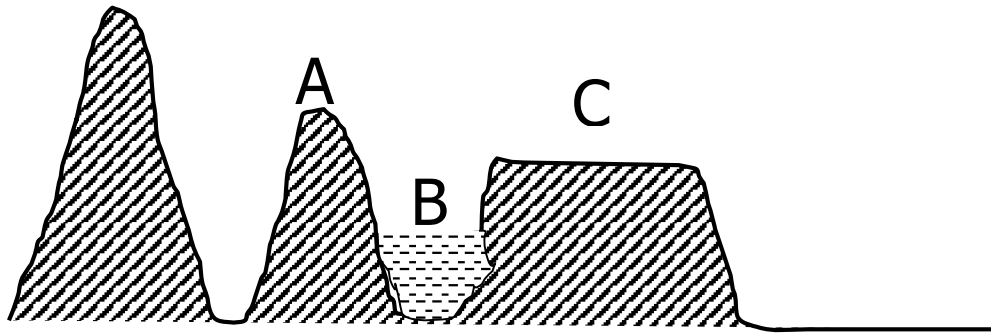
b) Name any two traditional means of communication.

i) _____

ii) _____

c) Give one reason why people communicate to each other.

50. a) Study the diagram given below and answer questions about it.



a) What are physical features?

b) Name the physical features marked with letters **A** and **B**.

i) **A** _____

ii) **B** _____

c) Give any one economic importance of living near feature marked **B**.

For questions 51 -55 answer Either for Christianity, Or for Islamic but not both in the same number

51. Either: a) Which prayer did Jesus teach His apostles?

b) Give any two requests we make from the above prayer.

i) _____

ii) _____

c) Give one reason why Moslem prays to God.

Or: a) Name any two daily prayers said by Moslems.

i) _____

ii) _____

b) Which special prayer is said by Moslem every Friday?

c) Give one reason as to why Moslem prays to God.

52. Either: a) Who is a leader?

b) Name any two leaders in Christianity

i) _____

ii) _____

c) Write down any one quality of a good leader.

Or: a) Who is a leader?

b) Name any two leaders in a mosque.

i) _____

ii) _____

c) Write down any one quality of a good leader.

53. Either a) Write down any two activities carried out in a church.

i) _____

ii) _____

b) Draw any two symbols of a church

--	--

- Or : a) Write down any two activities carried out in the mosque.
i) _____
ii) _____
b) Draw any two symbols of a mosque.

--	--

54. Either: a) What name is given to the fasting period for Christians.

b) Name any two things Christians do during fasting.

i) _____

ii) _____

Or: a) What name is given to the fasting period for Muslim?

b) Name any two things a Muslim must do during fasting.

i) _____

ii) _____

c) On which day do Muslims celebrate the end of their fasting period?

55. Either:

a) Who was the first man to be created by God?

b) Apart from man, name any other two things God created.

i) _____

ii) _____

c) On which day did God rest after creating world?

Or: a) Who was the first man to be created by Allah?

b) Apart from man, name any other two things Allah created.

c) On which day did God rest after creating the world?

WORK HARDER
END



KINGS WAY PRIMARY SCHOOL

P. 3 RECESS REVISION 2020-(SET SIX)

MATHEMATICS

TIME ALLOWED : 2 HOURS 30 MINUTES

Name: _____ Stream: _____

Section A

1. Work out $15 + 2 =$

2. Find the missing number:

$$\square - 3 = 15$$

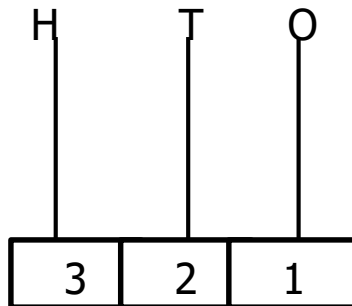
3. Divide $36 \div 2 =$

4. Draw a set symbol for an intersection set.

5. What number has been expanded below?
 $400 + 30 + 2$

6. Work out: $\frac{6}{9} - \frac{5}{9}$

7. Show 3 2 1 on an abacus below



8. Namakula bought a loaf of bread at shs 1,000. How much will she pay for 3 loaves of bread?

9. Write in figures: one hundred twenty four.

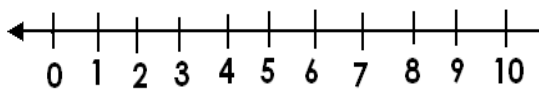
10. Write down the missing number:

1, 3, 5, __ 9, 11, ____.

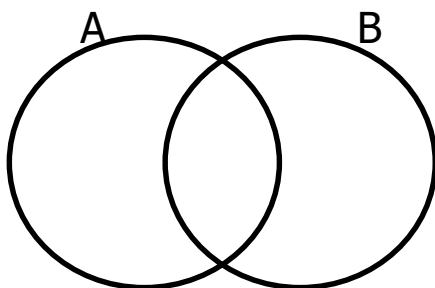
11. Draw a cylinder in the space provided below



12. Work out: $2 + 5$ on a numberline below.



13. Shade AUB

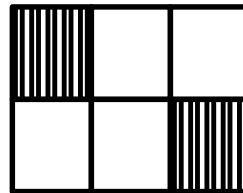


14. What is the first day of the week?

15. Take away/Subtract.

$$\begin{array}{r} 105 \\ - 23 \\ \hline \end{array}$$

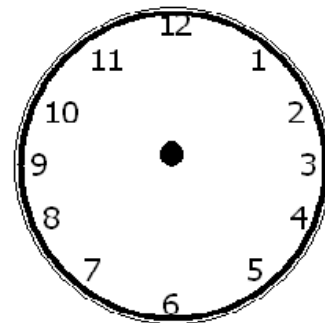
16. Name the shaded fraction below:



17. Evaluate:

$$5m + 3m + 4m = \underline{\hspace{2cm}}$$

18. Show 4 O'clock on the clock face below.

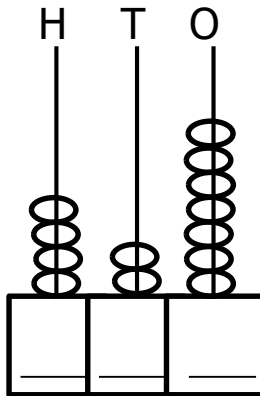


19. Work out : $6 \times 3 =$

20. In a shop, one sweet costs sh 200. How much will Lucy pay for 3 sweet?

Section B (60 marks)

21.



a) Fill in the abacus correctly.

b) Write down the number on the abacus in words.

22. Workout:

a) $14 \div 2 =$

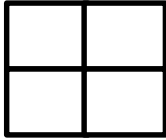
b)
$$\begin{array}{r} 32 \\ - 16 \\ \hline \end{array}$$

c)
$$\begin{array}{r} 41 \\ + 22 \\ \hline \end{array}$$

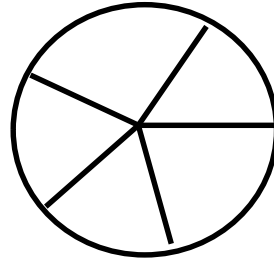
d) $12 \times 3 =$ _____

23. a) Shade the following fractions.

i) $\frac{1}{4}$



ii) $\frac{2}{5}$



b) Workout:

i) $\frac{3}{4} + \frac{1}{4}$

ii) $\frac{7}{9} - \frac{3}{9}$

24. Fill in the missing numbers


i) $2 + \square = 8$

iii) $\square \times 4 = 8$

ii) $8 - \square = 3$

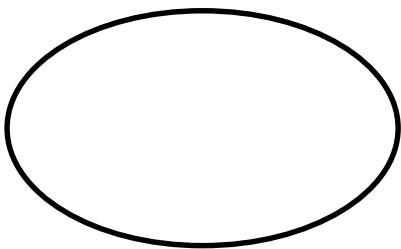
iv) $15 \div \square = 5$

25. Given the set below:

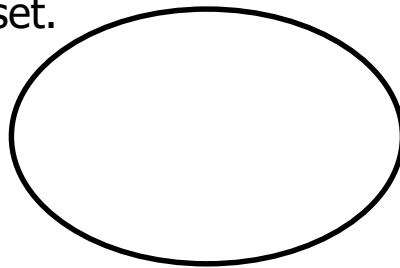


a) Form small sets from the above set.

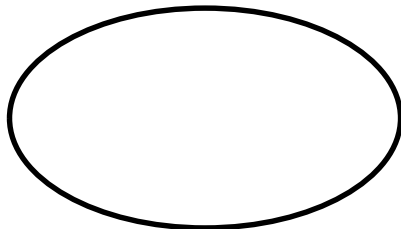
i)



ii)



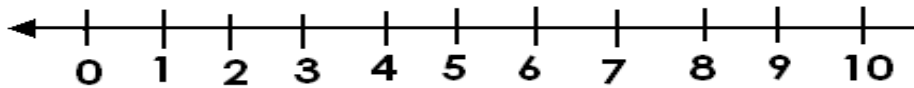
iii)



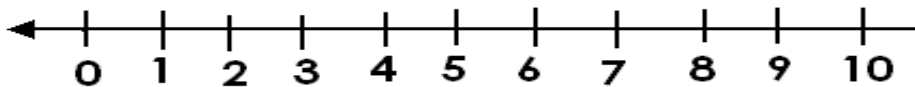
b) How many members has set A?

26. Workout using a numberline:

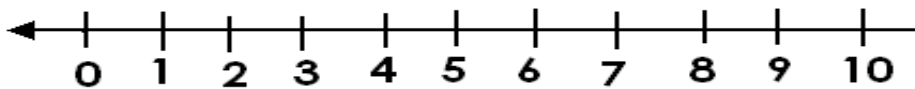
i) $3 \times 2 =$ _____



ii) $3 + 2 =$ _____



iii) $3 - 2 =$ _____



27. Complete the following table:

Pairs	1	2	5	3	6
Items	2	—	—	—	—

28. a) Peter is 16 years old. Sarah is 12 years old.

i) Who is older?

ii) Find their total age.

iii) How old will Sarah be in 3 years' time?

b) Workout: $16 - 12 = \underline{\hspace{2cm}}$

29. a) Draw the following shapes:

i) cylinder

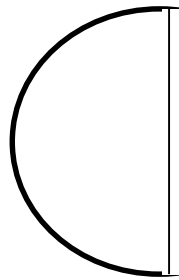
ii) Trapezium

b) Name the following shapes

i)



ii)



30. A fish costs sh. 1,000.

Bread costs sh. 2,000.

An egg costs sh. 100.

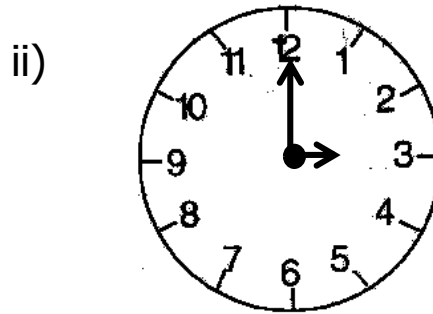
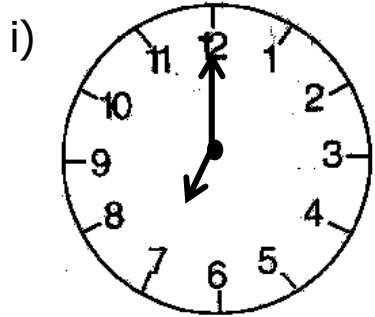
i) Which item is the cheapest?

ii) What is the cost of bread and fish?

iii) How many items are on the list?





31. a) How many days are in a week?

b) What time is shown on the clock faces?



c) What is the fourth month of the year?

32. **The pictograph below shows number of children who attended the party from different classes.**

P.1	
P.2	
P.3	
P.4	

a) How many P.2 children attended the party?

b) Which two classes had the same number of children?

c) Which class had the biggest number of children?

d) Subtract P.4 children from P.3 children.

END



KINGS WAY PRIMARY SCHOOL

P. 3 RECESS REVISION 2020-(SET SIX)

ENGLISH

DURATION: 2 HOURS 15 MINUTES

Name

Stream

Read the following instructions carefully

1. This paper is made up of two

Sections: A and B.

2. Section A has 50 questions (50 marks)

3. Section B has 5 questions (50 marks)

4. Attempt all questions. Answers to both sections must be written in the spaces provided.

5. All answers must be written in pencil.

6. Crossing out of answers will lead to loss of marks.

7. Any handwriting that cannot be

easily read may lead to loss of

marks

FOR EXAMINERS USE ONLY		
QN. NO.	MARK	SIGN
1-10		
11-20		
21-30		
31 - 40		
41 - 50		
51		
52		
53		
54		
55		
TOTAL		

SECTION A

Arrange the words correctly.

1. flwore _____
2. sehou _____
3. rodo _____
4. aydhoil _____

Use the correct form of words given in brackets to complete the sentences.

5. The donkey is _____ along the road. (walk)
6. Our mother bought three woollen _____. (dress)
7. John is the _____ boy in our class. (tall)
8. The teacher entered the classroom _____.
(quiet)
9. Sheila is a big girl but very _____. (child)
10. Mukama is cleaning the sty by _____. (she)
11. _____ flowers are very beautiful. (this)
12. The boys _____ the verandah very
well. (mop)
13. _____ sisters are playing with new dolls. (they)

Write a correct sentence using the given words

14. bone: _____
15. born: _____

Use article "a", "an" or "the" to complete the sentences.

16. My mother is _____ teacher.
17. _____ sun is a natural source of light.
18. Mukisa has _____ umbrella.
19. _____ ostrich is a very fast bird.

Fill in the gaps with a correct word or group of words.

20. My aunt is too fat _____ run.
21. There isn't _____ juice in the jug.
22. _____ the dog and the cat love milk.

Complete the analogies correctly.

23. Cow is to beef as pig is to _____.
24. Goose is to gosling as duck is to _____.

Arrange in ABC order.

25. step, stop, stand, stick

- _____
26. zebra, tiger, leopard, elephant, monkey.

Write the abbreviation in full.

27. Dr. _____
28. don't _____
29. P.T.O _____

Re-write the following sentences giving one word for the underlined group of words

30. There are two young cows in the kraal.
- _____
31. Mother gave birth to two children at the same time.
- _____
32. We shall go to Jinja in the fourth month of the year.

For questions 33 -35, rewrite the following sentences giving the plural of the underlined word.

33. Our dog has a puppy.
- _____
34. The sick child was rushed to hospital.
- _____
35. I met a man with a yellowish tooth.

In questions 36-38, re-write the sentences giving the opposites of the underlined words.

36. Mary's friend is very tall.
- _____
37. This lady is as ugly as sin.
- _____
38. We are going to sit on the bench.
- _____

SUB-SECTION II

Re-write as instructed in the brackets

39. I like fish. I like meat. (Join the sentences using -----and-----)

40. Sarah wants to play. Joan wants to sleep.
Re-write using -----but-----)

41. Titus is bright. Samuel is brighter.
(Re-write using-----than -----)

42. This is the man. He got an accident yesterday.
(Join using -----who-----)

43. She has not worked today. She is sick.
(Use:-----because -----)

44. Our home has a small compound.
(Re-write beginning: My-----)

45. Nakato likes matooke more than posho.
(Use: -----prefers-----to-----)

46. He is as proud as _____.(Complete the simile)

47. I saw a snake. I was going to school. (Begin: When-----)

48. The teachers are going to school. The pupils are going to school.(Begin: Both-----)

49. This is my mango.(Re-write the sentence in plural form)

50. I am ten years old.(Form a question for the given answer)

Section B

51. **Read the letter and answer the questions about it in full sentences.**

St. Agnes Girls' School,
P.O Box 210,
KAMPALA.

2nd April, 2018.

Hullo Joyce,
How are you nowadays? Let me hope that you are okay.

I have written this letter to invite you to my brother's birthday party. He is going to celebrate his ninth birthday. It will take place on Sunday 28th April, 2018 starting with prayers from 5:00pm to 6:00pm. Many visitors have been invited.

I will be happy to see you at our home.

Your friend,
Nakabuye Jane.

Questions

1. Who wrote this letter?

2. Whose birthday is it?

3. How old is Jane's brother?

4. To whom was the letter written?

5. In which school is Nakabuye Jane?

6. What will the party start with?

7. When will the party be held?

8. At what time will the party begin?

9. When did Nakabuye Jane write the letter?

10. Which birth day was she going to celebrate?

52. **Read the story below and answer questions about it in full sentences.**

Mr. Mutaba lives in Magale village. He grows yams, sugarcanes and rice. Mr. Mutaba grows his crops in a swamp which is down in the valley. It is called Lubango swamp.

The soil in the swamp is grey. He harvests different crops during the dry season. He sells some in order to get money for his children's school fees. He also keeps some in the store for food. His wife plants flowers in tins. He likes flowers very much.

Questions

a) How many crops does Mr. Mutaba grow?

b) When does he harvest the crops?

c) What is found in the valley?

d) Why does Mr. Mutaba sell some crops?

e) Where does Mr. Mutaba keep his crops?

f) Where are the flowers planted?

g) Does Mr. Mutaba plant flowers?

h) Where does Mr. Mutaba live?

i) Write a suitable title to this story?

53. Complete the table below.

sing	singing	_____
write	_____	wrote
dig	_____	dug
do	_____	_____
_____	coming	came
give	_____	gave
_____	_____	_____
look	_____	looked

54. A) Arrange the given sentences to form a good story.

- a) After digging for some time, he goes back home.
- b) He wakes up early in the morning.
- c) Mr. Matovu is a farmer.
- d) He gets his tools and goes to the garden.
- e) When he reaches the garden, he starts digging.

Correct order

a) _____

b) _____

c) _____

d) _____

e) _____

B) Match the following correctly

A

goat
hen
sheep
owl
cow

B

lamb
calf
owlet
kid
chick

55. **Use the words given to fill the gaps in the passage.**

tired, hungry, tour, mother,
daughter, museum, strong,
eats, happy, kept.

One day, my aunt went to _____ Kampala.

She came with her _____ Rose. They came to visit
the Uganda _____ where things of long ago
are _____. Rose was so _____ to
hear that she was going to move with her _____.

They used a bus from the village to Kampala. By the time they
reached Kampala, Rose was so _____ and
_____. She requested her mother to buy
for her water and some _____. After
eating, she felt so good and _____.

**End
SUCCESS**



KINGS WAY PRIMARY SCHOOL

P. 3 RECESS REVISION 2020-(SET SIX)

RELIGIOUS EDUCATION

DURATION : 2 HOURS

NameStream.....

Read the following instructions carefully

1. The paper is made up of two sections **A** and **B** with two parts (Christianity and Islamic)
2. Section **A** has **20** questions (**40 marks**)
3. Section **B** has 15 questions (**60 marks**)
4. Answer Either **Christianity** or **Islamic** questions but not **BOTH** in a question.
5. All answers must be written in the spaces provided.

SECTION A

1. Either: Name any one book in the in the New Testament.

Or: Name anyone book in Islam.

2. Either: In which town was Jesus born?

Or: In which town was Prophet Mohammed born?

3. Either: How long did God take to create the universe?

Or: How long did Allah take to create the Universe?

4. Either: Name the Holy book for Christians.

Or: Name the book that was received by Prophet Dauda.

5. Either: Why was baby Jesus taken to Egypt by the parents?

Or: Why did Prophet Muhammad go to Medina.

6. Either: Name the place where God placed Adam after creating him.

Or: Name the place where Allah placed Adam after creating him.

7. Either: Who leads all Catholics in the world?

Or: Who leads all Moslems in a country?

8. Either: How can a P.3 child show love to fellow children in a class.

Or: How can a P.3 child show love to fellow children in a class?

9. Either: What name is given to the first book in the bible?

Or: Name the holy book for Muslims.

10. Either: Who was the mother of Jesus Christ?

Or: Who was the mother of Prophet Muhammad?

11. Either: How was Jesus related to John the Baptist?

Or: How was Halima related to Prophet Muhammad?

12. Either: Name the prayer Jesus taught His apostles.

Or: When do Moslem have Juma prayers.

13. Either: Name the son of Jacob who was sold in Egypt.

Or: Why is Prophet Ayub remembered in Islam?

14. Either: Who was the wife of Abraham?

Or: Name the wife of Ibrahim

15. Either: Who was ordered by God to build the Ark?

Or: Which Prophet was ordered by Allah to build the Ark.

16. Either: Name any one example of sin children do at school.

Or: Name any example of sin children do at school.

17. Either: Name the Holy place of worship for Christians.

Or: Name the Holy place of prayers for Moslem.

18. Either: Write CRE in full.

Or Write IRE in full.

19. Both: What is prayer?

20. Either: Name any one leader in the Bible.

Or: Who was the mother of Prophet Mohammed?

SECTION B

21. Either: **Match the following correctly.**

John	Baptized Jesus
John the Baptist	Most loved Apostles
Joseph	Fisher man
Simon Peter	Earthly father of Jesus Christ.

- i) John _____
- ii) John the Baptist _____
- iii) Joseph _____
- iv) Simon Peter _____

Or: **Match the following correctly.**

Aminah	built the Kaabah
Abdallah	first prophet of Allah
Ibrahim	mother of Prophet Muhammad
Adam	father of Prophet Muhammad.

- i) Aminah _____
- ii) Abdallah _____
- iii) Ibrahim _____
- iii) Adam _____

22. Either: a) Why do Christians kneel while praying?

b) Write any two requests made in the Lord 's Prayer.

- i) _____
- ii) _____

c) Mention any one reason why Christians pray to God.

Or: a) Name anyone daily prayer said by Moslems.

b) In which way does a Moslem prepare for prayers?

c) Give two reasons why Moslems pray to Allah.

i) _____

ii) _____

23. Either: a) Name any two Gospel books in the Bible.

i) _____

ii) _____

b) Mention the two parts of a Bible.

i) _____

ii) _____

Or: a) Name any two Holy books in Islam.

i) _____

ii) _____

b) Mention any two prophets who received the holy books in Islam.

i) _____

ii) _____

24. Either: a) Who is a leader?

b) State any three qualities of a good religious leader.

i) _____

ii) _____

iii) _____

Or: a) Who is a leader?

b) Mention any three qualities of a good religious leader.

i) _____

ii) _____

iii) _____

25. Either: a) Write down any two animals created by God..

i) _____

ii) _____

b) Give two reasons why God created the above animals.

i) _____

ii) _____

Or: a) Write down any two animals created by Allah.

i) _____

ii) _____

b) Give two reasons why Allah created the above animals.

i) _____

ii) _____

26. Either: **Match list A to list B correctly.**

Bethlehem where Jesus grew up

Jerusalem where Jesus was crucified

Nazareth where Jesus was born

Golgotha where Jesus was buried

i) Bethlehem _____

ii) Jerusalem _____

iii) Nazareth _____

iv) Golgotha _____

Or: **Match list A to list correctly**

- Mecca where Prophet Muhammad received the Qu'ran.
- Medina where Prophet Muhammad was born.
- Mt. Hira was built by Ibrahim.
- Kabaah where prophet Muhammad was buried.

- i) Mecca _____
- ii) Median _____
- iii) Mt. Hira _____
- iv) Kabaah _____

27. Either: a) What is sin?

b) State any two results of sin

- i) _____
- ii) _____

c) What should a Christian do after sinning?

Or: a) What is sin?

b) State any one result of sin.

- i) _____
- ii) _____

c) What should a Muslim do after sinning?

28. Either: a) Who heads a family?

b) State any responsibility of the following people at home.

- i) Father _____
- ii) Mother _____

iii) Child _____

Or: a) Who heads a family?

b) Name any responsibility of the following people at homes.

i) Child _____

ii) Mother _____

iii) Father _____

29. Either: a) Who created heaven and Earth?

b) Mention any two sources of light that God created.

i) _____

ii) _____

c) Give any one way of caring for God's creation.

Or: a) Who created heaven and earth in Islam.

b) Name any two sources of light created by Allah.

i) _____

ii) _____

c) State one way of caring for Allah's creation.

30. Either: a) How important are the following holy days to Christians.

i) Palm Sunday: _____

ii) Holy Thursday: _____

iii) Good Friday: _____

iv) Easter Sunday: _____

Or: Which prophet received the following books.

- i) Zabur: _____
- ii) Injir: _____
- iii) Tauret: _____
- iv) Qu'ran: _____

31. Either: a) What are customs?

- _____
- b) Mention any two customs you know.
 - i) _____
 - ii) _____
 - c) How is baptism important in Christianity?

Or: a) What are customs?

- _____
- b) Mention any two customs you know.
 - i) _____
 - ii) _____
 - c) What is the importance of circumcision to a male Muslim?

32. Either: a) Who was the wife of Abraham

- _____
- b) State any two ways Abraham showed his faith to God.
 - i) _____
 - ii) _____
 - c) What does the name Isaac mean?

Or: a) Name any one son of Prophet Ibrahim.

b) Mention any two ways how Prophet Ibrahim showed his faith in Allah.

i) _____

ii) _____

c) State any one lesson we learn from the life of Prophet Ibrahim.

33. Either: Mention any four examples of Christians leaders in the church.

i) _____

ii) _____

iii) _____

iv) _____

Or: Mention any four examples of Muslims leaders in our community.

i) _____

ii) _____

iii) _____

iv) _____

34. Either: Mention any four qualities of a good Christian child.

i) _____

ii) _____

iii) _____

iv) _____

Or: Mention any four qualities of a good Muslim child.

i) _____

ii) _____

iii) _____

iv) _____

35. Either: a) Mention any two body parts that Christians use to praise God.

i) _____

ii) _____

b) Give two ways Christians praise the Lord.

i) _____

ii) _____

Or: Mention four body parts that Muslims wash before prayers.

i) _____

ii) _____

iii) _____

iv) _____

THE END

GOOD LUCK