



KINGS WAY PRIMARY SCHOOL

P. 3 RECESS REVISION 2020-(SET FIVE)

ENGLISH

DURATION: 2 HOURS 15 MINUTES

Name

Stream

Read the following instructions carefully

1. This paper is made up of two Sections:

A and B.

2. Section A has 50 questions (50 marks)

3. Section B has 5 questions (50 marks)

4. Attempt all questions. Answers to both sections must be written in the spaces provided.

5. All answers must be written in pencil.

6. Crossing out of answers will lead to loss of marks.

7. Any handwriting that cannot be easily read may lead to loss of marks.

FOR EXAMINERS USE ONLY

QN. NO.	MARK	SIGN
1-10		
11-20		
21-30		
31 - 40		
41 - 50		
51		
52		
53		
54		
55		
TOTAL		

SECTION A

Use the words in brackets correctly

1. Sugar is _____ than bananas. (sweet)
2. Dad bought three healthy _____ yesterday.
(puppy)
3. Two boys sat on a _____ bench and they fell
down. (break)
4. I cannot write in this book because it is not
_____. (me)
5. A train moves very _____. (slow)
6. Our baby _____ every morning. (cry)
7. A knife is quite _____ in homes. (use)
8. Both Karen and Kate are good at _____. (swim)
9. John Kato is a _____ in that school. (teach)
10. If the children make _____, the teacher will
beat them. (noisy)

Fill in the blank spaces with a suitable word.

11. That is the girl _____ mother is in Hospital.
12. This hen usually _____ fifteen eggs.
13. The man is _____ fat to ride a bicycle.
14. _____ old are you?
15. I prefer mangoes _____ oranges.

Give the opposite of the underlined words

16. The boy was bitten by a snake.

17. The king forgot to wear his crown.

18. That flower is very ugly.

Re-write the sentences using one word for the underlined group of words.

19. The sow gave birth to two young pigs.

20. Benon is cleaning the house of cows.

21. Mum was in America for seven days.

Write the plural forms of the underlined words

22. He was allowed to eat his brother's mango.

23. The sick boy found a fly in his tea.

24. His wife is very sick.

Arrange in ABC order.

25. o,r, a,n,g,e

26. give, take, bring, carry

Write the abbreviation in full.

27. Dr. _____

28. o'clock _____

Re-arrange the given words to form a correct sentence.

29. does work Where your father?

30. old I eight am years.

SUB-SECTION II

Re-write as instructed in the brackets

31. John is a very kind man. (Begin: What -----)

32. This is the school. I met Sarah here.

(Join using: -----where-----)

33. Terry has a bag. Terry has a pair of shoes.

(Join using: -----and -----)

34. My name is Santa. (Form a question to this response)

35. Is this a dog? Is this a fox? (Re-write:-----or-----)

36. One by one -----(complete the proverb)

37. My dress is green. Grass is green.
(Join using-----as-----as-----)

38. anita went to jinja on Monday.(Punctuate the sentence
correctly)

39. Joseph is my friend. Musa is my friend.
(Begin: Both-----)

40. Cindy likes singing. She hates dancing.
(Join using:-----but-----)

41. This is a nice book.(Begin: These-----)

42. I am old. I can ride a bicycle.(Re-write:-----enough-----)

43. Mr brother has not come to school. He is sick.
(Join using: -----because -----)

44. I like cows more than a pigs. (Re-write: ----prefer----to-----)

45. Their son is sick. He comes to school every day.
(Begin: Although-----)

46. Robinah is tall girl. (Re-write in negative)

47. That car belongs to Kagolo. (Re-write using-----owner-----)

48. Tereza lives in Namataba village.
(Use a pronoun for the underlined noun)

49. Kapere lent Onapa some money.
(Begin: Onapa borrowed-----)

50. There isn't any milk in the bottle. (Re-write: -----some-----)

Section B

51. **Read the story and answer the questions after it in full sentences.**

AMOOTI'S FARM

Amooti has a farm. There are different types of animals on Amooti's farm. When Primary 3 pupils went to visit Amoot's farm, they saw many animals. The animals in the farm are cows, sheep, goats and rabbits. Some animals went in front of the farm and others stayed behind the farm house.

Amooti has more goats than other animal on his farm. He said that there are fifteen goats, five sheep, ten cows, and five rabbits. Sometimes Amooti sells these animals. He then pays school fees for his children.

Questions

1.What is the story about?

2.Which class visited Amooti's farm?

3.What did they see at Amooti's farm?

4.How many goats does Amooti's have?

5.Why does Amooti sell some animals?

6.Mention any two animals in the farm.

i) _____

ii) _____

7.Whose farm is talked about in the story


8.Write the plural forms of:

i) sheep:_____

ii) rabbits_____

9. Write the title of the passage.

52. **Study the calendar and answer questions after it in full sentences.**

SUN	MON	TUE	WED	THUR	FRID	SAT
				1	2	3
4	5	6	7	8	9	10
11	12	13	 14	15	16	17
18	19	20	21	22	23	24
25	26	27	28			



Ash Wednesday

Questions

1. Which month is shown on the calendar?

2. On which day did the month begin?

3. How many days does the month have?

4. Which month comes before this one?

5. On which day do most Christians go to church?

6. Do children go to school on Sunday?

7. How many complete weeks are shown on the calendar?

8. Write in full:

i) Feb: _____

ii) Tue: _____

9. Why is 14th February shaded on the calendar?

53. A Arrange these sentences to form a good story. .

- a) She lived in Kasasa with her parents.
- b) Once upon a time, there lived a girl called Jane.
- c) They always bought good things for her.
- d) Jane was eight years old.
- e) Her parents loved her very much.

a) _____

b) _____

c) _____

d) _____

e) _____

B) Match the following correctly

- | | |
|----------|----------|
| A | B |
| Sheep | calf |
| Monkey | owlet |
| Owl | puppy |
| Cow | lamb |
| Dog | baby |

54. A) Make correct sentence from the table.

I		washes my uniform.
We	Sometimes	go to Kampala.
You	always	sweeps the compound.
She	often	helps the blind.
He	never	play football with boys.

i) _____

ii) _____

iii) _____

iv) _____

v) _____

B) Use the given words to complete the story.

People in our sub-county do a lot of work. Most of the people are _____. They grow crops like coffee, _____ and bananas. Some of them are teachers. They teach pupils at _____. There are also _____ who preach the word of God. We also have _____ where Imams preach from.

maize, school, priests, farmers, mosques

55. Read the poem and answer questions after it in full sentences.

Two flies up on the mirror
One on the **left**, one on the right
Now they are flying to the window
To the kitchen, but not to the fire.

Something is smelly around here.
Flies everywhere, dirt everywhere,
Near the dustbin, near the toilet.
Not near the fire and not in the cupboard.

Questions:

1. How many flies are on the mirror?

2. Name two place where the flies are flying to.
i) _____
ii) _____
3. Give the opposite of the underlined word in the poem.
left: _____
4. Why do you think flies don't fly to the fire?

5. Write two small words from "cupboard".
i) _____
ii) _____

End



KINGS WAY PRIMARY SCHOOL

P. 3 RECESS REVISION 2020-(SET FIVE)

MATHEMATICS

TIME ALLOWED : 2 HOURS 30 MINUTES

Name: _____ Stream: _____

Section A

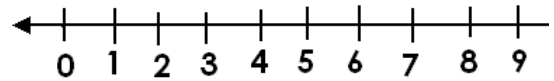
1. Workout: $4 + 7 + 1 =$

2. Name this set: { a, e, i, o, u }

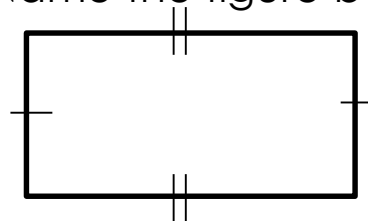
3. What is the place value of 3 in 231?

4. Work out: $\frac{2}{7} + \frac{1}{7} =$ _____

5. Use a number line to work out: $3 + 2 =$



6. Name the figure below.



7. The cost of fish is sh 200. Find the cost of 3 fish.

8. Find the missing number in the box.

$$\square + 5 = 12$$

9.

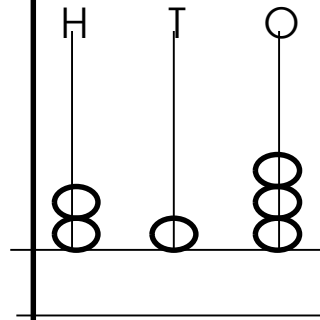


What time is shown on the clock face?

10. Share 16 eggs between 2 children.

11. Fill in the missing numbers:
0, 2, 4, ___ 8, ___.

12. What number is shown on the abacus?



13. Write 362 in expanded form.

14. Write 49 in words.

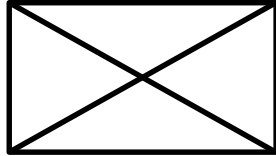
15. Take away:

$$\begin{array}{r} 27 \\ - 13 \\ \hline \end{array}$$

16. Work out :
 $15\text{cm} + 7\text{cm} = \underline{\hspace{2cm}}\text{m}$

17. There are 7 days in a week. How many days are in 2 weeks?

18. Shade a quarter of the figure





19. Work out

Weeks	Days
4	3
+ 2	4
<hr/>	
<hr/>	

20. Multiply: $\begin{array}{r} 12 \\ \times 3 \\ \hline \end{array}$

Section B (60 marks)

21. Name the following set symbols

Symbol	Name
	
	

22. Fill in the missing numbers in the boxes below

i) $\square \times 2 = 6$

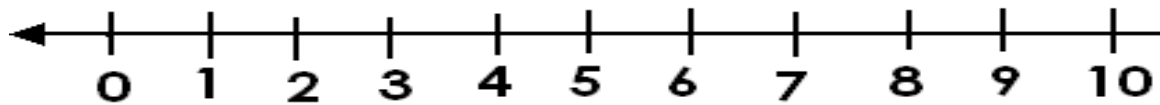
ii) $\square + 7 = 10$

iii) $\square - 3 = 8$

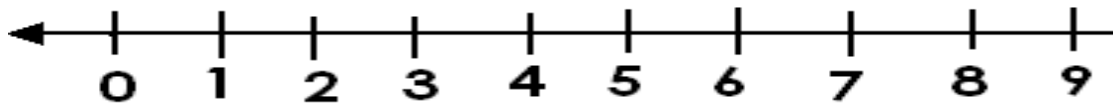
iv) $20 \div \square = 4$

23. Work out the following using a number line.

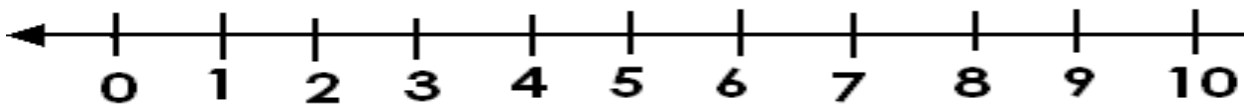
$4 + 3 =$



$7 - 3 =$



$2 \times 3 =$

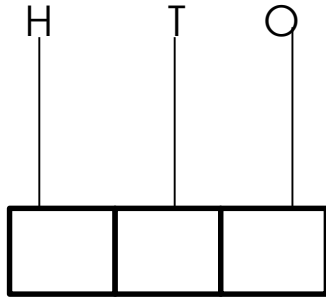


24. Given the number 275.

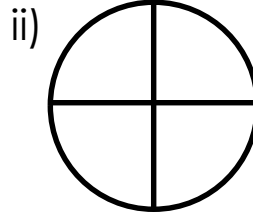
a) What is the place value of 7.

b) Work out the value of 2 in the number above.

c) Show the number above on the abacus below.



25. a) Write down the shaded fractions.



b) Work out the following

i) $\frac{2}{5} + \frac{1}{5} =$

ii) $\frac{5}{9} - \frac{2}{9} =$

26. The graph below shows the number of eggs collected each day from the school farm.

Monday	
Tuesday	
Wednesday	
Thursday	
Friday	
Saturday	

a) How many eggs were collected on Thursday?

b) Find the number of eggs collected on Monday and Friday?

c) On which day were 4 eggs collected?

27. Use $>$, $<$, or $=$ to complete the statements below.

a) 3×2 _____ $3 + 2$

b) 1 week _____ 7 days

c) 49 _____ 94

d) 1 month _____ 1 week

28. Work out:

$$\begin{array}{r} 2 \quad 3 \\ +1 \quad 4 \\ \hline \\ \hline \end{array}$$

$$\begin{array}{r} 4 \quad 6 \\ -2 \quad 3 \\ \hline \\ \hline \end{array}$$

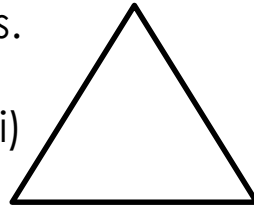
$$\begin{array}{r} 4 \quad 2 \\ \times 2 \\ \hline \\ \hline \end{array}$$

d) $24 \div 6 =$



29. a) Name the following shapes.



ii)



b) Draw the following shapes

	
Square	Circle

30. a) Workout the lengths in metres:

$$\begin{array}{r} 2 \text{ 3m} \\ + 6 \text{ 2m} \\ \hline \\ \hline \end{array}$$

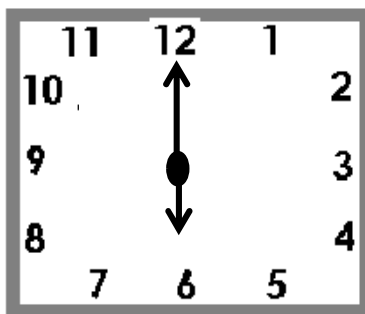
$$\begin{array}{r} 7 \text{ 4m} \\ + 1 \text{ 8m} \\ \hline \\ \hline \end{array}$$

$$\begin{array}{r} 6 \text{ 1m} \\ - 6 \text{ m} \\ \hline \\ \hline \end{array}$$

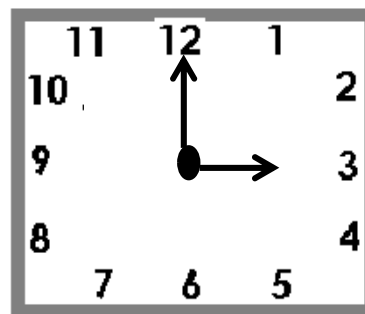
b) Hanna is 25 Kg and Moses is 32 kg. Who is heavier?

31. a) What time is shown on the clock face below

i)



ii)




b) Show the time on the clock face below.

i) 10 o'clock



ii) A half past 8 o'clock



32. Study the shopping list below

A cup costs sh 200.

A pen costs sh 100.

A book costs sh 500.

a) How many items are on the list?

b) Work out the cost of a pen and a book.

c) How much will Jane pay for all items?

d) What is the cheapest item?

End



KINGS WAY PRIMARY SCHOOL

P. 3 RECESS REVISION 2020-(SET FIVE)

LITERACY 1B

DURATION : 2 HOURS 15 MINUTES

Name**Stream.....**

Read the following instructions carefully

This paper has two sections: **A** and **B**.

1. Answer **all** questions. **All** answers to both sections **A** and **B** must be written in the spaces provided.
2. **All** answers must be written using a Pencil
3. Unnecessary changes of work may lead to loss of marks.

SECTION A

1. In which municipality is your school found?

2. Mention anyone thing that can make a pupil of Kings Way Primary School to be easily identified.

3. In which way is your school important to the community.

4. What name is given to a person who heads a division.

5. Why do we need doctors in our community?


6. Draw a map of a tree in the space provided below.



7. What is a community?

8. How do you call the mother of your mother?

9. Name the map symbol drawn below



10. Of what use is a library in your school?

11. Name any one play material that can be made from banana fibres.

12. Mention any one group of people who work in your school.

13. Name any one need of a school.

14. What is transport?

15. State any one difference between maps and pictures.

16. Apart from a key, name any other element of a good map.

17. Which school symbol directs people to your school?

18. Name any one material used to build a permanent house.

19. Why do we need rules and regulations in our school?

20. What name is given to a person who flies an aeroplane?

21. What is communication?

22. Name the means of transport drawn below.



23. In which district is your school found?

24. What is a map?

25. Give anyone example of child abuse.

26. In which season do farmers harvest their crops?

27. What is child abuse?

28. Why do children need to have holidays?

29. Name any one dangerous thing on the road

30. How is a mother important at home?

31. Name any one recreational activity you know.

32. State any one way we can care for our school structures.

33. Why do we need matrons in our school?

34. Mention anyone group of people who abuse children's rights.

35. Name any one place where people can go for recreational activity.

For questions 36-40 answer Either for Christianity, OR for Islamic but not both questions in the same number.

36. Either: Who was the mother of Jesus?

Or: Who was the mother of Prophet Muhammad?

37. Either: Name the holy book for Christians.

Or: Name the holy book for Muslims.

38. Either: Why is Bethlehem an important place for Christians?

Or: Why is Mecca an important place for Moslem?

39. Either: How many days do Christians fast?

Or: How many days do Muslims fast?

40. Either: Write CRE in full.

Or: Write IRE in full.

Section B (60 Marks)

41. a) What is environment?

b) Write down any **three** components of the environment.

i) _____

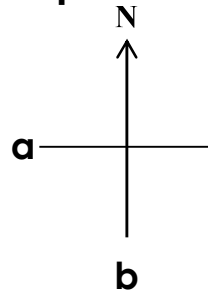
ii) _____

iii) _____

42. a) What are domestic animals?

46. a) What is a compass?

b) Name the points of a compass marked below.



a _____

b _____

c) Mention one group of people who need the above instrument to do their work.

47. a) What are basic needs?

b) Name the basic needs provided by these groups of people in our community.

i) farmers _____

ii) builders _____

iii) police _____

48. a) What is weather?

b) Draw any three items people can use during the rainy weather.

--	--	--

49. a) What are children's rights?

b) Give any three examples of children's rights

i) _____

ii) _____

iii) _____

50. Draw the maps and picture for the objects given below.

object	picture	map
cup		
table		

For questions 51 -55 answer Either for Christianity, Or for Islamic but not both in the same number

51. Either: a) What are customs?

b) Write down any three Christian customs you know.

i) _____

ii) _____

iii) _____

Or: a) What are customs?

b) Write down any three Islamic customs you know.

i) _____

ii) _____

iii) _____

52. Either: a) What is a prophet?

b) Name any two Christian prophets you know.

i) _____

ii) _____

c) Which prophet wrote the book of Torah/ the books of law.

Or: a) What is a prophet?

b) Name any two Moslem prophets you know.

i) _____

ii) _____

c) Which prophet wrote the book of Tauret?

53. Either a) What is prayer?

b) On which day do Christians go for general prayers?

c) Give any **two** reasons why Christians pray to God.

i) _____

ii) _____

Or : a) What is prayer?

b) On which day do Muslims go for general prayers?

c) Give any **two** reasons why Muslims pray to Allah.

i) _____

ii) _____

54. Either: a) Who was the earthly father of Jesus?

b) Name the place where:

i) Jesus was born:_____

ii) Jesus grew from:_____

c) On which day do Christians celebrate the birth of Jesus?

Or: a) Who was the father of Prophet Muhammad?

b) Name the place where:

i) Muhammad was born: _____

ii) Muhammad was buried: _____

c) Why do Muslims celebrate iddi – el- fitri?

55. **Match these correctly.**

Moses

rock

Deborah

peace

Irene

pulled out of water

Peter

bee.

a) Moses

b) Deborah

c) Irene

d) Peter

Or: Match these correctly

Imam

A woman who visited Mecca

Muazzin

A man who visited mecca

Hajji

leads prayers in the mosque

Hajjat

calls moslem for prayers

a. Imam

b. Muazzin

c. Hajji

d. Hajjat

END



KINGS WAY PRIMARY SCHOOL

P. 3 RECESS REVISION 2020-(SET FIVE)

LITERACY 1A

TIME ALLOWED : 2 HOURS 30 MINUTES

Name: _____ Stream: _____

SECTION A

1. Name any one sense organ.

2. Why a book is called a non-living thing?

3. What is the use of a rubbish pit in a home?


4. Give one example of an aquatic animal.

5. Name the clouds that give us rain.

6. What is soil erosion?

7. From which direction does the sun set?

8. Below is a candle burning, which gas supports burning?



9. In which season do farmers harvest their crops?

10. Mention one natural change in the environment.

11. Gills are to fish as _____ are to plants.

12. Identify any one basic need of man.

13. Name the vitamin our skin makes from the sun.

14. Why isn't a spider an insect?

15. What vector spreads cholera?

16. How soil useful to people?

17. Why is carbon dioxide used in fire extinguishers?

18. Which part of a cassava plant is eaten?

19. **In the space below draw a hoe.**



20. Name any one living thing.

21. What food value do we get from eating beans?

22. A _____ is an injured person in an accident.

23. Underline the odd man out.

duck, turkey, chicken, bat.

24. What is germination?

25. Give one way of promoting sanitation at school

26. Which immunisable disease makes children get rashes on the skin?

27. Name the animal product used to make shoes and belts.

28. Give one way of preparing food.

29. Why is a dog a domestic animal?

30. How can we make water safe for drinking?

31. When do people use the item below?



32. Name the layer of soil where crops are grown.

33. How can we control the spread of malaria in our homes?

34. Name any one crop that can be grown in a swamp.

35. Give one use of electricity at home.

36. Name the instrument used by our school nurses to measure temperature of sick children.

37. How are feathers useful to a bird?

38. Why do we wash hands after visiting the latrine?

39. Write one way of caring for the hair.

40. Name one group of living things.

SECTION B (60 Marks)

41. a) What is sanitation?

b) State any two elements of a clean home.

i) _____

ii) _____

c) Why do we keep our home clean?

42. a) Mention any two components of the environment.

i) _____

ii) _____

b) Name any two man made changes in the environment.

i) _____

ii) _____

43. a) Name any two types of soil.
- i) _____
- ii) _____
- b) Write down any two things a P.3 pupil make from soil.
- i) _____
- ii) _____

44. a) Write any two natural sources of water.
- i) _____
- ii) _____
- b) How is water useful to people?
- i) _____
- ii) _____

45. **Match diseases to their vectors**

Disease

vector

Sleeping sickness

cockroach

Trachoma

anopheles mosquito

Polio

tsetse fly

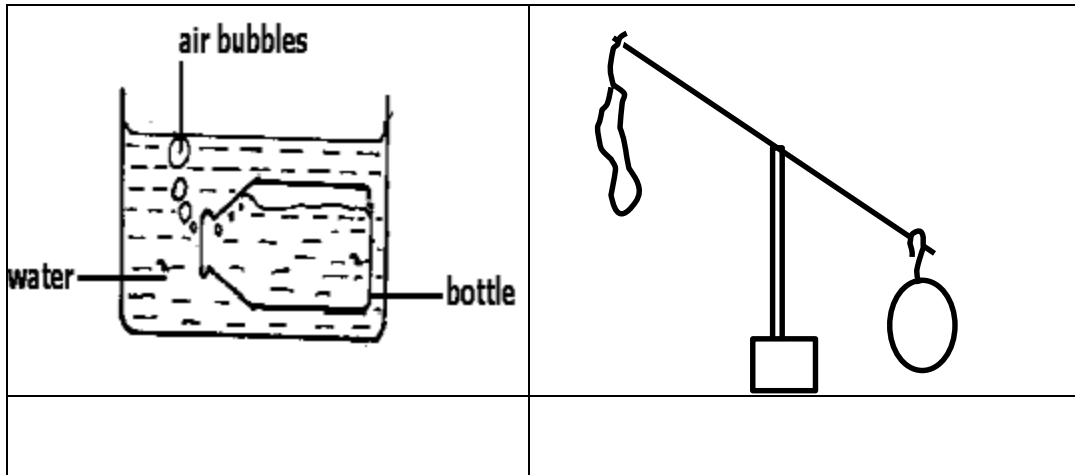
Malaria

housefly

- a. Sleeping sickness _____
- b. Trachoma _____
- c. Polio _____
- d. Malaria _____

46. a) What is air?
- _____

b) Identify the property of air shown below.



c) Name one game we play using air.

47. Identify the body part used for;

i) hearing _____

ii) smelling _____

b) feeling coldness or hotness _____

c) walking _____

48. a) What are wild animals?

b) Write any three examples of wild animals.

i) _____

ii) _____

iii) _____

49. a) Mention any three things people use to protect themselves on a rainy day.

i) _____

ii) _____

iii) _____

b) State one danger of heavy rain fall?

50. a) What is an accident.

b) Name any two common accidents at school.

i) _____

ii) _____

c) How can we control accidents at school?

51. a) Give one use of insects of people.

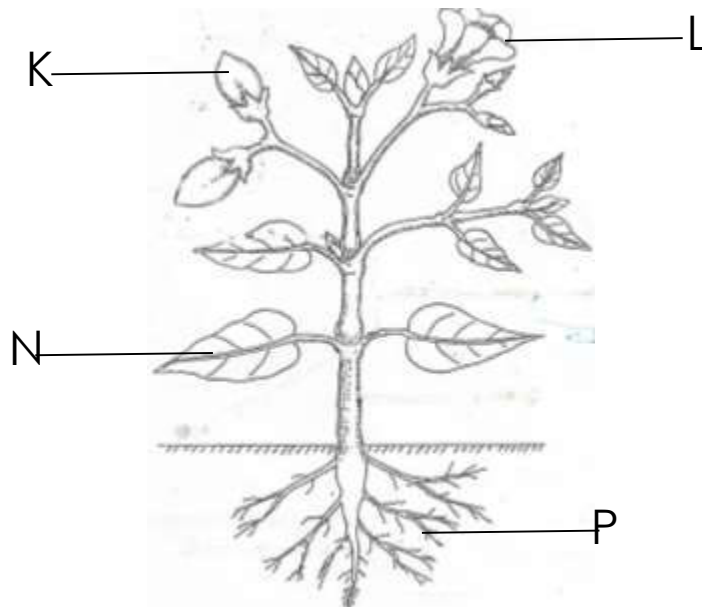
b) Write two examples to useful insects

i) _____

ii) _____

c) Name one insect whose habitat is an anthill.

52. The diagram below shows a flowering plant.



a) Name the parts labelled

i) K _____ ii) P _____

ii) N _____

b) Which part makes food for the plant?

53. a) Write any three methods of preserving food

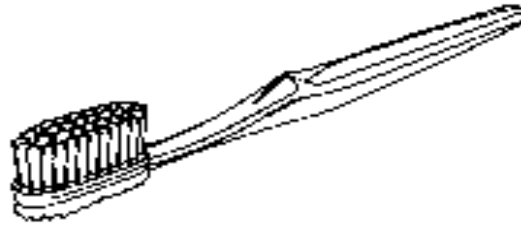
i) _____

ii) _____

iii) _____

b) Name one insect that contaminates food.

54. Use the diagram below to answer the questions



a) Name the item above.

b) How do you make use of the above item?

c) Name two other items you need when using the above item

i) _____

ii) _____

55. Use the words given in the box to fill in the gaps

**head, wings, sand, three, spiracles,
bush, antennae**

Insects have _____ main body parts. They lay their eggs in _____. They use there _____ for feeling. They breathe through _____.

End



KINGS WAY PRIMARY SCHOOL

P. 3 RECESS REVISION 2020-(SET FIVE)

RELIGIOUS EDUCATION

DURATION : 2 HOURS

NameStream.....

Read the following instructions carefully

1. The paper is made up of two sections **A** and **B** with two parts (Christianity and Islamic)
2. Section **A** has **20** questions (**40 marks**)
3. Section **B** has 15 questions (**60 marks**)
4. Answer Either **Christianity** or **Islamic** questions but not **BOTH** in a question.
5. All answers must be written in the spaces provided.

SECTION A

1. Either: What did God use to create man?

Or: What did Allah use to create man?

2. Either: Mention are animal god created to protect us.

Or: Mention one animal Allah created to protect us.

3. **Both**: Why do we pray?

4. Either: Who leads prayers in church.

Or: Who leads prayers in the mosque?

5. Either: Write CRE in full.

Or: Write IRE in full.

6. Either: In which book do we get God's message?

Or: In which book do we get Allah's messages?

7. Either: Name any one animal that is eaten by Christians.

Or: Name the animal that moslem do not eat.

8. Either: Who was the husband of Eve?

Or: Who was the husband of Haawa?

9. Either: On which day of the week do Christians go for prayers?

Or: On which day of the week do Moslem go for Juma.

10. Either: Who was the earthly father of Jesus?

Or: Who was the father of Prophet Mohammed?

11. Either: Mention one thing you can ask God through prayer.

Or: Mention one thing you can ask Allah through prayer.

12. Either: Why did God create on the last day?

Or: What did Allah create on the last day?

13. Either: How can we care for the animals God created?

Or: How can we care for the animals Allah created?

14. Either: Name one thing found in a church.

Or: Name one thing found in a mosque.

15. Either: In which town was Jesus born from?

Or: In which town was Prophet Muhamad born from?

16. Either: Name one Christian symbol.

Or: Name one Islamic symbol.

17. Either: How many days did God take to create the world?

Or: How many days did Allah take to create the world?

18. Either: For how long do Christians fast?

Or For how long do Muslims fast?

19. Either: Name one person who serves in the church.

Or: Name one person whow serves in the mosque.

20. Either: Who was the mother of Jesus Christ?

Or: Who was the mother of Prophet Mohammed?

SECTION B

21. Either: a) Mention any four groups of people who need help.

i) _____

ii) _____

iii) _____

iv) _____

Or: a) Mention any four groups of people who need help.

- i) _____
- ii) _____
- iii) _____
- iiii) _____

22. Either: Give any four things we ask from God

- i) _____
- ii) _____
- iii) _____
- iv) _____

Or: Mention any four things we ask from Allah.

- i) _____
- ii) _____
- iii) _____
- iv) _____

23. Either: a) Identify any four things that were created by God/Allah

- i) _____
- ii) _____
- iii) _____
- iv) _____

24. Both: **Match correctly:**

A

Bethlehem
Ramadhan
Peter
Moses

B

pulled out of water
The rock
Fasting period for Muslims
Jesus was born from there

- a) Bethlehem _____
- b) Ramadhan _____
- c) Peter _____
- d) Moses _____

25. Both: Give four ways how you can help your parents at home.

- i) _____
- ii) _____
- iii) _____
- v) _____

26. Either: a) Write down any four Christian names for boys.

- i) _____
- ii) _____
- iii) _____
- iv) _____

Or: Write down any four Muslim names for boys

- i) _____
- ii) _____
- iii) _____
- iv) _____

27. Either: Write down any four commandments that God gave to Moses.

i) _____

ii) _____

iii) _____

iv) _____

Or: a) Name any four prophets in Islam.

i) _____

ii) _____

iii) _____

iv) _____

28. Either: Draw and name any four domestic animals.

Or: Draw and name any four wild animals.

29. **Both:** a) What is a sin?

b) Give any three example of sin

i) _____

ii) _____

iii) _____

30. **Both:** Give any four body gifts that God has given you.

i) _____

ii) _____

iii) _____

iv) _____

31. **Either:** a) What is prayer?

b) Which prayer did Jesus teach to His apostles?

c) Name any two things we ask for in the Lord's prayer.

i) _____

ii) _____

Or: a) What is Salat?

b) Which prayer is said Muslims on Friday?

i) _____

ii) _____

c) Write two reasons why Muslims pray.

i) _____

ii) _____

32. **Both:** Name any four groups of people who help us do work at school.

i) _____

ii) _____

iii) _____

iv) _____

33. **Both:** Identify any four books found in the bible.

i) _____

ii) _____

iii) _____

iv) _____

34. **Both:** Write down any four qualities of a good P.3 pupils.

i) _____

ii) _____

iii) _____

iv) _____

35. **Both:** Write down any four common traditional practices or customs

i) _____

ii) _____

iii) _____

iv) _____



KINGS WAY PRIMARY SCHOOL

P. 3 RECESS REVISION 2020-(SET FIVE)

READING

NAME: _____ Stream _____

Say these sounds and syllables

a, e, bra, bo, te, vi, wi, si, z, fo
(1mk each)

Read these names correctly

Matama	Liko	Bawo	Tamazu
Vivima	Maviri	Tamale	Zumata
Bingo	Mao		(2mks each)

Read these words correctly

tin	boat	bag	universe
spot	struck	smart	inside
before	between	direction	
season	garden	compass	land
			(2mks each)

Read the story correctly

THE BIG SNAKE

One day, Okello was going to school. On his way he passed near a small bush. He met a big snake and started crying. An old man, Kato heard Okello crying he ran to help him with his dog Dingo